

SSC CPO Oct 03, 2023 Shift 1 Question Paper

Roll Number	
Candidate Name	
Venue Name	
Exam Date	03/10/2023
Exam Time	9:00 AM - 11:00 AM
Subject	SICPO Paper I 2023

Section : General Intelligence and Reasoning

Q.1 Select the option in which the given figure is embedded (rotation is NOT allowed).



Ans

- ✖ 1.
- ✖ 2.
- ✖ 3.
- ✔ 4.

Question ID : 264330126081
Option 1 ID : 264330493996
Option 2 ID : 264330493998
Option 3 ID : 264330493997
Option 4 ID : 264330493999
Status : Answered
Chosen Option : 4

Q.2 Which letter cluster will replace the question mark (?) to complete the given series?

ELSV, FJVR, GHYN, ?, IDEF

- Ans
- ☒ 1. HFJB
 - ☒ 2. HBJF
 - ☒ 3. HFBJ
 - ☒ 4. GHFJ

Question ID : 264330145423
Option 1 ID : 264330569948
Option 2 ID : 264330569949
Option 3 ID : 264330569947
Option 4 ID : 264330569950
Status : Answered
Chosen Option : 3

Q.3 Three of the following four letter-clusters are alike in a certain way and one is different.
Pick the odd one out.

- Ans
- ☒ 1. WVTD
 - ☒ 2. JIGQ
 - ☒ 3. SRPH
 - ☒ 4. KLNP

Question ID : 26433068792
Option 1 ID : 264330269681
Option 2 ID : 264330269683
Option 3 ID : 264330269680
Option 4 ID : 264330269682
Status : Answered
Chosen Option : 4

Q.4 Seven people, A, B, C, D, E, F and G, are sitting in a straight row, facing north (not necessarily in the same order). Only 1 person sits to the left of D. A is an immediate neighbour of D. Only 2 people sit between F and D. Only 3 people sit between C and G. B is not an immediate neighbour of G. Only 2 people sit between E and A. Who sits at the extreme right end of the row?

- Ans
- ☒ 1. A
 - ☒ 2. G
 - ☒ 3. C
 - ☒ 4. B

Question ID : 264330145408
Option 1 ID : 264330569887
Option 2 ID : 264330569889
Option 3 ID : 264330569888
Option 4 ID : 264330569890
Status : Answered
Chosen Option : 3

Q.5 In a certain code language, 'GAME' is coded as '8426' and 'MUST' is coded as '7853'.
What is the code for 'M' in the given code language?

- Ans ☒ 1. 8
 ☒ 2. 2
 ☒ 3. 3
 ☒ 4. 7

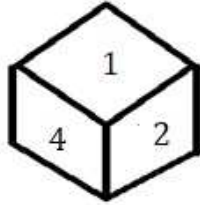
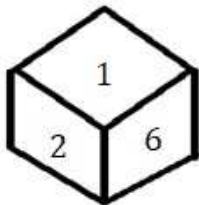
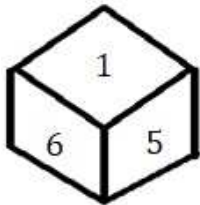
Question ID : 264330169655
Option 1 ID : 264330665319
Option 2 ID : 264330665320
Option 3 ID : 264330665322
Option 4 ID : 264330665321
Status : Answered
Chosen Option : 1

Q.6 Two statements are given, followed by two conclusions numbered I and II. Assuming the statements to be true, even if they seem to be at variance with commonly known facts, decide which of the conclusions logically follow(s) from the statements.
Statements:
All flowers are trees.
All leaves are flowers.
Conclusion:
I)All trees are flowers.
II)All leaves are trees.

- Ans ☒ 1. Only Conclusion I follows
 ☒ 2. Neither Conclusion I nor II follows.
 ☒ 3. Only Conclusion II follows.
 ☒ 4. Both Conclusions I and II follow.

Question ID : 26433067706
Option 1 ID : 264330265336
Option 2 ID : 264330265339
Option 3 ID : 264330265337
Option 4 ID : 264330265338
Status : Answered
Chosen Option : 3

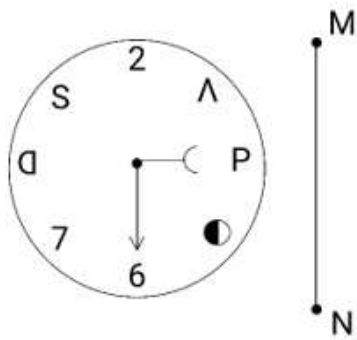
Q.7 Three different positions of the same dice are shown. Find the number on the face opposite the face showing '1'.



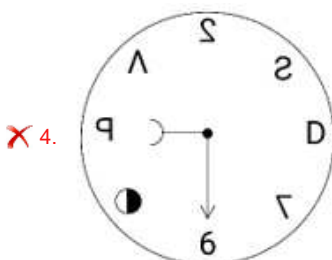
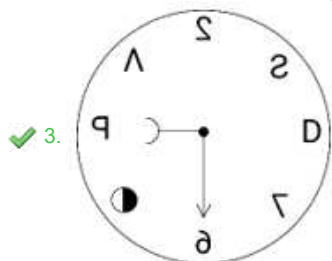
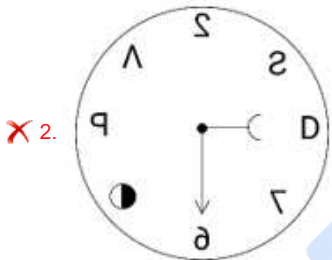
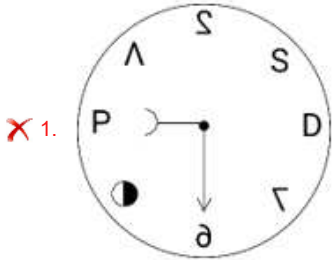
- Ans ☒ 1. 3
 ☒ 2. 2
 ☒ 3. 6
 ☒ 4. 4

Question ID : 264330108971
Option 1 ID : 264330428163
Option 2 ID : 264330428162
Option 3 ID : 264330428161
Option 4 ID : 264330428164
Status : Answered
Chosen Option : 1

Q.8 Select the correct mirror image of the given figure, when the mirror is placed at line MN as shown.



Ans



Question ID : 264330170165

Option 1 ID : 264330667335

Option 2 ID : 264330667336

Option 3 ID : 264330667338

Option 4 ID : 264330667337

Status : Answered

Chosen Option : 3

Q.9 If '+' means '-', '-' means 'x', 'x' means '÷', '÷' means '+', then what will come in place of the question mark (?) in the following equation?
 $137 \div 56 \times 7 - 6 + 31 = ?$

- Ans
- ☒ 1. 149
 - ☒ 2. 163
 - ☒ 3. 145
 - ☒ 4. 154

Question ID : 264330126058
Option 1 ID : 264330493905
Option 2 ID : 264330493906
Option 3 ID : 264330493904
Option 4 ID : 264330493907
Status : Answered
Chosen Option : 4

Q.10 Select the option that represents the correct order of the given words as they would appear in an English dictionary?
1.Lollipop
2.Loincloth
3.Longways
4.Logician
5.Lonely

- Ans
- ☒ 1. 3, 2, 1, 5, 4
 - ☒ 2. 4, 3, 1, 5, 2
 - ☒ 3. 4, 2, 1, 5, 3
 - ☒ 4. 3, 4, 1, 5, 2

Question ID : 26433067241
Option 1 ID : 264330263479
Option 2 ID : 264330263477
Option 3 ID : 264330263478
Option 4 ID : 264330263476
Status : Answered
Chosen Option : 3

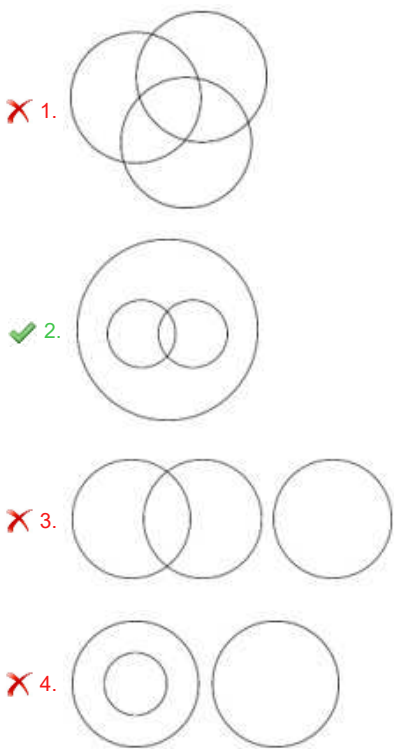
Q.11 Which of the following terms will replace the question mark (?) in the given series?
ABEG FFHI KJKK PNNM ?

- Ans
- ☒ 1. URQO
 - ☒ 2. VRQO
 - ☒ 3. RUQO
 - ☒ 4. UROQ

Question ID : 26433085320
Option 1 ID : 264330334982
Option 2 ID : 264330334984
Option 3 ID : 264330334983
Option 4 ID : 264330334981
Status : Answered
Chosen Option : 1

Q.12 Select the Venn diagram that best illustrates the relationship between the following classes.
Electrical Appliance, Refrigerator, Freezer

Ans



Question ID : 264330132924
Option 1 ID : 264330520757
Option 2 ID : 264330520755
Option 3 ID : 264330520756
Option 4 ID : 264330520758
Status : Answered
Chosen Option : 2

Q.13 Select the set in which the numbers are related in the same way as are the numbers of the following sets.

(NOTE : Operations should be performed on the whole numbers, without breaking down the numbers into its constituent digits. E.g. 13 – Operations on 13 such as adding /subtracting /multiplying etc. to 13 can be performed. Breaking down 13 into 1 and 3 and then performing mathematical operations on 1 and 3 is NOT allowed)

(7, 35, 42), (4, 20, 24)

- Ans ✗ 1. (8, 56, 72)
- ✗ 2. (6, 36, 48)
- ✓ 3. (9, 45, 54)
- ✗ 4. (12, 60, 48)

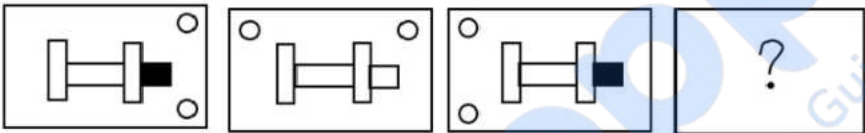
Question ID : 264330145301
Option 1 ID : 264330569462
Option 2 ID : 264330569461
Option 3 ID : 264330569459
Option 4 ID : 264330569460
Status : Answered
Chosen Option : 3

Q.14 A person starts from point Z and moves 7 km towards the South. He turns right and moves 5 km, turns right, and moves 3 km, then turns right and moves 1 km. He takes a left turn and moves 4 km to reach a point X. How much and in which direction does he need to move now to reach point Z?

- Ans
- ☒ 1. 4 km South
 - ☒ 2. 4 km East
 - ☒ 3. 4 km West
 - ☒ 4. 6 km East

Question ID : 26433081451
Option 1 ID : 264330319638
Option 2 ID : 264330319639
Option 3 ID : 264330319637
Option 4 ID : 264330319640
Status : Answered
Chosen Option : 2

Q.15 Select the figure that will replace the question mark (?) in the following figure series.

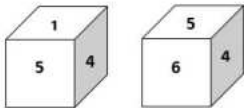


Ans

- ☒ 1.
- ☒ 2.
- ☒ 3.
- ☒ 4.

Question ID : 26433065985
Option 1 ID : 264330258484
Option 2 ID : 264330258485
Option 3 ID : 264330258487
Option 4 ID : 264330258486
Status : Answered
Chosen Option : 1

Q.16 Two different positions of the same dice are shown, the six faces of which are numbered from 1 to 6. Select the number that will be on the face opposite to the one showing '1'.



- Ans**
- ☒ 1. 6
 - ☐ 2. 4
 - ☐ 3. 5
 - ☐ 4. 3

Question ID : 26433058063
Option 1 ID : 264330227239
Option 2 ID : 264330227237
Option 3 ID : 264330227238
Option 4 ID : 264330227236
Status : Answered
Chosen Option : 1

Q.17 Two statements are given, followed by two conclusions numbered I and II. Assuming the statements to be true, even if they seem to be at variance with commonly known facts, decide which of the conclusions logically follow(s) from the statements.

Statements:
All plants are vegetables.
Some plants are poisonous.
Conclusions:
I. All vegetables are poisonous.
II. Some vegetables are plants.

- Ans**
- ☐ 1. Neither conclusion I nor II follows
 - ☐ 2. Only conclusion I follows
 - ☐ 3. Both conclusions I and II follow
 - ☒ 4. Only conclusion II follows

Question ID : 26433056711
Option 1 ID : 264330221831
Option 2 ID : 264330221828
Option 3 ID : 264330221830
Option 4 ID : 264330221829
Status : Answered
Chosen Option : 4

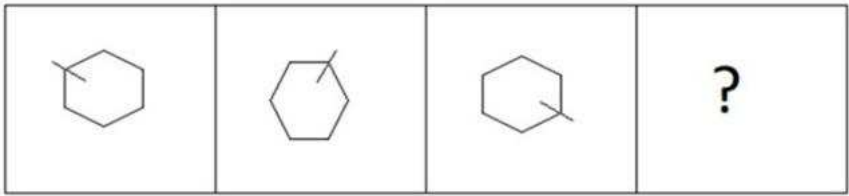
Q.18 Select the correct option that indicates the arrangement of the given words in the order in which they appear in an English dictionary.

- 1. Desire
- 2. Destination
- 3. Descend
- 4. Destructive
- 5. Desolate
- 6. Desperate

- Ans**
- ☐ 1. 3, 1, 2, 6, 5, 4
 - ☐ 2. 3, 1, 6, 5, 2, 4
 - ☒ 3. 3, 1, 5, 6, 2, 4
 - ☐ 4. 3, 1, 5, 6, 4, 2

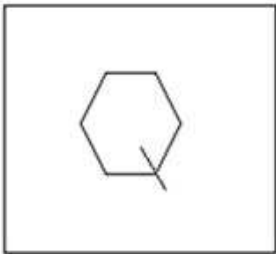
Question ID : 264330145377
Option 1 ID : 264330569763
Option 2 ID : 264330569764
Option 3 ID : 264330569765
Option 4 ID : 264330569766
Status : Answered
Chosen Option : 3

Q.19 Select the figure that will come next in the following figure series.

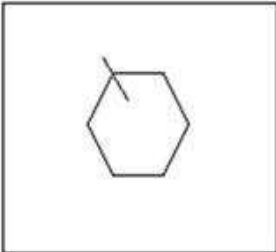


Ans

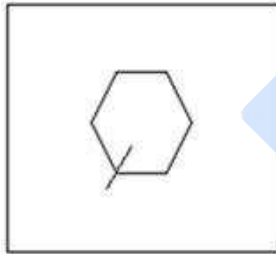
✗ 1.



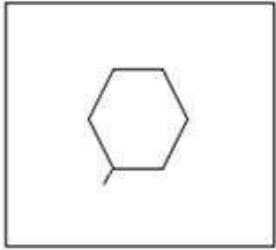
✗ 2.



✓ 3.



✗ 4.

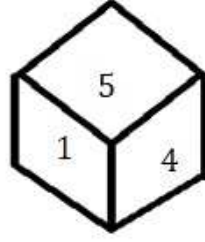
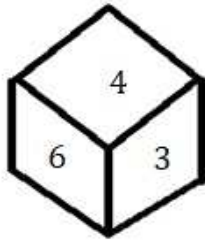
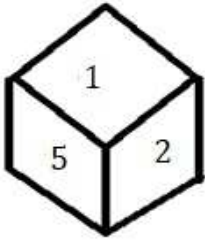


Question ID : 26433087076
Option 1 ID : 264330341947
Option 2 ID : 264330341948
Option 3 ID : 264330341945
Option 4 ID : 264330341946

Status : Answered

Chosen Option : 3

Q.20 Three different positions of the same dice are shown. Find the number on the face opposite the face showing '4'.



- Ans
- ☐ 1. 6
 - ☒ 2. 2
 - ☐ 3. 3
 - ☐ 4. 1

Question ID : 264330108967

Option 1 ID : 264330428148

Option 2 ID : 264330428146

Option 3 ID : 264330428147

Option 4 ID : 264330428145

Status : Answered

Chosen Option : 2

Q.21 Select the set in which the numbers are related in the same way as are the numbers of the following sets.

(NOTE : Operations should be performed on the whole numbers, without breaking down the numbers into its constituent digits. E.g. 13 – Operations on 13 such as adding /subtracting /multiplying etc. to 13 can be performed. Breaking down 13 into 1 and 3 and then performing mathematical operations on 1 and 3 is NOT allowed)

(264, 462), (132, 330)

- Ans
- ☐ 1. (211, 340)
 - ☐ 2. (188, 378)
 - ☒ 3. (386, 584)
 - ☐ 4. (282, 496)

Question ID : 264330145296

Option 1 ID : 264330569440

Option 2 ID : 264330569439

Option 3 ID : 264330569442

Option 4 ID : 264330569441

Status : Not Attempted and
Marked For Review

Chosen Option : --

Q.22 If A denotes '+', B denotes '×', C denotes '−', and D denotes '÷', then what will come in place of '?' in the following equation?
 $2\text{ B }? \text{ D }2 = 4\text{ B }32 \text{ D }8$

- Ans
- ☐ 1. 12
 - ☐ 2. 30
 - ☒ 3. 16
 - ☐ 4. 8

Question ID : 26433067669

Option 1 ID : 264330265188

Option 2 ID : 264330265189

Option 3 ID : 264330265191

Option 4 ID : 264330265190

Status : Answered

Chosen Option : 3

Q.23 If '+' means 'x', 'x' means '-', '-' means '÷' and '÷' means '+', then what will come in place of the (?) in the following equation?
 $250 - 10 + 10 \times 5 \div 2 = ?$

- Ans ☒ 1. 247
☒ 2. 167
☒ 3. 320
☒ 4. 234

Question ID : 264330114250
Option 1 ID : 264330449087
Option 2 ID : 264330449086
Option 3 ID : 264330449088
Option 4 ID : 264330449085
Status : Answered
Chosen Option : 1

Q.24 Four letter-clusters have been given, out of which three are alike in some manner and one is different. Select the odd letter-cluster.

- Ans ☒ 1. WYRS
☒ 2. PSJK
☒ 3. PRKL
☒ 4. FHAB

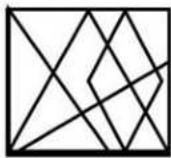
Question ID : 264330180750
Option 1 ID : 264330708970
Option 2 ID : 264330708969
Option 3 ID : 264330708967
Option 4 ID : 264330708968
Status : Answered
Chosen Option : 2

Q.25 In a certain code language, 'VATT' is coded as '65' and 'STOLK' is coded as '79'. How will 'GENEROUS' be coded in that language?

- Ans ☒ 1. 116
☒ 2. 216
☒ 3. 204
☒ 4. 106

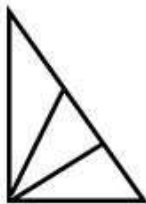
Question ID : 26433079048
Option 1 ID : 264330310198
Option 2 ID : 264330310199
Option 3 ID : 264330310196
Option 4 ID : 264330310197
Status : Answered
Chosen Option : 4

Q.26 Select the option that is embedded in the given figure as its part (rotation is NOT allowed).

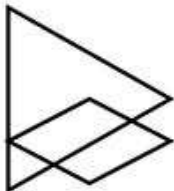


Ans

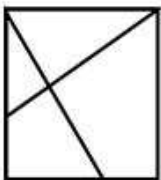
✓ 1.



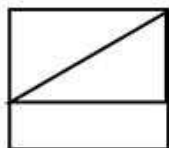
✗ 2.



✗ 3.



✗ 4.



Question ID : 264330145467
Option 1 ID : 264330570125
Option 2 ID : 264330570126
Option 3 ID : 264330570124
Option 4 ID : 264330570123
Status : Answered
Chosen Option : 1

Q.27 If '+' means '÷', '-' means '+', 'x' means '-' and '÷' means 'x', what will be the value of the following expression?
$$[[(14 \times 6) - (4 \div 3)] + (6 - 4)] \div 3$$

- Ans ✗ 1. 3
✓ 2. 6
✗ 3. 1
✗ 4. 9

Question ID : 264330129643
Option 1 ID : 264330507939
Option 2 ID : 264330507940
Option 3 ID : 264330507938
Option 4 ID : 264330507941
Status : Answered
Chosen Option : 2

Q.28 Select the option that is related to the fifth letter-cluster in the same way as the second letter-cluster is related to the first letter-cluster and the fourth letter-cluster is related to the third letter-cluster.

TEMPLE : SCJLGY :: CHURCH : BFRNXB :: MOSQUE : ?

- Ans
- ☒ 1. LMPYPM
 - ☒ 2. LMPYMP
 - ☒ 3. LPYMPM
 - ☒ 4. LMPMPY

Question ID : 264330145394
Option 1 ID : 264330569831
Option 2 ID : 264330569834
Option 3 ID : 264330569833
Option 4 ID : 264330569832
Status : Answered
Chosen Option : 4

Q.29 In a certain code language, 'COURT' is coded as OCRTR and 'JUDGE' is coded as UJAEG. How will 'ORDER' be coded in the same language?

- Ans
- ☒ 1. LDRRE
 - ☒ 2. ROARE
 - ☒ 3. REARO
 - ☒ 4. ROBRE

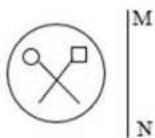
Question ID : 264330132206
Option 1 ID : 264330517919
Option 2 ID : 264330517921
Option 3 ID : 264330517920
Option 4 ID : 264330517922
Status : Answered
Chosen Option : 2

Q.30 Which of the following numbers will replace the question mark (?) in the given series?
115, 130, 122, 137, 129, ?

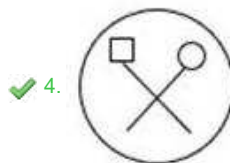
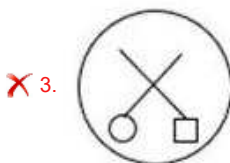
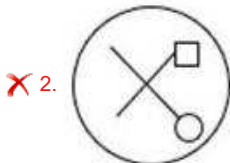
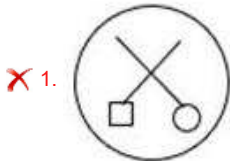
- Ans
- ☒ 1. 144
 - ☒ 2. 142
 - ☒ 3. 148
 - ☒ 4. 150

Question ID : 26433057327
Option 1 ID : 264330224293
Option 2 ID : 264330224292
Option 3 ID : 264330224294
Option 4 ID : 264330224295
Status : Answered
Chosen Option : 1

Q.31 Select the correct mirror image of the given figure when the mirror is placed at line MN as shown.



Ans



Question ID : 26433056630
Option 1 ID : 264330221506
Option 2 ID : 264330221507
Option 3 ID : 264330221504
Option 4 ID : 264330221505
Status : Answered
Chosen Option : 4

Q.32 In a certain code language, 'FLORA' is written as 'WQOLC' and 'MONEY' is written as 'PNPYE'. How will 'GOING' be written in that language?

Ans ✓ 1. VNUPW

✗ 2. RMWEH

✗ 3. VBUDP

✗ 4. RHKSR

Question ID : 26433074757
Option 1 ID : 264330293118
Option 2 ID : 264330293119
Option 3 ID : 264330293116
Option 4 ID : 264330293117
Status : Answered
Chosen Option : 1

Q.33 Select the set in which the numbers are related in the same way as are the numbers of the following set.

(NOTE : Operations should be performed on the whole numbers, without breaking down the numbers into its constituent digits. E.g. 13 – Operations on 13 such as adding /subtracting/ multiplying etc. to 13 can be performed. Breaking down 13 into 1 and 3 and then performing mathematical operations on 1 and 3 is NOT allowed)

(6, 2, 96)
(5, 6, 240)

- Ans ☒ 1. (4,1,6)
☒ 2. (12,3,45)
☒ 3. (1,2,16)
☒ 4. (8,3,28)

Question ID : 264330145319
Option 1 ID : 264330569533
Option 2 ID : 264330569531
Option 3 ID : 264330569534
Option 4 ID : 264330569532
Status : Answered
Chosen Option : 3

Q.34 Study the given pattern carefully and select the number that can replace the question mark (?) in it.
First row: 19, 6, 37
Second row: 21, 8, 45
Third row: 72, 14, ?

(NOTE : Operations should be performed on the whole numbers, without breaking down the numbers into its constituent digits. E.g. 13 – Operations on 13 such as adding /subtracting /multiplying etc. to 13 can be performed. Breaking down 13 into 1 and 3 and then performing mathematical operations on 1 and 3 is not allowed)

- Ans ☒ 1. 124
☒ 2. 134
☒ 3. 114
☒ 4. 144

Question ID : 26433068248
Option 1 ID : 264330267505
Option 2 ID : 264330267504
Option 3 ID : 264330267506
Option 4 ID : 264330267507
Status : Not Answered
Chosen Option : --

Q.35 If A denotes '+', B denotes '×', C denotes '−', and D denotes '÷', then what will be the value of the following expression?
39 D 13 B 2 C 6 A 8

- Ans ☒ 1. 10
☒ 2. 8
☒ 3. 12
☒ 4. 9

Question ID : 26433068700
Option 1 ID : 264330269314
Option 2 ID : 264330269313
Option 3 ID : 264330269312
Option 4 ID : 264330269315
Status : Answered
Chosen Option : 2

Q.36 Select the set in which the numbers are related in the same way as are the numbers of the following sets.

(NOTE : Operations should be performed on the whole numbers, without breaking down the numbers into its constituent digits. E.g. 13- Operations on 13 such as adding /subtracting /multiplying etc. to 13 can be performed. Breaking down 13 into 1 and 3 and then performing mathematical operations on 1 and 3 is not allowed.)

(7, 91, 98)
(4, 52, 56)

Ans ☒ 1. (12, 156, 168)

☐ 2. (3, 36, 42)

☐ 3. (8, 80, 96)

☐ 4. (5, 25, 60)

Question ID : 26433057449

Option 1 ID : 264330224782

Option 2 ID : 264330224781

Option 3 ID : 264330224783

Option 4 ID : 264330224780

Status : Answered

Chosen Option : 1

Q.37 If A denotes '+', B denotes '×', C denotes '−', and D denotes '÷', then what will be the value of the following equation?

96 D 3 B 8 C 25 A 14 = ?

Ans ☐ 1. 217

☐ 2. 234

☐ 3. 254

☒ 4. 245

Question ID : 264330129781

Option 1 ID : 264330508356

Option 2 ID : 264330508358

Option 3 ID : 264330508357

Option 4 ID : 264330508355

Status : Answered

Chosen Option : 4

Q.38 If A denotes '+', B denotes '×', C denotes '−', and D denotes '÷', then what will come in place of '?' in the following equation?

7 A 3 B 24 D 2 = 20 B ? A 3

Ans ☒ 1. 2

☐ 2. 20

☐ 3. 14

☐ 4. 7

Question ID : 26433067663

Option 1 ID : 264330265167

Option 2 ID : 264330265164

Option 3 ID : 264330265166

Option 4 ID : 264330265165

Status : Answered

Chosen Option : 1

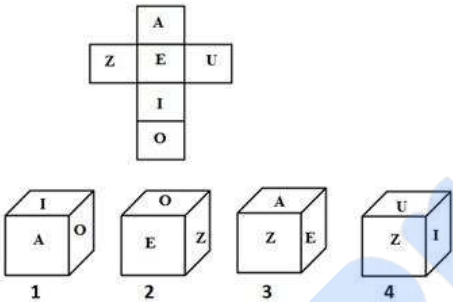
Q.39 Which of the following numbers will replace the question mark (?) in the given series?

35, ?, 40, 47, 45, 53

- Ans ☒ 1. 37
☒ 2. 43
☒ 3. 42
☒ 4. 41

Question ID : 26433091009
Option 1 ID : 264330357446
Option 2 ID : 264330357448
Option 3 ID : 264330357445
Option 4 ID : 264330357447
Status : Answered
Chosen Option : 4

Q.40 If the given sheet is folded to form a cube, which of the given figures is/are possible?
(The elements are shown to indicate the sides only.)



- Ans ☒ 1. Only 1 and 2
☒ 2. Only 1, 2 and 4
☒ 3. Only 2 and 3
☒ 4. Only 3

Question ID : 26433065678
Option 1 ID : 264330257272
Option 2 ID : 264330257275
Option 3 ID : 264330257273
Option 4 ID : 264330257274
Status : Answered
Chosen Option : 4

Q.41 Which figure from the given options would replace the question mark (?) if the following figure series were to be continued?

BLAST	LBPTS	SLBPT	LSCTP	?
-------	-------	-------	-------	---

Ans

✗ 1.

SLDPT

✗ 2.

SCTPL

✗ 3.

PLTSC

✓ 4.

PLSCT

Question ID : 264330145482
Option 1 ID : 264330570185
Option 2 ID : 264330570183
Option 3 ID : 264330570186
Option 4 ID : 264330570184
Status : Answered
Chosen Option : 4

Q.42 Which of the following numbers will replace the question mark (?) in the given series?
-1/729, -1/81, -1/9, ?

Ans ✗ 1. 1

✓ 2. -1

✗ 3. -1/3

✗ 4. 1/3

Question ID : 26433092495
Option 1 ID : 264330363269
Option 2 ID : 264330363270
Option 3 ID : 264330363271
Option 4 ID : 264330363272
Status : Answered
Chosen Option : 3

Q.43 Which letter-cluster will replace the question mark (?) to complete the given series?
MKPN, LMOP, ?, JQMT, ISLV

- Ans
- ☐ 1. KOLT
 - ☐ 2. KNNQ
 - ☐ 3. KNMR
 - ☒ 4. KONR

Question ID : 2643307662
Option 1 ID : 264330300715
Option 2 ID : 264330300714
Option 3 ID : 264330300712
Option 4 ID : 264330300713
Status : Answered
Chosen Option : 4

Q.44 Select the option that is related to the third word in the same way as the second word is related to the first word. (The words must be considered as meaningful words and must not be related to each other based on the number of letters/number of consonants/vowels in the word.)
Butterfly : Caterpillar :: Insect : ?

- Ans
- ☐ 1. Cygnet
 - ☐ 2. Nymph
 - ☒ 3. Larva
 - ☐ 4. Microbes

Question ID : 26433091602
Option 1 ID : 264330359775
Option 2 ID : 264330359774
Option 3 ID : 264330359773
Option 4 ID : 264330359776
Status : Answered
Chosen Option : 3

Q.45 Six friends are sitting in a circle. All of them are facing the centre. Kanak sits third to the right of Sona. Kapil is an immediate neighbour of Mani. Goldy sits second to the right of Mani. Sona is an immediate neighbour of Kapil and Suresh. Who sits to the immediate right of Goldy?

- Ans
- ☐ 1. Sona
 - ☐ 2. Kapil
 - ☐ 3. Kanak
 - ☒ 4. Suresh

Question ID : 264330145405
Option 1 ID : 264330569877
Option 2 ID : 264330569876
Option 3 ID : 264330569875
Option 4 ID : 264330569878
Status : Answered
Chosen Option : 4

Q.46 L is the wife of Q. P is the mother of M. J is the father of L. M is the sister of H. J is the husband of H. How is P related to L?

- Ans ☒ 1. Mother's mother
- ☐ 2. Sister's son
- ☐ 3. Mother's sister
- ☐ 4. Sister's husband

Question ID : 264330126021
Option 1 ID : 264330493757
Option 2 ID : 264330493759
Option 3 ID : 264330493756
Option 4 ID : 264330493758
Status : Answered
Chosen Option : 1

Q.47 'A = B' means 'A is the father of B'.
'A \$ B' means 'A is the sister of B'.
'A * B' means 'A is the mother of B'.
'A ? B' means 'A is the son of B'.
If M ? C \$ J * Z, then how is J related to M?

- Ans ☐ 1. Sister
- ☒ 2. Mother's sister
- ☐ 3. Mother's mother
- ☐ 4. Brother

Question ID : 264330145385
Option 1 ID : 264330569795
Option 2 ID : 264330569798
Option 3 ID : 264330569797
Option 4 ID : 264330569796
Status : Answered
Chosen Option : 2

Q.48 Rohit drives 3 km towards north from point A. He takes a left turn and drives 4 km. Again he takes a left turn and drives 6 km. Finally, he takes a left turn and drives 4 km to reach point B. How far and towards which direction should he drive in order to reach point A again?

- Ans ☐ 1. 4 km towards south
- ☐ 2. 3 km towards east
- ☒ 3. 3 km towards north
- ☐ 4. 2 km towards west

Question ID : 26433068272
Option 1 ID : 264330267600
Option 2 ID : 264330267603
Option 3 ID : 264330267601
Option 4 ID : 264330267602
Status : Answered
Chosen Option : 3





Q.49 In a certain code language, 'FRIEND' is written as 'IIFDME' and 'DEMAND' is written as 'MVDDMA'. How will 'GROUND' be written in that language?

- Ans
- ☒ 1. DOTENC
 - ☒ 2. PXKRYs
 - ☒ 3. OIGDMU
 - ☒ 4. OFTSBU

Question ID : 26433074762
Option 1 ID : 264330293138
Option 2 ID : 264330293139
Option 3 ID : 264330293137
Option 4 ID : 264330293136
Status : Answered
Chosen Option : 3

Q.50 Select the Venn diagram that best illustrates the relationship between the following classes.

Pencil, Eraser, Sharpener

- Ans
- ☒ 1. 
 - ☒ 2. 
 - ☒ 3. 
 - ☒ 4. 

Question ID : 264330145357
Option 1 ID : 264330569683
Option 2 ID : 264330569686
Option 3 ID : 264330569685
Option 4 ID : 264330569684
Status : Answered
Chosen Option : 2

Section : General Knowledge and General Awareness

Q.1 Which of the following does NOT belong to the family of organic compounds?

- Ans
- ☒ 1. Ammonia
 - ☒ 2. Nonane
 - ☒ 3. Furan
 - ☒ 4. Decane

Question ID : 264330131690
Option 1 ID : 264330515860
Option 2 ID : 264330515859
Option 3 ID : 264330515862
Option 4 ID : 264330515861
Status : Answered
Chosen Option : 2

Q.2 In November 2020, _____ has set a record of becoming the world's fastest piano player ever.

- Ans** ☒ 1. Lydian Nadhaswaram
 ☐ 2. Anisrinivasan
 ☐ 3. Gauri Mishra
 ☐ 4. Shikha Chaurasia

Question ID : 264330145151
Option 1 ID : 264330568862
Option 2 ID : 264330568861
Option 3 ID : 264330568859
Option 4 ID : 264330568860
Status : **Answered**
Chosen Option : 4

Q.3 For Kharif crops, the temperature required for farming is above 25 degrees Celsius with high humidity and annual rainfall above _____ cm.

- Ans** ☐ 1. 16
 ☒ 2. 100
 ☐ 3. 35
 ☐ 4. 50

Question ID : 264330163197
Option 1 ID : 264330640099
Option 2 ID : 264330640102
Option 3 ID : 264330640101
Option 4 ID : 264330640100
Status : **Answered**
Chosen Option : 1

Q.4 Bhutia dance is performed in which of the following states?

- Ans** ☐ 1. West Bengal
 ☐ 2. Odisha
 ☒ 3. Sikkim
 ☐ 4. Nagaland

Question ID : 264330164793
Option 1 ID : 264330646300
Option 2 ID : 264330646302
Option 3 ID : 264330646299
Option 4 ID : 264330646301
Status : **Answered**
Chosen Option : 2

Q.5 With which neighbouring country did India sign the Farakka Treaty in 1996 for sharing of the Ganga Waters and on augmenting its flows?

- Ans** ☐ 1. Bhutan
 ☒ 2. Bangladesh
 ☐ 3. Nepal
 ☐ 4. Afghanistan

Question ID : 264330111362
Option 1 ID : 264330437536
Option 2 ID : 264330437534
Option 3 ID : 264330437535
Option 4 ID : 264330437533
Status : **Answered**
Chosen Option : 2

Q.6 Which ruler of the Chahamana dynasty made Ajmer his capital?

- Ans ☒ 1. Ajayaraja
- ☐ 2. Prithviraj II
- ☐ 3. Arnoraj
- ☐ 4. Prithviraj III

Question ID : 264330109001
Option 1 ID : 264330428282
Option 2 ID : 264330428283
Option 3 ID : 264330428281
Option 4 ID : 264330428284
Status : Not Answered
Chosen Option : --

Q.7 How many Members of Parliament were elected from Punjab to the 17th Lok Sabha?

- Ans ☐ 1. 14
- ☐ 2. 15
- ☒ 3. 13
- ☐ 4. 17

Question ID : 264330114610
Option 1 ID : 264330450526
Option 2 ID : 264330450527
Option 3 ID : 264330450525
Option 4 ID : 264330450528
Status : Answered
Chosen Option : 4

Q.8 In India, which of the following regulatory mechanisms was NOT in existence to enforce regulation of the industrial sector?

- Ans ☐ 1. Industrial licensing under which every entrepreneur had to get permission from government officials to start a firm, close a firm or decide the amount of goods that could be produced.
- ☐ 2. Controls on price fixation and distribution of selected industrial products.
- ☒ 3. Private sector was allowed in all industries.
- ☐ 4. Some goods could be produced only in small-scale industries.

Question ID : 26433064577
Option 1 ID : 264330252900
Option 2 ID : 264330252903
Option 3 ID : 264330252901
Option 4 ID : 264330252902
Status : Not Attempted and Marked For Review
Chosen Option : --

Q.9 Who among the following Indian authors has written the autobiography titled ‘My Story’?

- Ans
- ☐ 1. Arundhati Roy
 - ☐ 2. Shobha Dey
 - ☐ 3. Kiran Desai
 - ☒ 4. Kamala Das

Question ID : 26433071471
Option 1 ID : 264330280310
Option 2 ID : 264330280309
Option 3 ID : 264330280311
Option 4 ID : 264330280308
Status : Answered
Chosen Option : 2

Q.10 Methyl ethyl ketone is also known as:

- Ans
- ☒ 1. 2-butanone
 - ☐ 2. propanone
 - ☐ 3. methyl pentanone
 - ☐ 4. 2-butanol

Question ID : 264330131776
Option 1 ID : 264330516205
Option 2 ID : 264330516203
Option 3 ID : 264330516206
Option 4 ID : 264330516204
Status : Answered
Chosen Option : 4

Q.11 Which of the following statements is NOT correct about fundamental duties in the Indian Constitution?

- Ans
- ☐ 1. They are made to value and preserve the rich heritage of our composite culture.
 - ☐ 2. They are made to cherish and follow the noble ideals which inspired our national struggle for freedom.
 - ☐ 3. They are made to develop the scientific temper, humanism and the spirit of inquiry and reform.
 - ☒ 4. They are made justiciable in nature.

Question ID : 264330113382
Option 1 ID : 264330445614
Option 2 ID : 264330445615
Option 3 ID : 264330445616
Option 4 ID : 264330445613
Status : Not Attempted and Marked For Review
Chosen Option : --

Q.12 Who was the first chairman of Finance Commission of India?

- Ans ☒ 1. Ashok Kumar Chanda
- ☒ 2. KC Neogy
- ☒ 3. K Santhanam
- ☒ 4. PV Rajamannar

Question ID : 264330133074
Option 1 ID : 264330521349
Option 2 ID : 264330521347
Option 3 ID : 264330521348
Option 4 ID : 264330521350
Status : Not Answered
Chosen Option : --

Q.13 The First Commonwealth Games were organised in which of the following years?

- Ans ☒ 1. 1920
- ☒ 2. 1930
- ☒ 3. 1922
- ☒ 4. 1926

Question ID : 264330118888
Option 1 ID : 264330466207
Option 2 ID : 264330466210
Option 3 ID : 264330466208
Option 4 ID : 264330466209
Status : Answered
Chosen Option : 1

Q.14 Continental Shelf which is the shallowest part of the ocean has an average gradient of:

- Ans ☒ 1. 8° or even less
- ☒ 2. 1° or even less
- ☒ 3. 5° or even less
- ☒ 4. 2° or even less

Question ID : 26433055832
Option 1 ID : 264330218315
Option 2 ID : 264330218312
Option 3 ID : 264330218314
Option 4 ID : 264330218313
Status : Answered
Chosen Option : 3

Q.15 Dhruvasena II is related to which of the following ruling dynasties?

- Ans ☒ 1. Vakataka
- ☒ 2. Pushyabhuti
- ☒ 3. Maitraka
- ☒ 4. Maukhari

Question ID : 264330165568
Option 1 ID : 264330649354
Option 2 ID : 264330649353
Option 3 ID : 264330649351
Option 4 ID : 264330649352
Status : Answered
Chosen Option : 2

Q.16 Under which of the following Acts was the National Commission for Women established?

Ans ☒ 1. The National Commission for Women Act, 1989

☒ 2. The National Commission for Women Act, 1987

☒ 3. The National Commission for Women Act, 1990

☒ 4. The National Commission for Women Act, 1988

Question ID : **264330145264**

Option 1 ID : **264330569313**

Option 2 ID : **264330569311**

Option 3 ID : **264330569314**

Option 4 ID : **264330569312**

Status : **Answered**

Chosen Option : **4**

Q.17 Identify the position of stomata in plants.

Ans ☒ 1. Tip of stem

☒ 2. Inside the roots

☒ 3. Inside the flower

☒ 4. Surface of leaves

Question ID : **26433064754**

Option 1 ID : **264330253610**

Option 2 ID : **264330253608**

Option 3 ID : **264330253611**

Option 4 ID : **264330253609**

Status : **Answered**

Chosen Option : **1**

Q.18 Who among the following has given extraordinary powers during an emergency?

Ans ☒ 1. Prime Minister

☒ 2. The Chief Justice

☒ 3. The President

☒ 4. The Governor

Question ID : **264330118528**

Option 1 ID : **264330465513**

Option 2 ID : **264330465515**

Option 3 ID : **264330465514**

Option 4 ID : **264330465516**

Status : **Answered**

Chosen Option : **3**

Q.19 In India all loans that are below _____ are considered as micro loans.

Ans ☒ 1. one lakh rupees

☒ 2. two lakh rupees

☒ 3. four lakh rupees

☒ 4. three lakh rupees

Question ID : **264330145237**

Option 1 ID : **264330569203**

Option 2 ID : **264330569204**

Option 3 ID : **264330569206**

Option 4 ID : **264330569205**

Status : **Answered**

Chosen Option : **2**

Q.20 Identify whether the given statements about p-block elements are correct or incorrect.
Statement A: In p-block elements, the last electron enters the outermost p orbital.
Statement B: The non-metals and metalloids exist only in the p-block of the periodic table.

- Ans** ☒ 1. Both Statements A and B are correct
 ☐ 2. Only Statement A is correct
 ☐ 3. Both Statements A and B are incorrect
 ☐ 4. Only Statement B is correct

Question ID : 264330137995
Option 1 ID : 264330540590
Option 2 ID : 264330540587
Option 3 ID : 264330540588
Option 4 ID : 264330540589
Status : Answered
Chosen Option : 1

Q.21 Vallabhbhai Patel and _____ helped Gandhi in Kheda by organising his tour of the villages and urging the peasants to stand firm against the government.

- Ans** ☐ 1. Jamunalal Bajaj
 ☐ 2. Mohammad Ali Jinnah
 ☐ 3. Motilal Nehru
 ☒ 4. Indulal Yajnik

Question ID : 264330165396
Option 1 ID : 264330648666
Option 2 ID : 264330648664
Option 3 ID : 264330648663
Option 4 ID : 264330648665
Status : Answered
Chosen Option : 3

Q.22 The deliberations of the representatives at the Third Round Table Conference was held during the later months of which year?

- Ans** ☒ 1. 1932
 ☐ 2. 1929
 ☐ 3. 1930
 ☐ 4. 1931

Question ID : 264330112181
Option 1 ID : 264330440811
Option 2 ID : 264330440810
Option 3 ID : 264330440809
Option 4 ID : 264330440812
Status : Answered
Chosen Option : 4

Q.23 Which part of the Indian Constitution deals with fundamental rights?

- Ans ☒ 1. Part III
- ☐ 2. Part II
- ☐ 3. Part V
- ☐ 4. Part IV

Question ID : 264330111518
Option 1 ID : 264330438158
Option 2 ID : 264330438157
Option 3 ID : 264330438160
Option 4 ID : 264330438159
Status : Answered
Chosen Option : 1

Q.24 At normal temperature and atmospheric pressure, _____ has a density of 1.87 kg/m³, which is 1.5 times heavier than air and exists as a liquid below the critical temperature of 31°C.

- Ans ☒ 1. carbon dioxide
- ☐ 2. nitrogen
- ☐ 3. hydrogen
- ☐ 4. lithium

Question ID : 264330110060
Option 1 ID : 264330432517
Option 2 ID : 264330432518
Option 3 ID : 264330432519
Option 4 ID : 264330432520
Status : Not Attempted and Marked For Review
Chosen Option : --

Q.25 Sao Joao festival is celebrated primarily by the Catholic Christians in which of the following Indian states?

- Ans ☐ 1. Assam
- ☒ 2. Goa
- ☐ 3. Manipur
- ☐ 4. Nagaland

Question ID : 26433064692
Option 1 ID : 264330253361
Option 2 ID : 264330253360
Option 3 ID : 264330253362
Option 4 ID : 264330253363
Status : Not Answered
Chosen Option : --

Q.26 According to the Global Hunger Index 2022, which neighbouring country is only behind India with a rank of 109 out of 121 countries?

- Ans
- ☒ 1. Bangladesh
 - ☒ 2. Afghanistan
 - ☒ 3. Nepal
 - ☒ 4. Pakistan

Question ID : 264330157103
Option 1 ID : 264330615783
Option 2 ID : 264330615786
Option 3 ID : 264330615784
Option 4 ID : 264330615785
Status : Answered
Chosen Option : 4

Q.27 Which of the following was established by Jyotirao Govindrao Phule in 1873 to fight against idolatry and caste system?

- Ans
- ☒ 1. Shree Narayan Guru Dharma Paripalana (SNDP) Movement
 - ☒ 2. Satyashodhak Samaj
 - ☒ 3. Young Bengal Movement
 - ☒ 4. Arya Samaj

Question ID : 26433099177
Option 1 ID : 264330389321
Option 2 ID : 264330389324
Option 3 ID : 264330389322
Option 4 ID : 264330389323
Status : Answered
Chosen Option : 1

Q.28 Who is the first Indian to participate in a Super Heavyweight Boxing event in the 2020 Olympic Games?

- Ans
- ☒ 1. Satish Kumar
 - ☒ 2. Manish Harshit
 - ☒ 3. Sakshi Chaudhary
 - ☒ 4. Amit Panghal

Question ID : 26433096226
Option 1 ID : 264330377658
Option 2 ID : 264330377659
Option 3 ID : 264330377660
Option 4 ID : 264330377657
Status : Answered
Chosen Option : 3

Q.29 Prithviraj Raso, an epic poem about the life of the 12th century Indian king, Prithviraj Chauhan, was written by:

- Ans
- ☒ 1. Banabhatta
 - ☒ 2. Ashvaghosa
 - ☒ 3. Bharavi
 - ☒ 4. Chand Bardai

Question ID : 26433071390
Option 1 ID : 264330279986
Option 2 ID : 264330279984
Option 3 ID : 264330279985
Option 4 ID : 264330279987
Status : Answered
Chosen Option : 4

Q.30 Which is the most widely accepted model to explain the formation and evaluation of the solar system?

- Ans
- ☒ 1. Nebular hypothesis
 - ☒ 2. Gas hypothesis
 - ☒ 3. Solar hypothesis
 - ☒ 4. Cloud hypothesis

Question ID : 264330113348
Option 1 ID : 264330445478
Option 2 ID : 264330445480
Option 3 ID : 264330445479
Option 4 ID : 264330445477
Status : Answered
Chosen Option : 1

Q.31 How many controls are there globally that influence the climate of a particular zone?

- Ans
- ☒ 1. 8
 - ☒ 2. 6
 - ☒ 3. 3
 - ☒ 4. 5

Question ID : 264330163229
Option 1 ID : 264330640230
Option 2 ID : 264330640229
Option 3 ID : 264330640227
Option 4 ID : 264330640228
Status : Not Answered
Chosen Option : --

Q.32 Moatsu festival of Nagaland is celebrated by which of the following tribes?

- Ans
- ☒ 1. Bhil tribe
 - ☒ 2. Ao tribe
 - ☒ 3. Munda tribe
 - ☒ 4. Bodo tribe

Question ID : 264330164802
Option 1 ID : 264330646337
Option 2 ID : 264330646335
Option 3 ID : 264330646338
Option 4 ID : 264330646336
Status : Answered
Chosen Option : 1

Q.33 Which of the following is considered as a good indicator of economic growth?

- Ans
- ☒ 1. Steady increase in loan
 - ☒ 2. Steady increase in international trade
 - ☒ 3. Steady increase in population
 - ☒ 4. Steady increase in the GDP

Question ID : 26433054585
Option 1 ID : 264330213326
Option 2 ID : 264330213327
Option 3 ID : 264330213324
Option 4 ID : 264330213325
Status : Answered
Chosen Option : 4

Q.34 What is the full form of PPLO with respect to bacteria?

- Ans
- ☒ 1. Pleuro Pneumonia Like Organisms
 - ☒ 2. Pleuro Platelet Like Organisms
 - ☒ 3. Platelet Prone Like Organisms
 - ☒ 4. Pneumonia Platelet Like Organisms

Question ID : 264330145218
Option 1 ID : 264330569127
Option 2 ID : 264330569129
Option 3 ID : 264330569128
Option 4 ID : 264330569130
Status : Answered
Chosen Option : 2

Q.35 Which of the following algae is also called kelp and found in the deep sea?

- Ans
- ☒ 1. Chlamydomona
 - ☒ 2. Fucus
 - ☒ 3. Laminaria
 - ☒ 4. Nostoc

Question ID : 26433089669
Option 1 ID : 264330352180
Option 2 ID : 264330352177
Option 3 ID : 264330352178
Option 4 ID : 264330352179
Status : Answered
Chosen Option : 3

Q.36 Atal Tunnel connects which two places?

- Ans
- ☒ 1. Manali and Lahaul-Spiti valley
 - ☒ 2. Shimla and Nainital
 - ☒ 3. Shimla and Mansoori
 - ☒ 4. Manali and Nainital

Question ID : 264330112690
Option 1 ID : 264330442845
Option 2 ID : 264330442848
Option 3 ID : 264330442847
Option 4 ID : 264330442846
Status : Answered
Chosen Option : 1

Q.37 Priorities of the government in the fiscal area and its related policies and deviations are mentioned in which part of the budget document?

- Ans**
- ☒ 1. Fiscal Policy Strategy Statement
 - ☐ 2. Appropriation Bill
 - ☐ 3. Macroeconomic Framework Statement
 - ☐ 4. Medium-term Fiscal Policy Statement

Question ID : 264330141437
Option 1 ID : 264330554084
Option 2 ID : 264330554086
Option 3 ID : 264330554085
Option 4 ID : 264330554083
Status : **Answered**
Chosen Option : 4

Q.38 The structure that produces and holds sperm cells in bryophytes (non-vascular plants) and ferns is called:

- Ans**
- ☐ 1. megasporangia
 - ☐ 2. archegonium
 - ☒ 3. antheridium
 - ☐ 4. protonema

Question ID : 264330145205
Option 1 ID : 264330569075
Option 2 ID : 264330569076
Option 3 ID : 264330569077
Option 4 ID : 264330569078
Status : **Answered**
Chosen Option : 2

Q.39 Shore temple of Mamallapuram was built by:

- Ans**
- ☒ 1. Pallavas
 - ☐ 2. Chalukayas
 - ☐ 3. Nagas
 - ☐ 4. Cholas

Question ID : 264330164857
Option 1 ID : 264330646557
Option 2 ID : 264330646558
Option 3 ID : 264330646555
Option 4 ID : 264330646556
Status : **Answered**
Chosen Option : 1

Q.40 Dr. Teejan Bai, a Padma Shri, Padma Bhushan and Padma Vibhushan awardee is globally recognised for her contribution to which of the following art forms?

- Ans**
- ☐ 1. Gendi
 - ☒ 2. Pandavani
 - ☐ 3. Raut Nacha.
 - ☐ 4. Jhirliti

Question ID : 264330145167
Option 1 ID : 264330568925
Option 2 ID : 264330568924
Option 3 ID : 264330568926
Option 4 ID : 264330568923
Status : **Answered**
Chosen Option : 2

Q.41 In how many phases did the Indian Economy experience the success of the Green Revolution?

- Ans ☒ 1. Two
☒ 2. Three
☒ 3. Five
☒ 4. Four

Question ID : 264330145245
Option 1 ID : 264330569235
Option 2 ID : 264330569236
Option 3 ID : 264330569238
Option 4 ID : 264330569237
Status : Answered
Chosen Option : 4

Q.42 Which of the following statement is correct regarding climate of Indian subcontinent?
A. The climate of North India remains similar throughout the year
B. The Himalayas protect the subcontinent from extremely cold winds from central Asia.

- Ans ☒ 1. Only Statement B is correct
☒ 2. Both Statements A and B incorrect
☒ 3. Only Statement A is correct
☒ 4. Both Statements A and B correct

Question ID : 264330121168
Option 1 ID : 264330474878
Option 2 ID : 264330474877
Option 3 ID : 264330474875
Option 4 ID : 264330474876
Status : Not Answered
Chosen Option : --

Q.43 In a volleyball game, each team comprise of how many players?

- Ans ☒ 1. 5
☒ 2. 6
☒ 3. 8
☒ 4. 7

Question ID : 264330109851
Option 1 ID : 264330431681
Option 2 ID : 264330431682
Option 3 ID : 264330431684
Option 4 ID : 264330431683
Status : Answered
Chosen Option : 2

Q.44 What is Kalbaisakhi?

- Ans ☒ 1. Pre monsoon showers and thunderstorms
- ☒ 2. Cold waves and rains
- ☒ 3. Snowfall and hail
- ☒ 4. Heatwaves and loo

Question ID : 264330119786
Option 1 ID : 264330469420
Option 2 ID : 264330469419
Option 3 ID : 264330469421
Option 4 ID : 264330469422
Status : Not Answered
Chosen Option : --

Q.45 Which of the following books is an autobiography of the former American president Bill Clinton?

- Ans ☒ 1. Becoming
- ☒ 2. My Life
- ☒ 3. Long Walk to Freedom
- ☒ 4. My Country My Life

Question ID : 264330145176
Option 1 ID : 264330568959
Option 2 ID : 264330568960
Option 3 ID : 264330568961
Option 4 ID : 264330568962
Status : Answered
Chosen Option : 1

Q.46 Tansen, the famous musician, often sang in the court of which ruler?

- Ans ☒ 1. Sher Shah Suri
- ☒ 2. Akbar
- ☒ 3. Feroz Shah Tughlaq
- ☒ 4. Allaudin Khilji

Question ID : 26433074852
Option 1 ID : 264330293499
Option 2 ID : 264330293497
Option 3 ID : 264330293498
Option 4 ID : 264330293496
Status : Answered
Chosen Option : 2

Q.47 Who among the following founded the Kalakshetra Foundation in Chennai that is an important centre for the study and performance of fine arts?

- Ans ☒ 1. Rukmini Devi Arundale
- ☒ 2. Yamini Krishnamurthy
- ☒ 3. Mrinalini Sarabhai
- ☒ 4. Alarmel Valli

Question ID : 26433054507
Option 1 ID : 264330213015
Option 2 ID : 264330213013
Option 3 ID : 264330213014
Option 4 ID : 264330213012
Status : Answered
Chosen Option : 1

Q.48 Which German chemist was the first to show a graphical representation of the periodicity of an atomic volume plotted against atomic weight?

- Ans** ☒ 1. Lothar Meyer
 ☐ 2. John Newlands
 ☐ 3. William Ramsay
 ☐ 4. Glenn T Seaborg

Question ID : **264330110063**
Option 1 ID : **264330432532**
Option 2 ID : **264330432530**
Option 3 ID : **264330432531**
Option 4 ID : **264330432529**
Status : **Answered**
Chosen Option : **2**

Q.49 Which of the following is NOT an Equestrian discipline?

- Ans** ☐ 1. Dressage
 ☒ 2. Sprint
 ☐ 3. Show jumping
 ☐ 4. Vaulting

Question ID : **26433089944**
Option 1 ID : **264330353253**
Option 2 ID : **264330353256**
Option 3 ID : **264330353255**
Option 4 ID : **264330353254**
Status : **Answered**
Chosen Option : **1**

Q.50 The Guru Kelucharan Mohapatra Yuva Pratibha Samman 2021 was presented to Arushi Mudgal for _____ dance.

- Ans** ☐ 1. Mohiniyattam
 ☒ 2. Odissi
 ☐ 3. Kuchipudi
 ☐ 4. Kathak

Question ID : **26433054500**
Option 1 ID : **264330212985**
Option 2 ID : **264330212986**
Option 3 ID : **264330212984**
Option 4 ID : **264330212987**
Status : **Answered**
Chosen Option : **2**

Q.1 The radii of two cylinders are in the ratio of 4 : 5 and their heights are in the ratio of 5 : 2. The ratio of their volume is:

- Ans
- ☐ 1. 9 : 4
 - ☐ 2. 2 : 1
 - ☐ 3. 9 : 7
 - ☒ 4. 8 : 5

Question ID : 264330145138
Option 1 ID : 264330568807
Option 2 ID : 264330568809
Option 3 ID : 264330568810
Option 4 ID : 264330568808
Status : Answered
Chosen Option : 2

Q.2 A person crosses a 900-metre long street in 6 minutes. The speed of the person, in km/h, is:

- Ans
- ☐ 1. 10
 - ☒ 2. 9
 - ☐ 3. 5
 - ☐ 4. 8

Question ID : 264330103677
Option 1 ID : 264330407016
Option 2 ID : 264330407013
Option 3 ID : 264330407015
Option 4 ID : 264330407014
Status : Answered
Chosen Option : 2

Q.3 If 3 goats or 5 sheep can graze a field in 54 days, then in how many days can 6 goats and 8 sheep graze the same field?

- Ans
- ☒ 1. 15
 - ☐ 2. 12
 - ☐ 3. 10
 - ☐ 4. 8

Question ID : 264330102379
Option 1 ID : 264330401984
Option 2 ID : 264330401983
Option 3 ID : 264330401982
Option 4 ID : 264330401981
Status : Not Attempted and Marked For Review
Chosen Option : --

Q.4 An item with a marked price of ₹3,800 was sold for ₹3,496, after a discount of y% was offered. What was the value of y?

- Ans
- ☒ 1. 7.5%
 - ☒ 2. 8.5%
 - ☒ 3. 8%
 - ☒ 4. 7%

Question ID : 264330131158
Option 1 ID : 264330513744
Option 2 ID : 264330513746
Option 3 ID : 264330513745
Option 4 ID : 264330513743
Status : Marked For Review
Chosen Option : 2

Q.5 A dishonest dealer announces selling his articles with 22% loss, but uses 35% lighter weights. What is the percentage of his profit or loss?

- Ans
- ☒ 1. 20% loss
 - ☒ 2. 13% profit
 - ☒ 3. 13% loss
 - ☒ 4. 20% profit

Question ID : 264330131522
Option 1 ID : 264330515192
Option 2 ID : 264330515191
Option 3 ID : 264330515194
Option 4 ID : 264330515193
Status : Answered
Chosen Option : 2

Q.6 The following table represents the population of four different areas and the percentage of males, females, and children among them.

Area	Population	Males	Females	Children
P	10,000	40%	40%	20%
Q	20,000	30%	40%	30%
R	16,000	50%	30%	20%
S	18,000	45%	35%	20%

What is the total number of children in areas P and Q together?

- Ans
- ☒ 1. 7000
 - ☒ 2. 9000
 - ☒ 3. 6000
 - ☒ 4. 8000

Question ID : 264330167249
Option 1 ID : 264330655992
Option 2 ID : 264330655994
Option 3 ID : 264330655991
Option 4 ID : 264330655993
Status : Answered
Chosen Option : 4

Q.7 If θ is an acute angle and $\sin \theta + \operatorname{cosec} \theta = 2$, then the value of $\sin^5 \theta + \operatorname{cosec}^5 \theta$ is:

Ans ☒ 1. 10

☒ 2. 2

☒ 3. 4

☒ 4. 5

Question ID : 264330145132

Option 1 ID : 264330568786

Option 2 ID : 264330568783

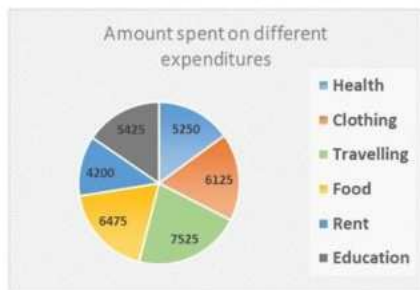
Option 3 ID : 264330568784

Option 4 ID : 264330568785

Status : Answered

Chosen Option : 2

Q.8 What is the central angle corresponding to the expenditure spent on Education in the given figure?



Ans ☒ 1. 55.8°

☒ 2. 55.2°

☒ 3. 52°

☒ 4. 42°

Question ID : 26433081650

Option 1 ID : 264330320435

Option 2 ID : 264330320434

Option 3 ID : 264330320433

Option 4 ID : 264330320436

Status : Not Attempted and Marked For Review

Chosen Option : --

Q.9 Evaluate $\frac{0.04}{0.05}$ of $\frac{(3\frac{1}{3} - 2\frac{1}{2}) \div \frac{1}{2} \text{ of } 1\frac{1}{4}}{\frac{1}{3} + \frac{1}{5} \text{ of } \frac{1}{9}}$

Ans ☒ 1. 0.3

☒ 2. 5

☒ 3. 3

☒ 4. 0.03

Question ID : 26433063988

Option 1 ID : 264330250544

Option 2 ID : 264330250547

Option 3 ID : 264330250545

Option 4 ID : 264330250546

Status : Not Attempted and Marked For Review

Chosen Option : --

Q.10

If $\tan A = \frac{4}{3}$, $0 \leq A \leq 90^\circ$, then find the value of $\sin A$.

Ans

☐ 1. $\frac{3}{5}$

☐ 2. 1

☐ 3. $\frac{3}{4}$

☒ 4. $\frac{4}{5}$

Question ID : 264330157755

Option 1 ID : 264330618380

Option 2 ID : 264330618382

Option 3 ID : 264330618381

Option 4 ID : 264330618379

Status : Answered

Chosen Option : 4

Q.11 Find the LCM of 15, 24, 35 and 54.

Ans ☐ 1. 5670

☒ 2. 7560

☐ 3. 7650

☐ 4. 6570

Question ID : 26433073065

Option 1 ID : 264330286454

Option 2 ID : 264330286453

Option 3 ID : 264330286452

Option 4 ID : 264330286455

Status : Answered

Chosen Option : 2

Q.12 Study the given data and answer the question that follows.

The data shows the number of candidates (in thousand) appearing for Civil Service (CS) and Engineering Service (ES) Examinations in the years 2020, 2021, 2022 in USA.

Year	Civil Service		Engineering Service	
	Total No. of Candidates Appeared	Graduates out of the total candidates appeared (in %)	Total No. of Candidates Appeared	Graduates out of the total candidates appeared (in %)
2020	75	60	89	57
2021	110	64	118	65
2022	120	80	135	78

What is total number of graduates who appeared for both CS and ES together in the year 2022?

- Ans
- ☐ 1. 2,01,000
 - ☐ 2. 2,01,100
 - ☒ 3. 2,01,300
 - ☐ 4. 2,01,200

Question ID : 264330158260
Option 1 ID : 264330620399
Option 2 ID : 264330620400
Option 3 ID : 264330620402
Option 4 ID : 264330620401
Status : Not Answered
Chosen Option : --

Q.13 Let the speed of the boat in still water be 17 km/h and let the speed of the stream be 5 km/h. What is the time taken by the boat to go 110 km downstream?

- Ans
- ☐ 1. 4.5 hours
 - ☐ 2. 6 hours
 - ☐ 3. 5.5 hours
 - ☒ 4. 5 hours

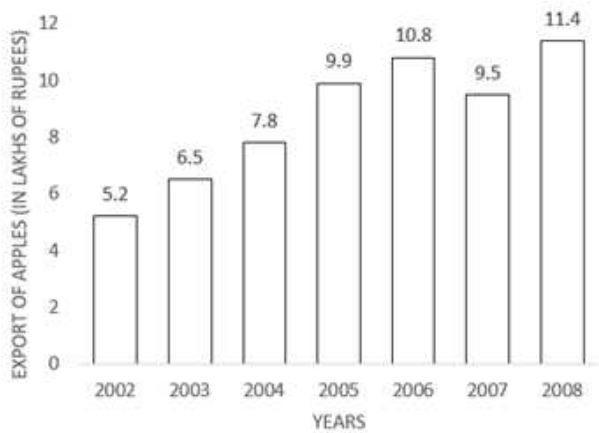
Question ID : 264330145028
Option 1 ID : 264330568367
Option 2 ID : 264330568368
Option 3 ID : 264330568370
Option 4 ID : 264330568369
Status : Answered
Chosen Option : 4

Q.14 A number is first increased by 10% and then increased by 20%. The number, so obtained, is now decreased by 12%. What is the net increase or decrease per cent in the original number?

- Ans
- ☒ 1. 16.16% increase
 - ☐ 2. 14.14% decrease
 - ☐ 3. 11.11% decrease
 - ☐ 4. 12.12% increase

Question ID : 264330158379
Option 1 ID : 264330620878
Option 2 ID : 264330620877
Option 3 ID : 264330620876
Option 4 ID : 264330620875
Status : Not Attempted and Marked For Review
Chosen Option : --

Q.15 Study the given graph carefully and answer the question that follows.



In which year was there maximum percentage increase in the export of apples to that of the previous years?

- Ans
- ☒ 1. 2003
 - ☒ 2. 2005
 - ☒ 3. 2006
 - ☒ 4. 2008

Question ID : 264330165428

Option 1 ID : 264330648791

Option 2 ID : 264330648794

Option 3 ID : 264330648793

Option 4 ID : 264330648792

Status : Not Attempted and Marked For Review

Chosen Option : --

Q.16 The following data gives a year-wise outlay (in lakhs of rupees) in a certain 4-year plan (2018-2022) of a state.

Year	Health	Housing	Transport	Education
2018-2019	6200	6500	7100	8000
2019-2020	7000	6600	7200	8100
2020-2021	7300	6800	7400	8200
2021-2022	7400	7000	7500	8400

What was the percentage increase during 2020-2021 over 2018-2019 in Education outlay?

- Ans
- ☒ 1. 2.8%
 - ☒ 2. 3.2%
 - ☒ 3. 2.0%
 - ☒ 4. 2.5%

Question ID : 264330167248

Option 1 ID : 264330655989

Option 2 ID : 264330655990

Option 3 ID : 264330655987

Option 4 ID : 264330655988

Status : Answered

Chosen Option : 4

Q.17 The first shirt is sold at twice the selling price of the second shirt. The first shirt is sold at 8% profit and the second shirt is sold at a 3% loss. What is the overall percentage profit on the shirts (Rounded off to two decimal place)?

- Ans
- ☒ 1. 4.86%
 - ☒ 2. 4.07%
 - ☒ 3. 4.60%
 - ☒ 4. 3.86%

Question ID : 264330102065
Option 1 ID : 264330400768
Option 2 ID : 264330400767
Option 3 ID : 264330400766
Option 4 ID : 264330400765
Status : Not Attempted and Marked For Review
Chosen Option : --

Q.18 The areas of the two triangles are in the ratio 4 : 3 and their heights are in the ratio 6 : 5. Find the ratio of their bases.

- Ans
- ☒ 1. 5 : 6
 - ☒ 2. 10 : 9
 - ☒ 3. 6 : 5
 - ☒ 4. 9 : 10

Question ID : 264330157742
Option 1 ID : 264330618330
Option 2 ID : 264330618327
Option 3 ID : 264330618329
Option 4 ID : 264330618328
Status : Not Attempted and Marked For Review
Chosen Option : --

Q.19 The largest number of four digits that is exactly divisible by 17 and 36 is:

- Ans
- ☒ 1. 7956
 - ☒ 2. 9180
 - ☒ 3. 9792
 - ☒ 4. 8568

Question ID : 26433091502
Option 1 ID : 264330359376
Option 2 ID : 264330359374
Option 3 ID : 264330359375
Option 4 ID : 264330359373
Status : Answered
Chosen Option : 3

Q.20 PQR is an equilateral triangle inscribed in a circle. S is any point on the arc QR. Measure of $\frac{1}{2}\angle PSQ$ is:

- Ans**
- ☐ 1. 20°
 - ☐ 2. 15°
 - ☒ 3. 30°
 - ☐ 4. 60°

Question ID : 264330165662

Option 1 ID : 264330649729

Option 2 ID : 264330649730

Option 3 ID : 264330649727

Option 4 ID : 264330649728

Status : Not Answered

Chosen Option : --

Q.21 If $\frac{x}{y} + \frac{y}{x} = 1$ and $x + y = 2$, then the value of $x^3 + y^3$ is:

- Ans**
- ☐ 1. 1
 - ☐ 2. 3
 - ☒ 3. 0
 - ☐ 4. 2

Question ID : 264330157775

Option 1 ID : 264330618460

Option 2 ID : 264330618462

Option 3 ID : 264330618459

Option 4 ID : 264330618461

Status : Not Answered

Chosen Option : --

Q.22 If the height of a cone is 7 cm and the diameter of the circular base is 12 cm, then its volume is (nearest to integer):

- Ans**
- ☐ 1. 254 cm^3
 - ☐ 2. 284 cm^3
 - ☒ 3. 264 cm^3
 - ☐ 4. 274 cm^3

Question ID : 264330103751

Option 1 ID : 264330407309

Option 2 ID : 264330407312

Option 3 ID : 264330407310

Option 4 ID : 264330407311

Status : Not Answered

Chosen Option : --

Q.23 A, B and C can do a piece of work in 20 days, 30 days and 60 days respectively. If A works daily and on every third day B and C also work with A, then in how many days, will the work be completed?

- Ans
1. 21
2. 18
3. 12
4. 15

Question ID : 26433082412

Option 1 ID : 264330323484

Option 2 ID : 264330323483

Option 3 ID : 264330323481

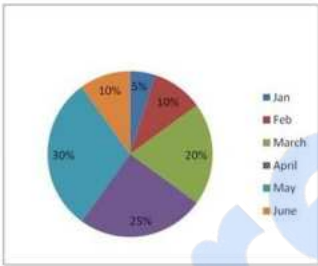
Option 4 ID : 264330323482

Status : Answered

Chosen Option : 4

Q.24 Darjeeling gets tourists from two countries A and B. Percentage wise distribution of the influx of tourists is given below for the first six months of the year.

Total number of tourists = 60000	
Month	Ratio(A : B)
Jan	5:7
Feb	6:7
Mar	3:2
April	8:7
May	4:5
June	3:4



Find the ratio of tourists from country A coming in during March and April.

- Ans
1. 4:7
2. 3:7
3. 7:10
4. 9:10

Question ID : 264330158398

Option 1 ID : 264330620954

Option 2 ID : 264330620953

Option 3 ID : 264330620952

Option 4 ID : 264330620951

Status : Not Answered

Chosen Option : --

Q.25 The value of $11 \times 11 + 11 \div 11 - 11 \times 11 + 11 + 11 \times 11 - 11 - 11 \times 11$ is:

- Ans
1. 1
2. 11
3. 121
4. 0

Question ID : 26433072965

Option 1 ID : 264330286053

Option 2 ID : 264330286054

Option 3 ID : 264330286055

Option 4 ID : 264330286052

Status : Answered

Chosen Option : 1

Q.26 A man spends 72% of his salary and saves ₹5,740 per month. What is 10% of his annual salary (in ₹)?

- Ans
- ☒ 1. ₹21600
 - ☒ 2. ₹24600
 - ☒ 3. ₹20500
 - ☒ 4. ₹28400

Question ID : 264330145060
Option 1 ID : 264330568496
Option 2 ID : 264330568498
Option 3 ID : 264330568495
Option 4 ID : 264330568497
Status : Not Answered
Chosen Option : --

Q.27 The population of a city is 3,52,314. It increases annually at the rate of 15% per annum. What was its population 2 years ago?

- Ans
- ☒ 1. 3,02,400
 - ☒ 2. 3,06,360
 - ☒ 3. 2,66,400
 - ☒ 4. 2,56,400

Question ID : 264330103387
Option 1 ID : 264330405856
Option 2 ID : 264330405854
Option 3 ID : 264330405855
Option 4 ID : 264330405853
Status : Not Answered
Chosen Option : --

Q.28 A tourist van travels the distance of 35 km from Dehradun to Mussoorie at an average speed of 36 km/h and returns at 60 km/h. What is the approximate average speed (in km/h) of the tourist van for the entire journey?

- Ans
- ☒ 1. 48
 - ☒ 2. 42
 - ☒ 3. 45
 - ☒ 4. 50

Question ID : 264330108981
Option 1 ID : 264330428201
Option 2 ID : 264330428204
Option 3 ID : 264330428202
Option 4 ID : 264330428203
Status : Answered
Chosen Option : 2

Q.29 The HCF and the LCM of two numbers are 5 and 175, respectively. If the ratio of the two numbers is 5:7, the larger of the two numbers is _____.

- Ans ☒ 1. 35
☐ 2. 25
☐ 3. 45
☐ 4. 75

Question ID : 264330102313
Option 1 ID : 264330401718
Option 2 ID : 264330401717
Option 3 ID : 264330401719
Option 4 ID : 264330401720
Status : Answered
Chosen Option : 3

Q.30 The product of two numbers is 726 and their HCF is 11, then their LCM is:

- Ans ☐ 1. 58
☐ 2. 68
☒ 3. 66
☐ 4. 76

Question ID : 264330145032
Option 1 ID : 264330568385
Option 2 ID : 264330568386
Option 3 ID : 264330568384
Option 4 ID : 264330568383
Status : Not Answered
Chosen Option : --

Q.31 If a truck moves at a constant speed of 30 km/h for 1 kilometre and 45 km/h for the next 1 kilometre. What is the average speed of the truck?

- Ans ☐ 1. 32 km/h
☒ 2. 36 km/h
☐ 3. 38 km/h
☐ 4. 34 km/h

Question ID : 264330104412
Option 1 ID : 264330409949
Option 2 ID : 264330409951
Option 3 ID : 264330409952
Option 4 ID : 264330409950
Status : Answered
Chosen Option : 1

Q.32 P, Q and R, when working individually, can complete a job in, respectively, 36 days, 48 days and 144 days. P, Q and R start working together. P leaves the job 12 days before completion and Q leaves the job 8 days before completion. R works from the beginning till the end of the job. Determine the total number of days taken to complete the job.

- Ans ☒ 1. 24
☒ 2. 27
☒ 3. 30
☒ 4. 25

Question ID : 264330114534
Option 1 ID : 264330450221
Option 2 ID : 264330450223
Option 3 ID : 264330450224
Option 4 ID : 264330450222

Status : Answered

Chosen Option : 4

Q.33 If $a + b = 10$ and $ab = 6$, then the value of $a^3 + b^3$ is:

- Ans ☒ 1. 800
☒ 2. 820
☒ 3. 860
☒ 4. 840

Question ID : 264330157766
Option 1 ID : 264330618426
Option 2 ID : 264330618425
Option 3 ID : 264330618423
Option 4 ID : 264330618424

Status : Answered

Chosen Option : 1

Q.34 If $\cos \theta - \sin \theta = \sqrt{2} \sin \theta$, then $(\cos \theta + \sin \theta)$ is:

- Ans ☒ 1. $-\sqrt{2} \cos \theta$
☒ 2. $\sqrt{2} \cos \theta$
☒ 3. $\sqrt{2} \tan \theta$
☒ 4. $-\sqrt{2} \sin \theta$

Question ID : 264330158303
Option 1 ID : 264330620572
Option 2 ID : 264330620571
Option 3 ID : 264330620574
Option 4 ID : 264330620573

Status : Answered

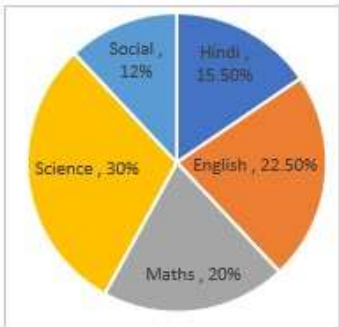
Chosen Option : 2

Q.35 The sides of a triangle are in the ratio 5 : 12 : 13 and its perimeter is 90 cm. Find its area (in cm²).

- Ans ☒ 1. 150
☒ 2. 270
☒ 3. 30
☒ 4. 60

Question ID : 264330145113
Option 1 ID : 264330568707
Option 2 ID : 264330568709
Option 3 ID : 264330568708
Option 4 ID : 264330568710
Status : Not Answered
Chosen Option : --

Q.36 The given pie-chart shows the distribution of the marks scored by Ram in five different subjects (in percentage).



What is the ratio of the central angle of Maths to the central angle of Science?

- Ans ☒ 1. 5 : 2
☒ 2. 2 : 3
☒ 3. 4 : 3
☒ 4. 3 : 5

Question ID : 264330158623
Option 1 ID : 264330621854
Option 2 ID : 264330621853
Option 3 ID : 264330621851
Option 4 ID : 264330621852
Status : Answered
Chosen Option : 3

Q.37 Study the given data and answer the question that follows.

The tables shows the number of candidates (in lakh) appearing in an entrance exam from four different cities and the ratio of candidates passing and failing in the same.

City	A	B	C	D
Number of candidates	2.15	1.14	1.56	2.35

Ratio of candidates passing and failing within the city.

City	Passing	Failing
A	4	2
B	5	3
C	6	4
D	4	6

What is the number of failed candidates (in lakh) in city D?

- Ans
- ☒ 1. 1.70
 - ☒ 2. 1.25
 - ☒ 3. 1.85
 - ☒ 4. 1.41

Question ID : 264330158258
Option 1 ID : 264330620392
Option 2 ID : 264330620394
Option 3 ID : 264330620391
Option 4 ID : 264330620393
Status : Answered
Chosen Option : 1

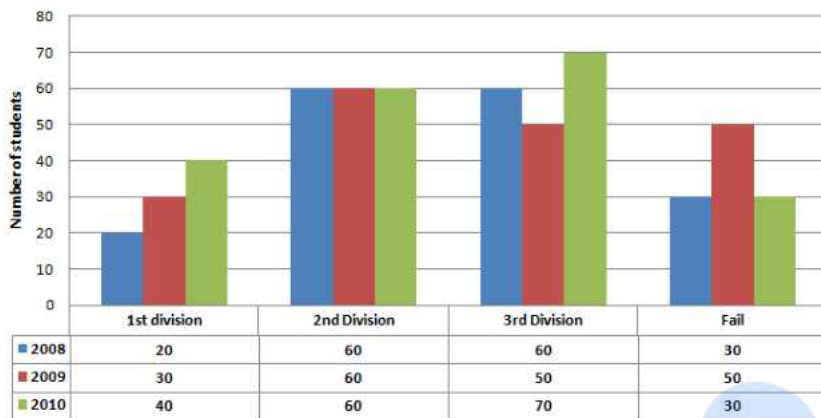
Q.38 Two circles of radius 13 cm and 15 cm intersect each other at points A and B. If the length of the common chord is 12 cm, then what is the distance between their centres?

- Ans
- ☒ 1. $\sqrt{145} + \sqrt{184}$
 - ☒ 2. $\sqrt{131} + \sqrt{181}$
 - ☒ 3. $\sqrt{145} + \sqrt{169}$
 - ☒ 4. $\sqrt{133} + \sqrt{189}$

Question ID : 264330168751
Option 1 ID : 264330661818
Option 2 ID : 264330661816
Option 3 ID : 264330661815
Option 4 ID : 264330661817
Status : Answered
Chosen Option : 4

Q.39 Study the given bar-graph and answer the question that follows.

The bar-graph shows the higher secondary students of a school for the years 2008, 2009 and 2010.



The percentage of students who passed in the second division in the year 2010 was:

- Ans
- ☒ 1. 25%
 - ☒ 2. 28%
 - ☒ 3. 30%
 - ☒ 4. 32%

Question ID : 264330163475
Option 1 ID : 264330641159
Option 2 ID : 264330641160
Option 3 ID : 264330641161
Option 4 ID : 264330641162
Status : Answered
Chosen Option : 3

Q.40 Two numbers are in the ratio 5:3 and the difference between these two numbers is 34.
Find the smaller of the two numbers.

- Ans
- ☒ 1. 51
 - ☒ 2. 85
 - ☒ 3. 68
 - ☒ 4. 34

Question ID : 264330104188
Option 1 ID : 264330409053
Option 2 ID : 264330409054
Option 3 ID : 264330409056
Option 4 ID : 264330409055
Status : Answered
Chosen Option : 1

Q.41 The radii of the ends of a frustum of a solid right-circular cone 45 cm high are 28 cm and 7 cm. If this frustum is melted and reconstructed into a solid right circular cylinder whose radius of base and height are in the ratio 3 : 5, find the curved surface area (in cm^2) of this cylinder. [Use $\pi = \frac{22}{7}$.]

- Ans**
- ☐ 1. 4580
 - ☐ 2. 4610
 - ☐ 3. 4640
 - ☒ 4. 4620

Question ID : 264330122878

Option 1 ID : 264330481581

Option 2 ID : 264330481580

Option 3 ID : 264330481579

Option 4 ID : 264330481582

Status : Answered

Chosen Option : 3

Q.42 A man runs for 40 km. The time taken by him in the first 10 km is twice the time taken by him in the second 10 km. The time taken in the third 10 km is half of the time taken in the fourth 10 km, and the time taken in the fourth 10 km is equal to the time taken in the first 10 km. If his speed in the first 10 km is 40 km/h, then what is the average speed for 40 km?

- Ans**
- ☐ 1. 50 km/h
 - ☐ 2. $\frac{70}{3}$ km/h
 - ☒ 3. $\frac{160}{3}$ km/h
 - ☐ 4. 40 km/h

Question ID : 26433081725

Option 1 ID : 264330320733

Option 2 ID : 264330320734

Option 3 ID : 264330320736

Option 4 ID : 264330320735

Status : Answered

Chosen Option : 1

Q.43 Find the value of $(\tan^2 \theta + \tan^4 \theta)$.

- Ans**
- ☐ 1. $\cot^2 \theta - \tan^2 \theta$
 - ☒ 2. $\sec^4 \theta - \sec^2 \theta$
 - ☐ 3. $\sec^2 \theta - \sec^4 \theta$
 - ☐ 4. $\sec^4 \theta + \sec^2 \theta$

Question ID : 264330130397

Option 1 ID : 264330510702

Option 2 ID : 264330510701

Option 3 ID : 264330510699

Option 4 ID : 264330510700

Status : Answered

Chosen Option : 2

Q.44 If the hypotenuse of a right-angled triangle is 29 cm and the sum of the other two sides is 41 cm, then the difference between the other two sides is:

- Ans ☒ 1. 5 cm
☒ 2. 1 cm
☒ 3. 2 cm
☒ 4. 10 cm

Question ID : 264330165659
Option 1 ID : 264330649716
Option 2 ID : 264330649718
Option 3 ID : 264330649717
Option 4 ID : 264330649715
Status : Answered
Chosen Option : 1

Q.45 Two numbers are in the ratio 3 : 4. The product of their HCF and LCM is 2700. The sum of the numbers is:

- Ans ☒ 1. 60
☒ 2. 105
☒ 3. 15
☒ 4. 45

Question ID : 26433063995
Option 1 ID : 264330250575
Option 2 ID : 264330250572
Option 3 ID : 264330250573
Option 4 ID : 264330250574
Status : Answered
Chosen Option : 2

Q.46 Rajesh invested ₹10,000 by dividing it into two different investment schemes, A and B, at simple interest rates of 8% and 10%, respectively. If the total interest earned in 2 years is ₹1,680, the amount invested in scheme A is:

- Ans ☒ 1. ₹8,000
☒ 2. ₹2,000
☒ 3. ₹6,000
☒ 4. ₹4,000

Question ID : 264330104395
Option 1 ID : 264330409884
Option 2 ID : 264330409881
Option 3 ID : 264330409883
Option 4 ID : 264330409882
Status : Not Attempted and Marked For Review
Chosen Option : --

Q.47 If 42, 36 and 35 are the first three terms of a proportion, then the fourth term is:

- Ans
- ☒ 1. 27
 - ☒ 2. 28
 - ☒ 3. 30
 - ☒ 4. 32

Question ID : 264330145045
Option 1 ID : 264330568438
Option 2 ID : 264330568437
Option 3 ID : 264330568436
Option 4 ID : 264330568435
Status : Answered
Chosen Option : 2

Q.48 If the price item is increased by 70% and then allows a scheme discount of 5% and 20% on this marked price. If price is paid in cash and additional discount of 20% is allowed then what is his gain percentage?

- Ans
- ☒ 1. 2.25%
 - ☒ 2. 4.36%
 - ☒ 3. 3.25%
 - ☒ 4. 3.36%

Question ID : 264330104401
Option 1 ID : 264330409905
Option 2 ID : 264330409908
Option 3 ID : 264330409906
Option 4 ID : 264330409907
Status : Not Answered
Chosen Option : --

Q.49 Jonathan had borrowed a sum of money 3 years ago at 10% interest per annum compounded annually for a 5-year period, with the amount to be paid at the end of the period being ₹1,61,051. However, there is no pre-payment penalty and Jonathan has received some bonus payment now, with which he has decided to clear his debt. How much does Jonathan have to pay now to clear his debt?

- Ans
- ☒ 1. ₹1,33,000
 - ☒ 2. ₹1,32,900
 - ☒ 3. ₹1,33,100
 - ☒ 4. ₹1,33,200

Question ID : 264330145054
Option 1 ID : 264330568471
Option 2 ID : 264330568472
Option 3 ID : 264330568473
Option 4 ID : 264330568474
Status : Answered
Chosen Option : 3

Q.50 What is the area of a triangle whose sides are of lengths 12 cm, 13 cm and 5 cm?

- Ans ☒ 1. 30 cm²
☐ 2. 15 cm²
☐ 3. 40 cm²
☐ 4. 70 cm²

Question ID : 264330106081
Option 1 ID : 264330416627
Option 2 ID : 264330416625
Option 3 ID : 264330416626
Option 4 ID : 264330416628
Status : Not Answered
Chosen Option : --

Section : English Comprehension

Q.1 Select the INCORRECTLY spelt word.

- Ans ☐ 1. Interrogate
☐ 2. Alienate
☐ 3. Deserve
☒ 4. Assassinate

Question ID : 26433089088
Option 1 ID : 264330349875
Option 2 ID : 264330349876
Option 3 ID : 264330349873
Option 4 ID : 264330349874
Status : Answered
Chosen Option : 4

Q.2 Select the most appropriate meaning of the given idiom.
Bend over backwards

- Ans ☒ 1. Working hard to try to impress
☐ 2. Working slowly and lazily
☐ 3. Going backward
☐ 4. Using wrongful means

Question ID : 26433096216
Option 1 ID : 264330377620
Option 2 ID : 264330377619
Option 3 ID : 264330377617
Option 4 ID : 264330377618
Status : Answered
Chosen Option : 1

Q.3 Select the INCORRECTLY spelt word from the underlined words in the following sentence.
This was a blatent disregard to the advisory by the host against it and in violation of norms of the meeting.

- Ans
- ☒ 1. advisory
 - ☒ 2. blatent
 - ☒ 3. disregard
 - ☒ 4. violation

Question ID : 264330141156
Option 1 ID : 264330552969
Option 2 ID : 264330552967
Option 3 ID : 264330552968
Option 4 ID : 264330552970
Status : Answered
Chosen Option : 2

Q.4 Parts of the following sentence have been given as options. Select the option that contains an error.
The dancers swayed dainty on the stage last night.

- Ans
- ☒ 1. last night
 - ☒ 2. on the stage
 - ☒ 3. The dancers
 - ☒ 4. swayed dainty

Question ID : 264330134122
Option 1 ID : 264330525514
Option 2 ID : 264330525513
Option 3 ID : 264330525511
Option 4 ID : 264330525512
Status : Answered
Chosen Option : 4

Q.5 Select the most appropriate one-word substitution of the given group of words.

A notice of the death of a person, often with a biographical sketch, as in a newspaper.

- Ans
- ☒ 1. Obituary
 - ☒ 2. Oblivion
 - ☒ 3. Elegy
 - ☒ 4. Advertisement

Question ID : 26433090852
Option 1 ID : 264330356819
Option 2 ID : 264330356817
Option 3 ID : 264330356820
Option 4 ID : 264330356818
Status : Not Attempted and Marked For Review
Chosen Option : --

Q.6 Select the INCORRECTLY spelt word.

- Ans ☒ 1. Adjacent
- ☒ 2. Accomplish
- ☒ 3. Agregate
- ☒ 4. Allure

Question ID : 264330122278
Option 1 ID : 264330479240
Option 2 ID : 264330479241
Option 3 ID : 264330479239
Option 4 ID : 264330479242
Status : Marked For Review
Chosen Option : 3

Q.7 Select the most appropriate idiomatic expression that can substitute the underlined segment in the given sentence.
Both Nitin and Uday are of the same interests.

- Ans ☒ 1. under the weather
- ☒ 2. birds of the same feather
- ☒ 3. blowing smoke without fire
- ☒ 4. different kettles of fish

Question ID : 264330134223
Option 1 ID : 264330525890
Option 2 ID : 264330525888
Option 3 ID : 264330525887
Option 4 ID : 264330525889
Status : Answered
Chosen Option : 1

Q.8 Select the most appropriate ANTONYM of the word ‘moving’ in the given sentence and choose the correct option.

The old grandfather clock chimed loudly, marking the passage of time with its steady tick-tock.

- Ans ☒ 1. Steady
- ☒ 2. Marking
- ☒ 3. Chimed
- ☒ 4. Passage

Question ID : 264330163539
Option 1 ID : 264330641414
Option 2 ID : 264330641412
Option 3 ID : 264330641411
Option 4 ID : 264330641413
Status : Answered
Chosen Option : 1

Q.9 Select the most appropriate option that can substitute the underlined segment in the given sentence. If there is no need to substitute it, select 'No substitution required'.
Her paintings are way better then her sketches.

- Ans
- ☒ 1. off
 - ☒ 2. than
 - ☒ 3. more
 - ☒ 4. No substitution required

Question ID : 26433070772
Option 1 ID : 264330277544
Option 2 ID : 264330277546
Option 3 ID : 264330277545
Option 4 ID : 264330277547
Status : Answered
Chosen Option : 2

Q.10 Select the most appropriate meaning of the underlined idiom in the given sentence.
I hate to get off on the wrong foot.

- Ans
- ☒ 1. To start something with positive factors
 - ☒ 2. To start something with neutral factors
 - ☒ 3. To start a relationship or activity badly
 - ☒ 4. To start something with an injury on the wrong foot

Question ID : 26433089397
Option 1 ID : 264330351089
Option 2 ID : 264330351091
Option 3 ID : 264330351090
Option 4 ID : 264330351092
Status : Answered
Chosen Option : 3

Q.11 Select the most appropriate phrasal verb to fill in the blank.
Arunima _____ a lot during her vacation time.

- Ans
- ☒ 1. gets on
 - ☒ 2. gets after
 - ☒ 3. gets about
 - ☒ 4. gets along

Question ID : 26433084918
Option 1 ID : 264330333396
Option 2 ID : 264330333395
Option 3 ID : 264330333394
Option 4 ID : 264330333393
Status : Answered
Chosen Option : 4

Q.12 Select the most appropriate meaning of the given idiom.
The best of both worlds

- Ans
- ☒ 1. Good things come after bad things
 - ☒ 2. An ideal situation
 - ☒ 3. Better to show than tell
 - ☒ 4. Make people comfortable

Question ID : 264330163403
Option 1 ID : 264330640894
Option 2 ID : 264330640891
Option 3 ID : 264330640893
Option 4 ID : 264330640892
Status : Answered
Chosen Option : 4

Q.13 Select the option that can be used as a one-word substitute for the underlined group of words.

How did you become interested in learning the art of producing beautiful handwriting?

- Ans
- ☒ 1. Lexicography
 - ☒ 2. Demography
 - ☒ 3. Calligraphy
 - ☒ 4. Graphology

Question ID : 26433088833
Option 1 ID : 264330348885
Option 2 ID : 264330348887
Option 3 ID : 264330348886
Option 4 ID : 264330348888
Status : Not Answered
Chosen Option : --

Q.14 Select the most appropriate synonym of the given word.

Haphazard

- Ans
- ☒ 1. Random
 - ☒ 2. Sociable
 - ☒ 3. Aggressive
 - ☒ 4. Confident

Question ID : 264330163333
Option 1 ID : 264330640634
Option 2 ID : 264330640633
Option 3 ID : 264330640632
Option 4 ID : 264330640631
Status : Not Answered
Chosen Option : --

Q.15 Parts of the following sentence have been given as options. One of them may contain an error. Select the part that contains the error from the given options. If you don't find any error, mark 'No error' as your answer.

We feed the horse oats for a week because it had eaten all the hay.

- Ans ☒ 1. No error
- ☒ 2. it had eaten all the hay
- ☒ 3. We feed the horse oats
- ☒ 4. for a week because

Question ID : 26433090495
Option 1 ID : 264330355432
Option 2 ID : 264330355431
Option 3 ID : 264330355429
Option 4 ID : 264330355430
Status : Answered
Chosen Option : 1

Q.16 The following sentence has been split into four segments. Identify the segment that contains a grammatical error.
They will not attend / the event / as they're going / away at end of April.

- Ans ☒ 1. away at end of April.
- ☒ 2. as they're going
- ☒ 3. the event
- ☒ 4. They will not attend

Question ID : 264330120573
Option 1 ID : 264330472536
Option 2 ID : 264330472535
Option 3 ID : 264330472538
Option 4 ID : 264330472537
Status : Answered
Chosen Option : 1

Q.17 Select the option that can be used as a one-word substitute for the underlined group of words.

Ms. Scarlet was indifferent to pain and pleasure, she never complained.

- Ans ☒ 1. Hypocrite
- ☒ 2. Stoic
- ☒ 3. Versatile
- ☒ 4. Amateur

Question ID : 26433088836
Option 1 ID : 264330348897
Option 2 ID : 264330348899
Option 3 ID : 264330348900
Option 4 ID : 264330348898
Status : Answered
Chosen Option : 2

Q.18 You are preparing a speech for the upcoming function. Select a synonym for the highlighted word to make it better.
Despite the advancement in technology many rural areas in developing countries still lack access to basic necessities.

- Ans
- ☒ 1. Desist
 - ☒ 2. Disguise
 - ☒ 3. Avenue
 - ☒ 4. Apathy

Question ID : 264330122810
Option 1 ID : 264330481310
Option 2 ID : 264330481307
Option 3 ID : 264330481308
Option 4 ID : 264330481309
Status : Answered
Chosen Option : 3

Q.19 Select the most appropriate meaning of the underlined idiom.

Students often burn the midnight oil to qualify for competitive examinations.

- Ans
- ☒ 1. put the things on fire at night
 - ☒ 2. want to be at a place full of light
 - ☒ 3. work until late at night
 - ☒ 4. sleep well

Question ID : 26433099087
Option 1 ID : 264330388981
Option 2 ID : 264330388984
Option 3 ID : 264330388983
Option 4 ID : 264330388982
Status : Answered
Chosen Option : 3

Q.20 Select the most appropriate meaning of the underlined idiom.
More people in Turkey are on the breadline now than thirty years ago.

- Ans
- ☒ 1. Be very poor
 - ☒ 2. Are well educated
 - ☒ 3. Be very expensive
 - ☒ 4. Earn a lot of money

Question ID : 264330132898
Option 1 ID : 264330520654
Option 2 ID : 264330520652
Option 3 ID : 264330520651
Option 4 ID : 264330520653
Status : Answered
Chosen Option : 1

Q.21 Select the most appropriate synonym of the given word.
Justifiable

- Ans**
- ☒ 1. Indefensible
 - ☒ 2. Neutral
 - ☒ 3. Maintainable
 - ☒ 4. Reasonable

Question ID : 264330164162
Option 1 ID : 264330643899
Option 2 ID : 264330643902
Option 3 ID : 264330643901
Option 4 ID : 264330643900
Status : Answered
Chosen Option : 4

Q.22 Select the most appropriate meaning of the given idiom.

Left out in the cold

- Ans**
- ☒ 1. To serve stale and cold food
 - ☒ 2. To leave in hurry
 - ☒ 3. To bear extreme weather condition
 - ☒ 4. To be ignored

Question ID : 264330163406
Option 1 ID : 264330640906
Option 2 ID : 264330640904
Option 3 ID : 264330640905
Option 4 ID : 264330640903
Status : Answered
Chosen Option : 2

Q.23 Select the option that can be used as a one-word substitute for the given group of words.

Fear of water

- Ans**
- ☒ 1. Hydrophobia
 - ☒ 2. Bibliophobia
 - ☒ 3. Microphobia
 - ☒ 4. Botanophobia

Question ID : 26433088755
Option 1 ID : 264330348574
Option 2 ID : 264330348575
Option 3 ID : 264330348573
Option 4 ID : 264330348576
Status : Answered
Chosen Option : 1

Q.24 Select the option that can substitute the bracketed word segment correctly and complete the following sentence meaningfully.
Lots of kids (was visualised) crossing the road when the bus arrived.

- Ans ☒ 1. were seen
 ☐ 2. have been seen
 ☐ 3. are seen
 ☐ 4. was seen

Question ID : 264330134148
Option 1 ID : 264330525617
Option 2 ID : 264330525618
Option 3 ID : 264330525616
Option 4 ID : 264330525615
Status : Answered
Chosen Option : 1

Q.25 Select the most appropriate synonym of the given word.
Dreadful

- Ans ☐ 1. Feeble
 ☒ 2. Terrible
 ☐ 3. Auspicious
 ☐ 4. Propitious

Question ID : 264330120533
Option 1 ID : 264330472381
Option 2 ID : 264330472382
Option 3 ID : 264330472380
Option 4 ID : 264330472379
Status : Answered
Chosen Option : 2

Q.26 Select the most appropriate meaning of the underlined idiom.
We dodged a bullet when we didn't fall for the agents' words.

- Ans ☐ 1. To give something a try
 ☒ 2. To narrowly avoid situation
 ☐ 3. To be out of your comfort zone
 ☐ 4. To start performing better

Question ID : 264330120619
Option 1 ID : 264330472715
Option 2 ID : 264330472717
Option 3 ID : 264330472718
Option 4 ID : 264330472716
Status : Answered
Chosen Option : 3

Q.27 Select the word which means the same as the group of words underlined in the given sentence.

The pandemic deeply affected small business owners, as they have no means of livelihood left.

- Ans ☒ 1. Pauper
- ☐ 2. Worker
- ☐ 3. Unemployed
- ☐ 4. Mason

Question ID : 26433089713
Option 1 ID : 264330352348
Option 2 ID : 264330352346
Option 3 ID : 264330352347
Option 4 ID : 264330352345
Status : Answered
Chosen Option : 3

Q.28 Select the option that will improve the underlined part of the given sentence.
The use of chemicals, insecticides and pesticides began after the Green Revolution.

- Ans ☐ 1. A practice of chemicals, insecticides and pesticides
- ☐ 2. The custom of chemicals, insecticides and pesticides
- ☐ 3. Consumption of chemicals, insecticides and pesticides
- ☒ 4. The usage of chemicals, insecticides and pesticides

Question ID : 264330145288
Option 1 ID : 264330569407
Option 2 ID : 264330569408
Option 3 ID : 264330569409
Option 4 ID : 264330569410
Status : Answered
Chosen Option : 4

Q.29 Select the most appropriate ANTONYM of the given word.

Catastrophic

- Ans ☐ 1. Calamity
- ☒ 2. Fortuitous
- ☐ 3. Fiasco
- ☐ 4. Sabotage

Question ID : 264330163359
Option 1 ID : 264330640727
Option 2 ID : 264330640729
Option 3 ID : 264330640730
Option 4 ID : 264330640728
Status : Not Attempted and Marked For Review
Chosen Option : --

Q.30 Select the most appropriate meaning of the given idiom.

An arm and a leg

- Ans
- ☒ 1. To ask for too much
 - ☐ 2. A large amount of money
 - ☐ 3. Everything is ready
 - ☐ 4. To be lost and bewildered

Question ID : 26433092076
Option 1 ID : 264330361626
Option 2 ID : 264330361627
Option 3 ID : 264330361625
Option 4 ID : 264330361628
Status : Answered
Chosen Option : 1

Q.31 The following sentence has been split into four segments. Identify the segment that contains a spelling error.
He wrote his dairy / in code / so that nobody / could understand it.

- Ans
- ☐ 1. so that nobody
 - ☐ 2. could understand it
 - ☐ 3. in code
 - ☒ 4. He wrote his dairy

Question ID : 264330123023
Option 1 ID : 264330482157
Option 2 ID : 264330482158
Option 3 ID : 264330482156
Option 4 ID : 264330482155
Status : Answered
Chosen Option : 2

Q.32 Select the most appropriate ANTONYM for the highlighted word.
The negligent attitude of the cops was criticised.

- Ans
- ☒ 1. attentive
 - ☐ 2. reluctant
 - ☐ 3. amplify
 - ☐ 4. bored

Question ID : 264330120738
Option 1 ID : 264330473169
Option 2 ID : 264330473167
Option 3 ID : 264330473170
Option 4 ID : 264330473168
Status : Answered
Chosen Option : 3

Q.33 Select the most appropriate one-word substitution of the given group of words.

A person engaged in or trained for spaceflight.

- Ans ☒ 1. Astute
☒ 2. Astronomer
☒ 3. Astronaut
☒ 4. Atrocious

Question ID : 26433090849
Option 1 ID : 264330356806
Option 2 ID : 264330356808
Option 3 ID : 264330356807
Option 4 ID : 264330356805
Status : Marked For Review
Chosen Option : 3

Q.34 Select the most appropriate synonym of the given word.

Site

- Ans ☒ 1. Lap
☒ 2. Location
☒ 3. Globe
☒ 4. Pull

Question ID : 26433063165
Option 1 ID : 264330247327
Option 2 ID : 264330247324
Option 3 ID : 264330247325
Option 4 ID : 264330247326
Status : Answered
Chosen Option : 2

Q.35 Select the INCORRECTLY spelt word.

- Ans ☒ 1. Serene
☒ 2. Triumph
☒ 3. Comparsion
☒ 4. Unveil

Question ID : 26433091837
Option 1 ID : 264330360685
Option 2 ID : 264330360686
Option 3 ID : 264330360688
Option 4 ID : 264330360687
Status : Answered
Chosen Option : 1

Q.36 The following sentence has been split into four segments. Identify the segment that contains a grammatical error.

She will have participate / in the dance competition / by the time her father / returns from the tour.

- Ans
- ☒ 1. in the dance competition
 - ☒ 2. She will have participate
 - ☒ 3. by the time her father
 - ☒ 4. returns from the tour

Question ID : 264330145281
Option 1 ID : 264330569379
Option 2 ID : 264330569380
Option 3 ID : 264330569382
Option 4 ID : 264330569381
Status : Answered
Chosen Option : 2

Q.37 Select the option that can be used as a one-word substitute for the given group of words.
Working or operating quickly and effectively in an organised way

- Ans
- ☒ 1. Efficient
 - ☒ 2. Extensive
 - ☒ 3. Excellent
 - ☒ 4. Effusive

Question ID : 26433099604
Option 1 ID : 264330391031
Option 2 ID : 264330391030
Option 3 ID : 264330391032
Option 4 ID : 264330391029
Status : Answered
Chosen Option : 1

Q.38 Select the most appropriate synonym of the given word.
Abandon

- Ans
- ☒ 1. Perish
 - ☒ 2. Desert
 - ☒ 3. Prolong
 - ☒ 4. Retain

Question ID : 264330117331
Option 1 ID : 264330461380
Option 2 ID : 264330461379
Option 3 ID : 264330461377
Option 4 ID : 264330461378
Status : Answered
Chosen Option : 2

Q.39 Select the most appropriate ANTONYM of the given word.
Damp

- Ans ☒ 1. Misty
- ☒ 2. Arid
- ☒ 3. Tropical
- ☒ 4. Soaked

Question ID : 264330165261
Option 1 ID : 264330648138
Option 2 ID : 264330648136
Option 3 ID : 264330648135
Option 4 ID : 264330648137
Status : Not Attempted and Marked For Review
Chosen Option : --

Q.40 Select the most appropriate meaning of the given idiom.

A leopard can't change his spots

- Ans ☒ 1. Someone who is cherished above all others
- ☒ 2. A visual presentation is far more descriptive than words
- ☒ 3. Something good that isn't recognised at first
- ☒ 4. You cannot change who you are

Question ID : 264330163402
Option 1 ID : 264330640889
Option 2 ID : 264330640887
Option 3 ID : 264330640888
Option 4 ID : 264330640890
Status : Answered
Chosen Option : 4

Comprehension:

In the following passage some words have been deleted. Read the passage carefully and select the most appropriate option for each blank.

The Amazon rainforest is an awe-inspiring natural wonder that (1)_____ across several South American countries, including Brazil, Peru, Colombia, and Ecuador. Covering an (2)_____ area of 5.5 million square kilometres, it is the largest tropical rainforest on Earth. The Amazon jungle is (3)_____ for its remarkable biodiversity, harbouring an astonishing array of plant and animal species that are still being discovered and studied. The dense vegetation of the jungle creates a (4)_____ and complex ecosystem, supporting countless species and providing crucial ecosystem services such as carbon sequestration and climate regulation. It is also home to (5)_____ communities that have thrived within its rich confines for centuries, preserving their traditions and deep connection to the land.

SubQuestion No : 41

Q.41 Select the most appropriate option to fill in blank number 1.

- Ans ☒ 1. reaches
- ☒ 2. lengths
- ☒ 3. amounts
- ☒ 4. spans

Question ID : 264330164254
Option 1 ID : 264330644245
Option 2 ID : 264330644246
Option 3 ID : 264330644243
Option 4 ID : 264330644244
Status : Marked For Review
Chosen Option : 1

Comprehension:

In the following passage some words have been deleted. Read the passage carefully and select the most appropriate option for each blank.

The Amazon rainforest is an awe-inspiring natural wonder that (1)_____ across several South American countries, including Brazil, Peru, Colombia, and Ecuador. Covering an (2)_____ area of 5.5 million square kilometres, it is the largest tropical rainforest on Earth. The Amazon jungle is (3)_____ for its remarkable biodiversity, harbouring an astonishing array of plant and animal species that are still being discovered and studied. The dense vegetation of the jungle creates a (4)_____ and complex ecosystem, supporting countless species and providing crucial ecosystem services such as carbon sequestration and climate regulation. It is also home to (5)_____ communities that have thrived within its rich confines for centuries, preserving their traditions and deep connection to the land.

SubQuestion No : 42

Q.42 Select the most appropriate option to fill in blank number 2.

- Ans ☒ 1. gauged
☒ 2. rated
☒ 3. estimated
☒ 4. evaluated

Question ID : 264330164255
Option 1 ID : 264330644247
Option 2 ID : 264330644250
Option 3 ID : 264330644248
Option 4 ID : 264330644249
Status : Answered
Chosen Option : 3

Comprehension:

In the following passage some words have been deleted. Read the passage carefully and select the most appropriate option for each blank.

The Amazon rainforest is an awe-inspiring natural wonder that (1)_____ across several South American countries, including Brazil, Peru, Colombia, and Ecuador. Covering an (2)_____ area of 5.5 million square kilometres, it is the largest tropical rainforest on Earth. The Amazon jungle is (3)_____ for its remarkable biodiversity, harbouring an astonishing array of plant and animal species that are still being discovered and studied. The dense vegetation of the jungle creates a (4)_____ and complex ecosystem, supporting countless species and providing crucial ecosystem services such as carbon sequestration and climate regulation. It is also home to (5)_____ communities that have thrived within its rich confines for centuries, preserving their traditions and deep connection to the land.

SubQuestion No : 43

Q.43 Select the most appropriate option to fill in blank number 3.

- Ans ☒ 1. great
☒ 2. acclaimed
☒ 3. renowned
☒ 4. pre-eminent

Question ID : 264330164256
Option 1 ID : 264330644251
Option 2 ID : 264330644252
Option 3 ID : 264330644253
Option 4 ID : 264330644254
Status : Answered
Chosen Option : 3

Comprehension:

In the following passage some words have been deleted. Read the passage carefully and select the most appropriate option for each blank.

The Amazon rainforest is an awe-inspiring natural wonder that (1)_____ across several South American countries, including Brazil, Peru, Colombia, and Ecuador. Covering an (2)_____ area of 5.5 million square kilometres, it is the largest tropical rainforest on Earth. The Amazon jungle is (3)_____ for its remarkable biodiversity, harbouring an astonishing array of plant and animal species that are still being discovered and studied. The dense vegetation of the jungle creates a (4)_____ and complex ecosystem, supporting countless species and providing crucial ecosystem services such as carbon sequestration and climate regulation. It is also home to (5)_____ communities that have thrived within its rich confines for centuries, preserving their traditions and deep connection to the land.

SubQuestion No : 44

Q.44 Select the most appropriate option to fill in blank number 4.

- Ans ☒ 1. vigour
☒ 2. spirited
☒ 3. vibrant
☒ 4. lavish

Question ID : 264330164257
Option 1 ID : 264330644258
Option 2 ID : 264330644256
Option 3 ID : 264330644255
Option 4 ID : 264330644257
Status : Answered
Chosen Option : 4

Comprehension:

In the following passage some words have been deleted. Read the passage carefully and select the most appropriate option for each blank.

The Amazon rainforest is an awe-inspiring natural wonder that (1)_____ across several South American countries, including Brazil, Peru, Colombia, and Ecuador. Covering an (2)_____ area of 5.5 million square kilometres, it is the largest tropical rainforest on Earth. The Amazon jungle is (3)_____ for its remarkable biodiversity, harbouring an astonishing array of plant and animal species that are still being discovered and studied. The dense vegetation of the jungle creates a (4)_____ and complex ecosystem, supporting countless species and providing crucial ecosystem services such as carbon sequestration and climate regulation. It is also home to (5)_____ communities that have thrived within its rich confines for centuries, preserving their traditions and deep connection to the land.

SubQuestion No : 45

Q.45 Select the most appropriate option to fill in blank number 5.

- Ans ☒ 1. late
☒ 2. ancient
☒ 3. indigenous
☒ 4. organic

Question ID : 264330164258
Option 1 ID : 264330644260
Option 2 ID : 264330644261
Option 3 ID : 264330644262
Option 4 ID : 264330644259
Status : Answered
Chosen Option : 3

Comprehension:

Read the given passage and answer the question that follows.

We started our research into organisational and personal excellence by studying a slightly different topic. We figured that if we could learn why certain people were more effective than others, then we could learn exactly what they did, clone it and pass it on to others. We asked people to identify who they thought were their most effective colleagues. In fact, over the past twenty-five years, we have asked over twenty thousand people to identify the individuals in their organisations who could really get things done. We wanted to find those who were not just influential but who were far more influential than the rest.

SubQuestion No : 46

Q.46 Which real life situation can be the most appropriate to be inferred from the passage?

- Ans
- ☒ 1. Inflation has direct influence on the morals and ethics of an individual.
 - ☒ 2. If we do something wrong to decent people, the same comes to haunt us even after many years.
 - ☒ 3. People nowadays do not have patience and want quick success and does not matter what path they choose to obtain their targets.
 - ☒ 4. Jassie is an efficient employee whose work ethics can be a case study to learn more about organisational and personal excellence.

Question ID : 264330164710
Option 1 ID : 264330645996
Option 2 ID : 264330645995
Option 3 ID : 264330645998
Option 4 ID : 264330645997
Status : Answered
Chosen Option : 4

Comprehension:

Read the given passage and answer the question that follows.

We started our research into organisational and personal excellence by studying a slightly different topic. We figured that if we could learn why certain people were more effective than others, then we could learn exactly what they did, clone it and pass it on to others. We asked people to identify who they thought were their most effective colleagues. In fact, over the past twenty-five years, we have asked over twenty thousand people to identify the individuals in their organisations who could really get things done. We wanted to find those who were not just influential but who were far more influential than the rest.

SubQuestion No : 47

Q.47 Select the most suitable structure for the above passage.

- Ans
- ☒ 1. Chronological
 - ☒ 2. Cause and Effect
 - ☒ 3. Pragmatic
 - ☒ 4. Compare and contrast

Question ID : 264330164709
Option 1 ID : 264330645991
Option 2 ID : 264330645993
Option 3 ID : 264330645994
Option 4 ID : 264330645992
Status : Not Answered
Chosen Option : --

Comprehension:

Read the given passage and answer the question that follows.

We started our research into organisational and personal excellence by studying a slightly different topic. We figured that if we could learn why certain people were more effective than others, then we could learn exactly what they did, clone it and pass it on to others. We asked people to identify who they thought were their most effective colleagues. In fact, over the past twenty-five years, we have asked over twenty thousand people to identify the individuals in their organisations who could really get things done. We wanted to find those who were not just influential but who were far more influential than the rest.

SubQuestion No : 48

Q.48 Select the most appropriate ANTONYM of the given word.

Effective

- Ans ☒ 1. Deniable
☒ 2. Harmonious
☒ 3. Fruitless
☒ 4. Courteous

Question ID : 264330164711
Option 1 ID : 264330646001
Option 2 ID : 264330645999
Option 3 ID : 264330646000
Option 4 ID : 264330646002
Status : Answered
Chosen Option : 1

Comprehension:

Read the given passage and answer the question that follows.

We started our research into organisational and personal excellence by studying a slightly different topic. We figured that if we could learn why certain people were more effective than others, then we could learn exactly what they did, clone it and pass it on to others. We asked people to identify who they thought were their most effective colleagues. In fact, over the past twenty-five years, we have asked over twenty thousand people to identify the individuals in their organisations who could really get things done. We wanted to find those who were not just influential but who were far more influential than the rest.

SubQuestion No : 49

Q.49 Select the most appropriate title to the given passage.

- Ans ☒ 1. Research Grants in Organisations
☒ 2. Learn, Clone and Pass
☒ 3. Most Effective Colleagues
☒ 4. Different Topics

Question ID : 264330164707
Option 1 ID : 264330645985
Option 2 ID : 264330645984
Option 3 ID : 264330645983
Option 4 ID : 264330645986
Status : Answered
Chosen Option : 3

Comprehension:

Read the given passage and answer the question that follows.

We started our research into organisational and personal excellence by studying a slightly different topic. We figured that if we could learn why certain people were more effective than others, then we could learn exactly what they did, clone it and pass it on to others. We asked people to identify who they thought were their most effective colleagues. In fact, over the past twenty-five years, we have asked over twenty thousand people to identify the individuals in their organisations who could really get things done. We wanted to find those who were not just influential but who were far more influential than the rest.

SubQuestion No : 50

Q.50 Select the statement that most appropriately sums up the passage given.

- Ans**
- ☐ 1. Some people cannot be identified due to their most effective ways in 25 years.
 - ☐ 2. Research grants in an organisation should be increased for personal excellence.
 - ☐ 3. It takes 25 years of research to make people more effective and influential.
 - ☒ 4. Some people are more effective and more influential than others to get things done.

Question ID : **264330164708**
Option 1 ID : **264330645988**
Option 2 ID : **264330645987**
Option 3 ID : **264330645990**
Option 4 ID : **264330645989**
Status : **Answered**
Chosen Option : **4**