

Multi Tasking Non Technical Staff and Havaladar CBIC and CBN Examination 2022

Roll Number	HaryanaJobs.in
Candidate Name	HaryanaJobs.in
Venue Name	Neta Jee Subhash Chandra Bose Online Examination Center
Exam Date	02/05/2023
Exam Time	9:00 AM - 10:30 AM
Subject	MTS Non Tech Havaladar CBIC and CBN Examination 2022

Section : Numerical and Mathematical Ability

Q.1 What is the LCM of 15 and 25?

- Ans**
- 1. 25
 - 2. 105
 - 3. 75
 - 4. 125

Question Type : **MCQ**

Question ID : **264330139091**

Option 1 ID : **264330544972**

Option 2 ID : **264330544974**

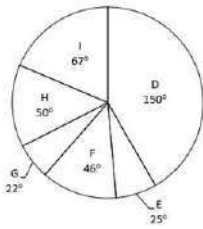
Option 3 ID : **264330544971**

Option 4 ID : **264330544973**

Status : **Answered**

Chosen Option : **3**

Q.2 The pie chart given below shows the number of trucks manufactured by Six companies in a year. Total trucks manufactured by all these Six companies are 1800. Number of trucks manufactured by a particular company is shown in terms of degree with respect to the total number of trucks manufactured by all these Six companies.



Number of trucks manufactured by D and F together is what percent of the number of trucks manufactured by G and I together?

- Ans**
- 1. 140.2 percent
 - 2. 220.2 percent
 - 3. 260.4 percent
 - 4. 234.3 percent

Question Type : **MCQ**

Question ID : **264330139095**

Option 1 ID : **264330544988**

Option 2 ID : **264330544989**

Option 3 ID : **264330544990**

Option 4 ID : **264330544987**

Status : **Answered**

Chosen Option : **2**

Q.3 If two mixers and one T.V cost Rs. 700. While two T.V s and one mixer cost Rs. 980. The value of one T.V is:

- Ans** 1. Rs.420
 2. Rs.400
 3. Rs.450
 4. Rs.480

Question Type : **MCQ**
Question ID : **264330141043**
Option 1 ID : **264330552520**
Option 2 ID : **264330552519**
Option 3 ID : **264330552521**
Option 4 ID : **264330552522**
Status : **Answered**
Chosen Option : **1**

Q.4 If $(7x + y) : (7x - y) = 7 : 3$, then what is the value of $x : y$?

- Ans** 1. 4 : 3
 2. 5 : 14
 3. 15 : 6
 4. 6 : 15

Question Type : **MCQ**
Question ID : **264330139084**
Option 1 ID : **264330544946**
Option 2 ID : **264330544943**
Option 3 ID : **264330544944**
Option 4 ID : **264330544945**
Status : **Answered**
Chosen Option : **2**

Q.5 The ratio of the speed of Aman, Kamal and Manan is 2 : 3 : 4 respectively. What is the ratio of the time taken by Aman, Kamal and Manan respectively to cover the same distance?

- Ans** 1. 4 : 3 : 2
 2. 2 : 3 : 4
 3. 6 : 4 : 3
 4. 8 : 9 : 16

Question Type : **MCQ**
Question ID : **264330139085**
Option 1 ID : **264330544948**
Option 2 ID : **264330544947**
Option 3 ID : **264330544950**
Option 4 ID : **264330544949**
Status : **Answered**
Chosen Option : **3**

Q.6 If both length and breadth of a cuboid is increased by 50 percent, then by how much percent its height should be reduced so that its volume remains same?

- Ans**
- 1. 62.34 percent
 - 2. 55.55 percent
 - 3. 37.25 percent
 - 4. 48.75 percent

Question Type : **MCQ**
Question ID : **264330139009**
Option 1 ID : **264330544645**
Option 2 ID : **264330544646**
Option 3 ID : **264330544643**
Option 4 ID : **264330544644**
Status : **Answered**
Chosen Option : **2**

Q.7 A, B and C are Accountants. A alone can file a return in 6 hours and B alone can file the same return in 10 hours. All three together can do it in 3 hours. In what time will C alone file the same return?

- Ans**
- 1. 15 hours
 - 2. 4 hours
 - 3. 7 hours
 - 4. 8 hours

Question Type : **MCQ**
Question ID : **264330135428**
Option 1 ID : **264330530622**
Option 2 ID : **264330530620**
Option 3 ID : **264330530619**
Option 4 ID : **264330530621**
Status : **Answered**
Chosen Option : **1**

Q.8 The average of p, q, r and s is 30. If the average of p and q is 12, then what will be the average of r and s?

- Ans**
- 1. 50
 - 2. 52
 - 3. 48
 - 4. 56

Question Type : **MCQ**
Question ID : **264330139079**
Option 1 ID : **264330544923**
Option 2 ID : **264330544925**
Option 3 ID : **264330544926**
Option 4 ID : **264330544924**
Status : **Answered**
Chosen Option : **3**

Q.9 M alone can complete a work in 50 days and N alone can complete the same work in 100 days. If both of them work together, then in 25 days what percent work of the total work will be completed?

- Ans**
- 1. 60 percent
 - 2. 55 percent
 - 3. 75 percent
 - 4. 80 percent

Question Type : **MCQ**
Question ID : **264330138996**
Option 1 ID : **264330544593**
Option 2 ID : **264330544594**
Option 3 ID : **264330544591**
Option 4 ID : **264330544592**
Status : **Answered**
Chosen Option : **3**

Q.10 A saves 18% of his income. If his income increases by 41% and still saves the same amount. Find the percentage increase in his expenditure.

- Ans**
- 1. 60%
 - 2. 35%
 - 3. 50%
 - 4. 40%

Question Type : **MCQ**
Question ID : **264330138418**
Option 1 ID : **264330542282**
Option 2 ID : **264330542280**
Option 3 ID : **264330542279**
Option 4 ID : **264330542281**
Status : **Answered**
Chosen Option : **3**

Q.11 If the surface area of two spheres is in the ratio 81 : 25, then what is the ratio of their radius.

- Ans**
- 1. 5 : 8
 - 2. 7 : 9
 - 3. 5 : 7
 - 4. 9 : 5

Question Type : **MCQ**
Question ID : **264330135433**
Option 1 ID : **264330530639**
Option 2 ID : **264330530641**
Option 3 ID : **264330530640**
Option 4 ID : **264330530642**
Status : **Answered**
Chosen Option : **4**

Q.12 The difference between compound interest and simple interest on a sum of Rs. 16,000 for two years is Rs. 160. Find the per annum rate of interest.

- Ans**
- 1. 12%
 - 2. 10%
 - 3. 11%
 - 4. 15%

Question Type : **MCQ**
Question ID : **264330138425**
Option 1 ID : **264330542310**
Option 2 ID : **264330542307**
Option 3 ID : **264330542308**
Option 4 ID : **264330542309**
Status : **Answered**
Chosen Option : **2**

Q.13 What is the value of $28 \times 25 \div 7 \times 15 + 63 \times 56 \div 72 \times 5 + 24 \times 7 + 8?$

- Ans**
- 1. 2101
 - 2. 1821
 - 3. 1921
 - 4. 1901

Question Type : **MCQ**
Question ID : **264330137171**
Option 1 ID : **264330537330**
Option 2 ID : **264330537327**
Option 3 ID : **264330537328**
Option 4 ID : **264330537329**
Status : **Answered**
Chosen Option : **3**

Q.14 A bus covers a distance of 45 km in 45 minutes. If its speed is decreased by 20 km/hr, then what will be the time taken by it to cover the same distance?

- Ans**
- 1. 62.5 minutes
 - 2. 67.5 minutes
 - 3. 78.5 minutes
 - 4. 72.5 minutes

Question Type : **MCQ**
Question ID : **264330139078**
Option 1 ID : **264330544922**
Option 2 ID : **264330544920**
Option 3 ID : **264330544921**
Option 4 ID : **264330544919**
Status : **Answered**
Chosen Option : **2**

Q.15 A man earns a profit of 45 percent by selling a bike for a certain price. If he sells that bike at double the price, then what will be the profit percentage?

- Ans**
- 1. 80 percent
 - 2. 180 percent
 - 3. 90 percent
 - 4. 190 percent

Question Type : **MCQ**
Question ID : **264330139083**
Option 1 ID : **264330544941**
Option 2 ID : **264330544939**
Option 3 ID : **264330544940**
Option 4 ID : **264330544942**
Status : **Answered**
Chosen Option : **4**

Q.16 A man takes 6 hours to go to a place and come back by walking both the ways. He could have saved 2 hours by riding both the ways. The distance covered in the whole journey is 20 miles. What is the average speed for the whole journey if he goes by walking and comes back by riding?

- Ans**
- 1. 8 miles/hr
 - 2. 5 miles/hr
 - 3. 6 miles/hr
 - 4. 4 miles/hr

Question Type : **MCQ**
Question ID : **264330138093**
Option 1 ID : **264330540981**
Option 2 ID : **264330540982**
Option 3 ID : **264330540980**
Option 4 ID : **264330540979**
Status : **Answered**
Chosen Option : **4**

Q.17 What is the HCF of two prime numbers X and Y?

- Ans**
- 1. 1
 - 2. 2
 - 3. Y
 - 4. X

Question Type : **MCQ**
Question ID : **264330135370**
Option 1 ID : **264330530387**
Option 2 ID : **264330530388**
Option 3 ID : **264330530390**
Option 4 ID : **264330530389**
Status : **Answered**
Chosen Option : **1**

Q.18 Jaya invested Rs. 14800 at 8.5% per annum on simple interest. The interest earned after 6 months is:

- Ans**
- 1. Rs. 642
 - 2. Rs. 598
 - 3. Rs. 629
 - 4. Rs. 580

Question Type : **MCQ**

Question ID : **264330138711**

Option 1 ID : **264330543453**

Option 2 ID : **264330543454**

Option 3 ID : **264330543451**

Option 4 ID : **264330543452**

Status : **Answered**

Chosen Option : **3**

Q.19 The table given below shows the marked price and the value of discount of five different articles.

Article	Marked price	Discount
A	Rs. 350	Rs. 70
B	Rs. 650	Rs. 75
C	Rs. 450	Rs. 66
D	Rs. 750	Rs. 72
E	Rs. 850	Rs. 80

Selling price = Marked price – Discount

L1 = The value of average of discount of article C and D.

L2 = Sum of the selling price of all articles.

What is the value of (L1 + L2)?

- Ans**
- 1. 2756
 - 2. 2687
 - 3. 2816
 - 4. 2618

Question Type : **MCQ**

Question ID : **264330137172**

Option 1 ID : **264330537332**

Option 2 ID : **264330537333**

Option 3 ID : **264330537334**

Option 4 ID : **264330537331**

Status : **Answered**

Chosen Option : **1**


Q.20 Marked price of a computer is Rs. 10000. Selling price of computer is Rs. 7650. If two successive discounts of 15 percent and x percent are given, then what is the value of x?

- Ans**
- 1. 5 percent
 - 2. 15 percent
 - 3. 10 percent
 - 4. 20 percent

Question Type : **MCQ**
 Question ID : **264330139088**
 Option 1 ID : **264330544961**
 Option 2 ID : **264330544962**
 Option 3 ID : **264330544959**
 Option 4 ID : **264330544960**
 Status : **Answered**
 Chosen Option : **3**

Section : Reasoning Ability and Problem Solving

Q.1 Which answer figure will complete the pattern in the question figure?



Ans

- 1.
- 2.
- 3.
- 4.

Question Type : **MCQ**
 Question ID : **264330138870**
 Option 1 ID : **264330544087**
 Option 2 ID : **264330544088**
 Option 3 ID : **264330544089**
 Option 4 ID : **264330544090**
 Status : **Answered**
 Chosen Option : **1**

Q.2 Seven boys Ram, Sumit, Sunil, Rahul, Raj, Aman and Amit are sitting around a circular table facing towards the centre (not necessarily in the same order). Raj is second to the right of Aman. Sunil is third to the left of Aman. Ram is not the immediate neighbour of Aman. Amit is second to the right of Ram. Rahul is not the immediate neighbour of Amit. Who is third to the left of Sumit?

- Ans**
- 1. Rahul
 - 2. Raj
 - 3. Sunil
 - 4. Ram

Question Type : **MCQ**
Question ID : **264330138857**
Option 1 ID : **264330544035**
Option 2 ID : **264330544036**
Option 3 ID : **264330544038**
Option 4 ID : **264330544037**
Status : **Answered**
Chosen Option : **4**

Q.3 A series is given with one term missing. Select the correct alternative from the given ones that will complete the series.
LAGB, NDIE, PGKH, RJMK, ?

- Ans**
- 1. TMON
 - 2. TMOM
 - 3. TMNO
 - 4. TNON

Question Type : **MCQ**
Question ID : **264330138850**
Option 1 ID : **264330544007**
Option 2 ID : **264330544009**
Option 3 ID : **264330544010**
Option 4 ID : **264330544008**
Status : **Answered**
Chosen Option : **1**

Q.4 In a certain code language, 'He is my nephew' is coded as 'Co Pv Zs Mn', 'That is my car' is coded as 'Zs Pt Pv Ga', 'He is your uncle' is coded as 'Co Pv Ex Yz'. What is the code for 'nephew' in this code language?

- Ans**
- 1. Co
 - 2. Mn
 - 3. Zs
 - 4. Pv

Question Type : **MCQ**
Question ID : **264330133491**
Option 1 ID : **264330522996**
Option 2 ID : **264330522998**
Option 3 ID : **264330522995**
Option 4 ID : **264330522997**
Status : **Answered**
Chosen Option : **2**

Q.5 In the following question below are given some statements followed by some conclusions based on those statements. Taking the given statements to be true even if they seem to be at variance from commonly known facts. Read all the conclusions and then decide which of the given conclusion logically follows the given statements.

Statements:

I. All Z are Y.

II. Some Y are B.

Conclusion:

I. Some B are not Z.

II. Some Y are not Z.

III. Some Z are Y.

- Ans**
- 1. Both conclusions II and III follows
 - 2. Both conclusions I and III follows
 - 3. Only conclusion III follows
 - 4. All conclusion follows

Question Type : **MCQ**

Question ID : **264330138861**

Option 1 ID : **264330544052**

Option 2 ID : **264330544053**

Option 3 ID : **264330544051**

Option 4 ID : **264330544054**

Status : **Answered**

Chosen Option : **3**

Q.6 Select the option that is related to the fifth term in the same way as the second term is related to the first term and fourth term is related to third term.

PRAY : UWFD :: MONK : RTSP :: FAIT : ?

- Ans**
- 1. KEMY
 - 2. KFNY
 - 3. KENY
 - 4. KFMY

Question Type : **MCQ**

Question ID : **264330138852**

Option 1 ID : **264330544017**

Option 2 ID : **264330544015**

Option 3 ID : **264330544016**

Option 4 ID : **264330544018**

Status : **Answered**

Chosen Option : **2**

Q.7 Speed of five cars C1, C2, C3, C4 and C5 are compared. Speed of C1 is more than only one car. Speed of C5 is more than four cars. Speed of C4 is more than C1 but less than C3 and C5. Speed of how many cars is less than the speed of C3?

- Ans**
- 1. 0
 - 2. 1
 - 3. 3
 - 4. 2

Question Type : **MCQ**

Question ID : **264330138859**

Option 1 ID : **264330544046**

Option 2 ID : **264330544045**

Option 3 ID : **264330544044**

Option 4 ID : **264330544043**

Status : **Answered**

Chosen Option : **3**

Q.8 In a certain code language, 'ACCENT' is coded as 'CCATNE'. What is the code for 'VENDOR' in that code language?

- Ans**
- 1. VENROD
 - 2. NVEDOR
 - 3. NEVROD
 - 4. NEVORD

Question Type : **MCQ**
Question ID : **264330138607**
Option 1 ID : **264330543037**
Option 2 ID : **264330543036**
Option 3 ID : **264330543038**
Option 4 ID : **264330543035**
Status : **Answered**
Chosen Option : **3**

Q.9 By Interchanging the given two numbers which of the following equation will be correct?

I and 6

I. $7 - 5 + 1 \times 3 \div 6 = 20$

II. $1 \times 7 + 6 - 4 \div 2 = 40$

- Ans**
- 1. Only I
 - 2. Neither I nor II
 - 3. Both I and II
 - 4. Only II

Question Type : **MCQ**
Question ID : **264330138578**
Option 1 ID : **264330542919**
Option 2 ID : **264330542922**
Option 3 ID : **264330542921**
Option 4 ID : **264330542920**
Status : **Answered**
Chosen Option : **1**

Q.10 Select the option in which the numbers shares the same relationship in set as that shared by the numbers in the given set.

(NOTE: Operations should be performed on the whole numbers, without breaking down the numbers into its constituent digits. E.g. 13 – Operations on 13 such as adding /subtracting /multiplying etc. to 13 can be performed. Breaking down 13 into 1 and 3 and then performing mathematical operations on 1 and 3 is not allowed)

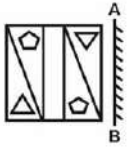
(8, 27, 125)

(64, 1331, 1728)

- Ans**
- 1. (289, 212, 196)
 - 2. (200, 215, 256)
 - 3. (125, 172, 144)
 - 4. (216, 343, 512)

Question Type : **MCQ**
Question ID : **264330138865**
Option 1 ID : **264330544069**
Option 2 ID : **264330544068**
Option 3 ID : **264330544070**
Option 4 ID : **264330544067**
Status : **Answered**
Chosen Option : **4**

Q.11 If a mirror is placed on the line AB, then out of the option figures which figure will be the right image of the question figure?

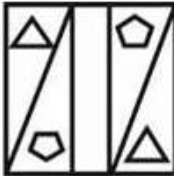


Ans

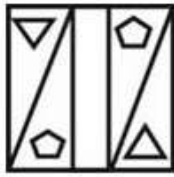
✗ 1.



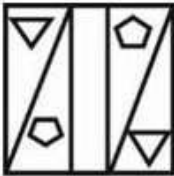
✗ 2.



✓ 3.



✗ 4.



Question Type : MCQ

Question ID : 264330137128

Option 1 ID : 264330537158

Option 2 ID : 264330537156

Option 3 ID : 264330537155

Option 4 ID : 264330537157

Status : Answered

Chosen Option : 3

Q.12 Words given on the left side of (::) are related with each other by some Logic/Rule/Relation. Select the missing word/word pair on the right side of (::) from the given alternatives based on the same Logic/Rule/Relation.

Electric Current : Ampere :: ?

✗ 1. Temperature : Watt

✗ 2. Joule : Work

✗ 3. Resistance : Seconds

✓ 4. Force : Newton

Question Type : MCQ

Question ID : 264330138853

Option 1 ID : 264330544022

Option 2 ID : 264330544019

Option 3 ID : 264330544020

Option 4 ID : 264330544021

Status : Answered

Chosen Option : 4

Q.13 In the following question, select the missing number of the given series.

342, 365, 388,?, 434, 457

Ans 1. 430

2. 411

3. 425

4. 435

Question Type : MCQ

Question ID : 264330138531

Option 1 ID : 264330542733

Option 2 ID : 264330542731

Option 3 ID : 264330542732

Option 4 ID : 264330542734

Status : Answered

Chosen Option : 2

Q.14 In a certain code language, 'APPLE' is written as '25' and 'JUNIOR' is written as '36'. How will 'PACKAGE' be written in that language?

Ans 1. 81

2. 36

3. 49

4. 64

Question Type : MCQ

Question ID : 264330137347

Option 1 ID : 264330538018

Option 2 ID : 264330538017

Option 3 ID : 264330538015

Option 4 ID : 264330538016

Status : Answered

Chosen Option : 3

Q.15 By Interchanging which two signs the equation will be correct?

$15 + 5 \div 2 - 9 \times 3 = 22$

Ans 1. + and -

2. \times and \div

3. \times and -

4. \div and +

Question Type : MCQ

Question ID : 264330138866

Option 1 ID : 264330544072

Option 2 ID : 264330544071

Option 3 ID : 264330544073

Option 4 ID : 264330544074

Status : Answered

Chosen Option : 2

Q.16 Select the option that is related to the fifth number in the same way as the second number is related to the first number and fourth number is related to third number.

7 : 36 :: 16 : 225 :: 21 : ?

- Ans**
- 1. 400
 - 2. 385
 - 3. 441
 - 4. 395

Question Type : **MCQ**

Question ID : **264330138533**

Option 1 ID : **264330542741**

Option 2 ID : **264330542739**

Option 3 ID : **264330542740**

Option 4 ID : **264330542742**

Status : **Answered**

Chosen Option : 1

Q.17 In the following question below are given some statements followed by some conclusions based on those statements. Taking the given statements to be true even if they seem to be at variance from commonly known facts. Read all the conclusions and then decide which of the given conclusion logically follows the given statements.

Statements:

I. All H are G.

II. Some G are I.

Conclusion:

I. No I are H.

II. All I are G.

- Ans**
- 1. Only conclusion II follows
 - 2. Both conclusions I and II follows
 - 3. Only conclusion I follows
 - 4. Neither conclusion follows

Question Type : **MCQ**

Question ID : **264330138860**

Option 1 ID : **264330544048**

Option 2 ID : **264330544049**

Option 3 ID : **264330544047**

Option 4 ID : **264330544050**

Status : **Answered**

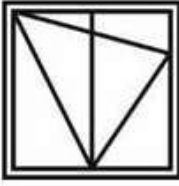
Chosen Option : 4

Q.18 Select the option figure in which the given figure is embedded. (rotation is NOT allowed)



Ans

✗ 1.



✓ 2.



✗ 3.



✗ 4.



Question Type : **MCQ**

Question ID : **264330137127**

Option 1 ID : **264330537152**

Option 2 ID : **264330537154**

Option 3 ID : **264330537153**

Option 4 ID : **264330537151**

Status : **Answered**

Chosen Option : **2**

Q.19 Seven boys J, K, L, M, N, P and Q are sitting around a circular table facing towards the centre (not necessarily in the same order). P is second to the right of Q. M is the immediate neighbour of both J and Q. L is not the immediate neighbour of Q. N is second to the right of P. Who is to the immediate left of L?

Ans ✗ 1. M

✓ 2. P

✗ 3. J

✗ 4. N

Question Type : **MCQ**

Question ID : **264330138858**

Option 1 ID : **264330544042**

Option 2 ID : **264330544039**

Option 3 ID : **264330544041**

Option 4 ID : **264330544040**

Status : **Answered**

Chosen Option : **2**

Q.20 In the following question, select the missing number of the given series.

108, 129, 104, ?, 100, 137, 96

- Ans
- 1. 138
 - 2. 135
 - 3. 133
 - 4. 140

Question Type : MCQ
Question ID : 264330138863
Option 1 ID : 264330544061
Option 2 ID : 264330544060
Option 3 ID : 264330544059
Option 4 ID : 264330544062
Status : Answered
Chosen Option : 3

Section : General Awareness

Q.1 Twenty five percent of the land revenue collected by Marathas in the Deccan was called _____.

- Ans
- 1. Bhoga
 - 2. Sardeshmukhi
 - 3. Chauth
 - 4. Bhaga

Question Type : MCQ
Question ID : 264330138318
Option 1 ID : 264330541880
Option 2 ID : 264330541879
Option 3 ID : 264330541881
Option 4 ID : 264330541882
Status : Answered
Chosen Option : 2

Q.2 'The Race of My Life' is an autobiography of famous Indian athlete _____.

- Ans
- 1. Milkha Singh
 - 2. Yuvraj Singh
 - 3. Sania Mirza
 - 4. Kapil Dev

Question Type : MCQ
Question ID : 264330133973
Option 1 ID : 264330524916
Option 2 ID : 264330524917
Option 3 ID : 264330524918
Option 4 ID : 264330524915
Status : Answered
Chosen Option : 1

Q.3 Fungi can grow on which of the following items?

- I. Bread
- II. Pickles
- III. Leather
- IV. Clothes

Select the correct option.

- Ans
- 1. I and III
 - 2. I and II
 - 3. I, II, III and IV
 - 4. I, II and III

Question Type : MCQ
Question ID : 264330138934
Option 1 ID : 264330544344
Option 2 ID : 264330544343
Option 3 ID : 264330544346
Option 4 ID : 264330544345
Status : Answered
Chosen Option : 3

Q.4 In August 2022, Prime Minister of India inaugurated Homi Bhabha Cancer Hospital in _____.

- Ans
- 1. Mohali
 - 2. Chennai
 - 3. Pune
 - 4. New Delhi

Question Type : MCQ
Question ID : 264330138930
Option 1 ID : 264330544327
Option 2 ID : 264330544329
Option 3 ID : 264330544328
Option 4 ID : 264330544330
Status : Answered
Chosen Option : 3

Q.5 Which among the following is an agricultural festival of Arunachal Pradesh and celebrated by the Galo tribe?

- Ans**
- 1. Losar
 - 2. Ugadi
 - 3. Karma
 - 4. Mopin

Question Type : **MCQ**
Question ID : **264330137039**
Option 1 ID : **264330536801**
Option 2 ID : **264330536800**
Option 3 ID : **264330536802**
Option 4 ID : **264330536799**
Status : **Answered**
Chosen Option : 1

Q.6 The Xinjiang region, which was seen in the news due to the collapse of a gold mine, is located in which country?

- Ans**
- 1. South Korea
 - 2. North Korea
 - 3. Japan
 - 4. China

Question Type : **MCQ**
Question ID : **264330138929**
Option 1 ID : **264330544323**
Option 2 ID : **264330544324**
Option 3 ID : **264330544326**
Option 4 ID : **264330544325**
Status : **Answered**
Chosen Option : 4

Q.7 Gair dance is performed by the _____ community of Rajasthan.

- Ans**
- 1. Bhil
 - 2. Gond
 - 3. Jat
 - 4. Gujjar

Question Type : **MCQ**
Question ID : **264330138921**
Option 1 ID : **264330544293**
Option 2 ID : **264330544291**
Option 3 ID : **264330544294**
Option 4 ID : **264330544292**
Status : **Answered**
Chosen Option : 1

Q.8 ऐसे अपराध, जिनके लिए पुलिस न्यायालय के आदेश के बिना किसी व्यक्ति को गिरफ्तार कर सकती है, उसे _____ कहते हैं।

- Ans
- 1. संज्ञेय अपराध (Cognizable offences)
 - 2. नजरबंदी अपराध (Detention offences)
 - 3. असंज्ञेय अपराध (Non-Cognizable offences)
 - 4. क्रॉस अपराध (Cross offences)

Question Type : MCQ
Question ID : 264330138635
Option 1 ID : 264330543147
Option 2 ID : 264330543150
Option 3 ID : 264330543148
Option 4 ID : 264330543149
Status : Answered
Chosen Option : 2

Q.9 "Eskimos" are associated with which geographical region?

- Ans
- 1. Arid Region
 - 2. Polar Region
 - 3. Savanna Grassland
 - 4. Tropical Rainforest Region

Question Type : MCQ
Question ID : 264330138941
Option 1 ID : 264330544372
Option 2 ID : 264330544374
Option 3 ID : 264330544373
Option 4 ID : 264330544371
Status : Answered
Chosen Option : 2

Q.10 According to the Ashokan Inscription which of the following was NOT a provincial centre in Magadha Empire?

- Ans
- 1. Tosali
 - 2. Ujjayini
 - 3. Taxila
 - 4. Indraprastha

Question Type : MCQ
Question ID : 264330137049
Option 1 ID : 264330536841
Option 2 ID : 264330536840
Option 3 ID : 264330536839
Option 4 ID : 264330536842
Status : Answered
Chosen Option : 4

Q.11 Ilyas Khan was born in Lucknow to a family of musicians. He was famous for playing _____.

- Ans
- 1. Tabla
 - 2. Sitar
 - 3. Veena
 - 4. Mridangam

Question Type : MCQ
Question ID : 264330138927
Option 1 ID : 264330544318
Option 2 ID : 264330544315
Option 3 ID : 264330544316
Option 4 ID : 264330544317
Status : Answered
Chosen Option : 1

Q.12 "Magnus Carlsen" is associated with which of the following games?

- Ans
- 1. Boxing
 - 2. Golf
 - 3. Chess
 - 4. Table Tennis

Question Type : MCQ
Question ID : 264330138300
Option 1 ID : 264330541810
Option 2 ID : 264330541809
Option 3 ID : 264330541808
Option 4 ID : 264330541807
Status : Answered
Chosen Option : 3

Q.13 According to the World Bank classification 2020-2021, India belongs to the category of _____ .

- Ans
- 1. upper-middle income country
 - 2. Low-income country
 - 3. lower-middle income country
 - 4. high-income country

Question Type : MCQ
Question ID : 264330134068
Option 1 ID : 264330525295
Option 2 ID : 264330525298
Option 3 ID : 264330525296
Option 4 ID : 264330525297
Status : Answered
Chosen Option : 1

Q.14 Which country hosted the 1982 edition of the Asian Games?

- Ans 1. India
 2. China
 3. Qatar
 4. Pakistan

Question Type : MCQ
Question ID : 264330138924
Option 1 ID : 264330544305
Option 2 ID : 264330544303
Option 3 ID : 264330544306
Option 4 ID : 264330544304
Status : Answered
Chosen Option : 1

Q.15 In the 18th century, the development of cotton industries in Britain resulted in _____.

- Ans 1. Increase in demand of Indian textile in Britain
 2. Decline of textiles production in India
 3. Increase in demand of Indian textile in India
 4. Decline of British textiles industries in India

Question Type : MCQ
Question ID : 264330138647
Option 1 ID : 264330543195
Option 2 ID : 264330543198
Option 3 ID : 264330543196
Option 4 ID : 264330543197
Status : Answered
Chosen Option : 2

Q.16 The normal temperature of the human body is _____.

- Ans 1. 31° C
 2. 34° C
 3. 32° C
 4. 37° C

Question Type : MCQ
Question ID : 264330138312
Option 1 ID : 264330541855
Option 2 ID : 264330541857
Option 3 ID : 264330541856
Option 4 ID : 264330541858
Status : Answered
Chosen Option : 4

Q.17 How many biosphere reserves are there in India?

- Ans 1. Sixteen
 2. Eighteen
 3. Nineteen
 4. Seventeen

Question Type : **MCQ**
Question ID : **264330138939**
Option 1 ID : **264330544363**
Option 2 ID : **264330544365**
Option 3 ID : **264330544366**
Option 4 ID : **264330544364**
Status : **Answered**
Chosen Option : **2**

Q.18 The Temple at Khajuraho were built during which dynasty?

- Ans 1. Maurya dynasty
 2. Chandella dynasty
 3. Nanda dynasty
 4. Vijayanagara dynasty

Question Type : **MCQ**
Question ID : **264330138626**
Option 1 ID : **264330543111**
Option 2 ID : **264330543113**
Option 3 ID : **264330543112**
Option 4 ID : **264330543114**
Status : **Answered**
Chosen Option : **2**

Q.19 As per Budget 2023-24, how much comes from corporation tax for every 1 Re receipt of the government?

- Ans 1. 4 paisa
 2. 15 paisa
 3. 17 paisa
 4. 7 paisa

Question Type : **MCQ**
Question ID : **264330133980**
Option 1 ID : **264330524944**
Option 2 ID : **264330524943**
Option 3 ID : **264330524946**
Option 4 ID : **264330524945**
Status : **Answered**
Chosen Option : **2**

Q.20 In which type of farming, the land is used for growing food and fodder crops and rearing livestock?

- Ans**
- 1. Dairy farming
 - 2. Plantation farming
 - 3. Mixed farming
 - 4. Commercial farming

Question Type : **MCQ**
Question ID : **264330133965**
Option 1 ID : **264330524883**
Option 2 ID : **264330524886**
Option 3 ID : **264330524885**
Option 4 ID : **264330524884**
Status : **Answered**
Chosen Option : **3**

Q.21 Which of the following is 'NOT' one of the three major types of rocks?

- Ans**
- 1. Magnetic Rocks
 - 2. Metamorphic Rocks
 - 3. Sedimentary Rocks
 - 4. Igneous Rocks

Question Type : **MCQ**
Question ID : **264330138311**
Option 1 ID : **264330541852**
Option 2 ID : **264330541854**
Option 3 ID : **264330541853**
Option 4 ID : **264330541851**
Status : **Answered**
Chosen Option : **1**

Q.22 Karagam Folk Dance is associated with which state?

- Ans**
- 1. Tamil Nadu
 - 2. Rajasthan
 - 3. Assam
 - 4. Haryana

Question Type : **MCQ**
Question ID : **264330133975**
Option 1 ID : **264330524923**
Option 2 ID : **264330524926**
Option 3 ID : **264330524924**
Option 4 ID : **264330524925**
Status : **Answered**
Chosen Option : **1**

Q.23 The cells having well - organized nucleus with a nuclear membrane are designated as _____.

- Ans**
- 1. Cheek cells
 - 2. autokaryotic cells
 - 3. eukaryotic cells
 - 4. prokaryotic cells

Question Type : **MCQ**
Question ID : **264330138310**
Option 1 ID : **264330541847**
Option 2 ID : **264330541849**
Option 3 ID : **264330541850**
Option 4 ID : **264330541848**
Status : **Answered**
Chosen Option : **3**

Q.24 In the Preamble of the Indian Constitution, _____ assures the dignity of the individual.

- Ans**
- 1. liberty
 - 2. fraternity
 - 3. equality
 - 4. justice

Question Type : **MCQ**
Question ID : **264330138933**
Option 1 ID : **264330544340**
Option 2 ID : **264330544342**
Option 3 ID : **264330544341**
Option 4 ID : **264330544339**
Status : **Answered**
Chosen Option : **3**

Q.25 First session of Indian National congress held in _____.

- Ans**
- 1. Calcutta
 - 2. Bombay
 - 3. Surat
 - 4. Lahore

Question Type : **MCQ**
Question ID : **264330137052**
Option 1 ID : **264330536854**
Option 2 ID : **264330536853**
Option 3 ID : **264330536851**
Option 4 ID : **264330536852**
Status : **Answered**
Chosen Option : **1**

Section : English Language and Comprehension

Q.1 Select the most appropriate option to substitute the bracketed segment in the given sentence. If there is no need to substitute it, select 'no substitution required'.

The unit twitched like a bird (preening it's plumage and becomes motionless).

- Ans**
- 1. preening its plumage and became motionless
 - 2. No substitution required
 - 3. preening it's plumage while becoming motionless
 - 4. to preen it's plumage and becomes motionless

Question Type : **MCQ**
Question ID : **264330135770**
Option 1 ID : **264330531959**
Option 2 ID : **264330531962**
Option 3 ID : **264330531961**
Option 4 ID : **264330531960**
Status : **Answered**
Chosen Option : **1**

Q.2 Choose the sentence with no spelling error.

- Ans**
- 1. Protest is also a saffety valve.
 - 2. Protest is also a safety valvve.
 - 3. Protast is also a safety valve.
 - 4. Protest is also a safety valve.

Question Type : **MCQ**
Question ID : **264330135331**
Option 1 ID : **264330530232**
Option 2 ID : **264330530234**
Option 3 ID : **264330530231**
Option 4 ID : **264330530233**
Status : **Answered**
Chosen Option : **4**

Q.3 Improve the underlined part of the sentence. Choose 'No improvement' as an answer if the sentence is grammatically correct.

That movie is so sad; the ending always makes me bawling.

- Ans**
- 1. makes me bawled
 - 2. No improvement
 - 3. makes me bawl
 - 4. made me bawl

Question Type : **MCQ**
Question ID : **264330136877**
Option 1 ID : **264330536196**
Option 2 ID : **264330536198**
Option 3 ID : **264330536197**
Option 4 ID : **264330536195**
Status : **Answered**
Chosen Option : **3**

Q.4 Select the most appropriate synonym to substitute the bracketed word in the given sentence.
In the twentieth century, many (radical) intellectuals embraced the mass media.

- Ans**
- 1. sabbatical
 - 2. egotistical
 - 3. sceptical
 - 4. fanatical

Question Type : **MCQ**
Question ID : **264330135784**
Option 1 ID : **264330532012**
Option 2 ID : **264330532014**
Option 3 ID : **264330532011**
Option 4 ID : **264330532013**
Status : **Answered**
Chosen Option : **3**

Q.5 Select the most appropriate option to fill in the blank.

Police used _____ evidence to convict a victim who was innocent.

- Ans**
- 1. stunted
 - 2. fabricated
 - 3. hateful
 - 4. authentic

Question Type : **MCQ**
Question ID : **264330136898**
Option 1 ID : **264330536275**
Option 2 ID : **264330536277**
Option 3 ID : **264330536276**
Option 4 ID : **264330536278**
Status : **Answered**
Chosen Option : **2**

Q.6 Find the part of the given sentence that has an error in it. If there is no error, choose 'No error'.
Restoring soil health would help at mitigate the effects of climate change.

- Ans**
- 1. help at mitigate the
 - 2. effects of climate change.
 - 3. Restoring soil health would
 - 4. No error

Question Type : **MCQ**
Question ID : **264330136874**
Option 1 ID : **264330536184**
Option 2 ID : **264330536185**
Option 3 ID : **264330536183**
Option 4 ID : **264330536186**
Status : **Answered**
Chosen Option : **1**

Q.7 Select the most appropriate option to fill in the blank.

Wheat is widely _____ but the output is not large.

- Ans
- 1. gross
 - 2. grilled
 - 3. grown
 - 4. groan

Question Type : MCQ
Question ID : 264330135332
Option 1 ID : 264330530235
Option 2 ID : 264330530236
Option 3 ID : 264330530238
Option 4 ID : 264330530237
Status : Answered
Chosen Option : 3

Q.8 Choose the word that can substitute the given group of words.

The young of a frog

- Ans
- 1. Kitten
 - 2. Pup
 - 3. Tadpole
 - 4. Antelope

Question Type : MCQ
Question ID : 264330136888
Option 1 ID : 264330536237
Option 2 ID : 264330536235
Option 3 ID : 264330536238
Option 4 ID : 264330536236
Status : Answered
Chosen Option : 3

Q.9 Improve the underlined part of the sentence. Choose 'No improvement' as an answer if the sentence is grammatically correct.

It is the most effective means of mass communication.

- Ans
- 1. a most effecting
 - 2. a most effectives
 - 3. the most effectively
 - 4. No improvement

Question Type : MCQ
Question ID : 264330141162
Option 1 ID : 264330552993
Option 2 ID : 264330552991
Option 3 ID : 264330552992
Option 4 ID : 264330552994
Status : Answered
Chosen Option : 4

Q.10 Find the part of the given sentence that has an error in it. If there is no error, choose 'No error'.
Adding aloe vera gel will prevent the hand sanitizer of drying out your skin.

- Ans**
- 1. No error
 - 2. drying out your skin.
 - 3. will prevent the hand sanitizer of
 - 4. Adding aloe vera gel

Question Type : **MCQ**
Question ID : **264330136875**
Option 1 ID : **264330536190**
Option 2 ID : **264330536189**
Option 3 ID : **264330536188**
Option 4 ID : **264330536187**
Status : **Answered**
Chosen Option : **3**

Q.11 Select the most appropriate antonym of the given word.

Viscous

- Ans**
- 1. Grim
 - 2. Brutal
 - 3. Watery
 - 4. Thick

Question Type : **MCQ**
Question ID : **264330136735**
Option 1 ID : **264330535648**
Option 2 ID : **264330535647**
Option 3 ID : **264330535649**
Option 4 ID : **264330535650**
Status : **Answered**
Chosen Option : **3**

Q.12 Select the appropriate synonym for the underlined word.

Make sure that you always challenge yourself.

- Ans**
- 1. Carry
 - 2. Approve
 - 3. Question
 - 4. Place

Question Type : **MCQ**
Question ID : **264330136889**
Option 1 ID : **264330536239**
Option 2 ID : **264330536241**
Option 3 ID : **264330536240**
Option 4 ID : **264330536242**
Status : **Answered**
Chosen Option : **3**

Q.13 Select the most appropriate word for the given group of words.

Tending to associate with others of one's kind

- Ans
- 1. Pedantic
 - 2. Pungent
 - 3. Gregarious
 - 4. Venial

Question Type : MCQ
Question ID : 264330136679
Option 1 ID : 264330535432
Option 2 ID : 264330535434
Option 3 ID : 264330535431
Option 4 ID : 264330535433
Status : Answered
Chosen Option : 3

Q.14 Find the part of the given sentence that has an error in it. If there is no error, choose 'No error'.

In my opinion, you should went for higher studies in London.

- Ans
- 1. No error
 - 2. In my opinion,
 - 3. you should went for
 - 4. higher studies in London.

Question Type : MCQ
Question ID : 264330135257
Option 1 ID : 264330529950
Option 2 ID : 264330529947
Option 3 ID : 264330529948
Option 4 ID : 264330529949
Status : Answered
Chosen Option : 3

Q.15 A sentence has been given with a blank to be filled with an appropriate option. Choose the correct alternative.

The person driving the car _____ control over the wheels and knocked her down.

- Ans
- 1. lose
 - 2. lost
 - 3. losing
 - 4. loose

Question Type : MCQ
Question ID : 264330136879
Option 1 ID : 264330536203
Option 2 ID : 264330536204
Option 3 ID : 264330536206
Option 4 ID : 264330536205
Status : Answered
Chosen Option : 2

Q.16 In the following question, out of the given four alternatives, select the alternative which best expresses the meaning of the Idiom/Phrase.

A blind spot

- Ans**
- 1. A person who is blind
 - 2. A person with no emotional feelings
 - 3. A situation where no progress is made
 - 4.

An area in your range of vision that you cannot see properly

Question Type : **MCQ**
Question ID : **264330136894**
Option 1 ID : **264330536262**
Option 2 ID : **264330536260**
Option 3 ID : **264330536261**
Option 4 ID : **264330536259**
Status : **Answered**
Chosen Option : **3**

Q.17 Fill in the blank with the most appropriate choice.

His intent was to become sole lord and to _____ his tiny principality.

- Ans**
- 1. subsidize
 - 2. aggrandize
 - 3. jeopardize
 - 4. methodize

Question Type : **MCQ**
Question ID : **264330135774**
Option 1 ID : **264330531975**
Option 2 ID : **264330531977**
Option 3 ID : **264330531978**
Option 4 ID : **264330531976**
Status : **Answered**
Chosen Option : **2**

Q.18 Select the appropriate antonym for the underlined word.

The arms and legs lay in a careless way.

- Ans**
- 1. Vigilant
 - 2. Unsafe
 - 3. Forgetful
 - 4. Neglectful

Question Type : **MCQ**
Question ID : **264330136892**
Option 1 ID : **264330536252**
Option 2 ID : **264330536253**
Option 3 ID : **264330536254**
Option 4 ID : **264330536251**
Status : **Answered**
Chosen Option : **1**

Q.19 Choose the incorrectly spelt word.

- Ans 1. Tihgt
 2. Locker
 3. Rift
 4. Stock

Question Type : MCQ

Question ID : 264330136895

Option 1 ID : 264330536266

Option 2 ID : 264330536265

Option 3 ID : 264330536263

Option 4 ID : 264330536264

Status : Answered

Chosen Option : 1

Q.20 Select the most appropriate meaning of the given idiom.

Get down to brass tacks

- Ans 1. To become serious about something
 2. Get fired from the job
 3. Compromise, cooperation between people
 4. To be ready

Question Type : MCQ

Question ID : 264330136685

Option 1 ID : 264330535455

Option 2 ID : 264330535456

Option 3 ID : 264330535457

Option 4 ID : 264330535458

Status : Answered

Chosen Option : 2

Comprehension:

In the following passage some words have been deleted. Fill in the blanks with the help of the alternatives given. Select the most appropriate option for each number.

Salvador Dali (1) _____ a prominent Spanish surrealist painter (2) _____ in Figueres, Catalonia, on 11 May 1904. Dali's father was strict in the education of his children unlike (3) _____ mother. Dali had a brother named Salvador (4) _____ was born nine months before him and died of gastroenteritis. When he was five, Dali was taken to his brother's grave and was told that he was his brother's (5) _____.

SubQuestion No : 21

Q.21 Select the most appropriate option to fill in the blank No. 1.

- Ans**
- 1. was
 - 2. were
 - 3. has
 - 4. is

Question Type : **MCQ**

Question ID : **264330136726**

Option 1 ID : **264330535612**

Option 2 ID : **264330535613**

Option 3 ID : **264330535614**

Option 4 ID : **264330535611**

Status : **Answered**

Chosen Option : **1**

Comprehension:

In the following passage some words have been deleted. Fill in the blanks with the help of the alternatives given. Select the most appropriate option for each number.

Salvador Dali (1) _____ a prominent Spanish surrealist painter (2) _____ in Figueres, Catalonia, on 11 May 1904. Dali's father was strict in the education of his children unlike (3) _____ mother. Dali had a brother named Salvador (4) _____ was born nine months before him and died of gastroenteritis. When he was five, Dali was taken to his brother's grave and was told that he was his brother's (5) _____.

SubQuestion No : 22

Q.22 Select the most appropriate option to fill in the blank No. 2.

- Ans**
- 1. rooted
 - 2. bought
 - 3. brought
 - 4. born

Question Type : **MCQ**

Question ID : **264330136727**

Option 1 ID : **264330535618**

Option 2 ID : **264330535617**

Option 3 ID : **264330535616**

Option 4 ID : **264330535615**

Status : **Answered**

Chosen Option : **4**

Comprehension:

In the following passage some words have been deleted. Fill in the blanks with the help of the alternatives given. Select the most appropriate option for each number.

Salvador Dali (1) _____ a prominent Spanish surrealist painter (2) _____ in Figueres, Catalonia, on 11 May 1904. Dali's father was strict in the education of his children unlike (3) _____ mother. Dali had a brother named Salvador (4) _____ was born nine months before him and died of gastroenteritis. When he was five, Dali was taken to his brother's grave and was told that he was his brother's (5) _____.

SubQuestion No : 23

Q.23 Select the most appropriate option to fill in the blank No. 3.

- Ans**
- 1. their
 - 2. him
 - 3. her
 - 4. his

Question Type : **MCQ**
Question ID : **264330136728**
Option 1 ID : **264330535619**
Option 2 ID : **264330535621**
Option 3 ID : **264330535622**
Option 4 ID : **264330535620**
Status : **Answered**
Chosen Option : **4**

Comprehension:

In the following passage some words have been deleted. Fill in the blanks with the help of the alternatives given. Select the most appropriate option for each number.

Salvador Dali (1) _____ a prominent Spanish surrealist painter (2) _____ in Figueres, Catalonia, on 11 May 1904. Dali's father was strict in the education of his children unlike (3) _____ mother. Dali had a brother named Salvador (4) _____ was born nine months before him and died of gastroenteritis. When he was five, Dali was taken to his brother's grave and was told that he was his brother's (5) _____.

SubQuestion No : 24

Q.24 Select the most appropriate option to fill in the blank No. 4.

- Ans**
- 1. whose
 - 2. who
 - 3. whom
 - 4. that

Question Type : **MCQ**
Question ID : **264330136729**
Option 1 ID : **264330535625**
Option 2 ID : **264330535623**
Option 3 ID : **264330535624**
Option 4 ID : **264330535626**
Status : **Answered**
Chosen Option : **2**

Comprehension:

In the following passage some words have been deleted. Fill in the blanks with the help of the alternatives given. Select the most appropriate option for each number.

Salvador Dali (1) _____ a prominent Spanish surrealist painter (2) _____ in Figueres, Catalonia, on 11 May 1904. Dali's father was strict in the education of his children unlike (3) _____ mother. Dali had a brother named Salvador (4) _____ was born nine months before him and died of gastroenteritis. When he was five, Dali was taken to his brother's grave and was told that he was his brother's (5) _____.

SubQuestion No : 25

Q.25 Select the most appropriate option to fill in the blank No. 5.

- Ans**
- 1. ordination
 - 2. detonation
 - 3. reincarnation
 - 4. stagnation

Question Type : **MCQ**

Question ID : **264330136730**

Option 1 ID : **264330535627**

Option 2 ID : **264330535628**

Option 3 ID : **264330535630**

Option 4 ID : **264330535629**

Status : **Answered**

Chosen Option : **3**