

DATE : 13/09/2020

Test Booklet Code

G1
KANHA

Time : 3 hrs.

Answers & Solutions

for

NEET (UG) - 2020

Max. Marks : 720

Important Instructions :

1. The test is of **3 hours** duration and Test Booklet contains **180** questions. Each question carries **4** marks. For each correct response, the candidate will get **4** marks. For each incorrect response, **one mark** will be deducted from the total scores. The maximum marks are **720**.
2. Use **Blue / Black Ball point Pen only** for writing particulars on this page/markings responses.
3. Rough work is to be done on the space provided for this purpose in the Test Booklet only.
4. On completion of the test, the candidate must handover the Answer Sheet to the Invigilator before leaving the Room / Hall. *The candidates are allowed to take away this Test Booklet with them.*
5. The CODE for this Booklet is **G1**.
6. The candidates should ensure that the Answer Sheet is not folded. Do not make any stray marks on the Answer Sheet. Do not write your Roll No. anywhere else except in the specified space in the Test Booklet/Answer Sheet.
7. Each candidate must show on demand his/her Admission Card to the Invigilator.
8. No candidate, without special permission of the Superintendent or Invigilator, would leave his/her seat.
9. Use of Electronic/Manual Calculator is prohibited.
10. The candidates are governed by all Rules and Regulations of the examination with regard to their conduct in the Examination Hall. All cases of unfair means will be dealt with as per Rules and Regulations of this examination.
11. No part of the Test Booklet and Answer Sheet shall be detached under any circumstances.
12. The candidates will write the Correct Test Booklet Code as given in the Test Booklet / Answer Sheet in the Attendance Sheet.

1. A wire of length L , area of cross section A is hanging from a fixed support. The length of the wire changes to L_1 when mass M is suspended from its free end. The expression for Young's modulus is :

$$(1) \frac{Mg(L_1 - L)}{AL} \quad (2) \frac{MgL}{AL_1}$$

$$(3) \frac{MgL}{A(L_1 - L)} \quad (4) \frac{MgL_1}{AL}$$

Answer (3)

Sol. Stress = $\frac{Mg}{A}$

$$\text{Strain} = \frac{\Delta L}{L} = \frac{L_1 - L}{L}$$

$$\text{Young's modulus} = \frac{\text{Stress}}{\text{Strain}} = \frac{MgL}{A(L_1 - L)}$$

2. A cylinder contains hydrogen gas at pressure of 249 kPa and temperature 27°C.

Its density is : ($R = 8.3 \text{ J mol}^{-1} \text{ K}^{-1}$)

$$(1) 0.2 \text{ kg/m}^3 \quad (2) 0.1 \text{ kg/m}^3$$

$$(3) 0.02 \text{ kg/m}^3 \quad (4) 0.5 \text{ kg/m}^3$$

Answer (1)

Sol. $PM = \rho RT \Rightarrow \rho = \frac{PM}{RT}$

$$P = 249 \times 10^3 \text{ N/m}^2$$

$$M = 2 \times 10^{-3} \text{ kg}$$

$$T = 300 \text{ K}$$

$$\therefore \rho = \frac{(249 \times 10^3)(2 \times 10^{-3})}{8.3 \times 300} = \frac{0.2 \text{ kg}}{\text{m}^3}$$

3. Light with an average flux of 20 W/cm^2 falls on a non-reflecting surface at normal incidence having surface area 20 cm^2 . The energy received by the surface during time span of 1 minute is :

$$(1) 12 \times 10^3 \text{ J}$$

$$(2) 24 \times 10^3 \text{ J}$$

$$(3) 48 \times 10^3 \text{ J}$$

$$(4) 10 \times 10^3 \text{ J}$$

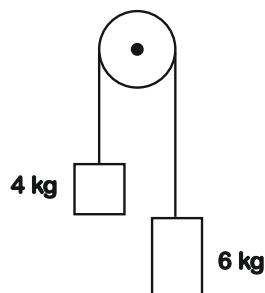
Answer (2)

Sol. Energy received = Intensity \times Area \times Time

$$= 20 \times 20 \times 60$$

$$= 24 \times 10^3 \text{ J}$$

4. Two bodies of mass 4 kg and 6 kg are tied to the ends of a massless string. The string passes over a pulley which is frictionless (see figure). The acceleration of the system in terms of acceleration due to gravity (g) is :



$$(1) g/2$$

$$(2) g/5$$

$$(3) g/10$$

$$(4) g$$

Answer (2)

Sol. $a = \frac{(m_1 - m_2)g}{(m_1 + m_2)}$ where $m_1 > m_2$

$$a = \frac{(6 - 4)g}{6 + 4}$$

$$a = \frac{g}{5}$$

Note : Here no option is given according to acceleration of COM of the system.

5. The mean free path for a gas, with molecular diameter d and number density n can be expressed as :

$$(1) \frac{1}{\sqrt{2} n \pi d^2}$$

$$(2) \frac{1}{\sqrt{2} n^2 \pi d^2}$$

$$(3) \frac{1}{\sqrt{2} n^2 \pi^2 d^2}$$

$$(4) \frac{1}{\sqrt{2} n \pi d}$$

Answer (1)

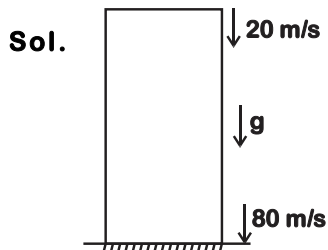
Sol. According to the formula

$$\lambda = \frac{1}{\sqrt{2} n \pi d^2}$$

6. A ball is thrown vertically downward with a velocity of 20 m/s from the top of a tower. It hits the ground after some time with a velocity of 80 m/s. The height of the tower is : ($g = 10 \text{ m/s}^2$)

- (1) 340 m (2) 320 m
(3) 300 m (4) 360 m

Answer (3)



$$v^2 = u^2 + 2gh$$

$$v = 80 \text{ m/s}$$

$$u = 20 \text{ m/s}$$

$$h = \frac{v^2 - u^2}{2g} = \frac{6400 - 400}{20} = 300 \text{ m}$$

7. The color code of a resistance is given below



The values of resistance and tolerance, respectively, are

- (1) 47 k Ω , 10% (2) 4.7 k Ω , 5%
(3) 470 Ω , 5% (4) 470 k Ω , 5%

Answer (3)

Sol. According to colour coding

Yellow	Violet	Brown	Gold
4	7	1	5%

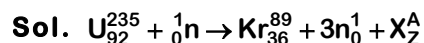
$$\text{So, } R = 47 \times 10^1 \pm 5\%$$

$$R = 470 \pm 5\% \Omega$$

8. When a uranium isotope ${}_{92}^{235}\text{U}$ is bombarded with a neutron, it generates ${}_{36}^{89}\text{Kr}$, three neutrons and :

- (1) ${}_{40}^{91}\text{Zr}$ (2) ${}_{36}^{101}\text{Kr}$
(3) ${}_{36}^{103}\text{Kr}$ (4) ${}_{56}^{144}\text{Ba}$

Answer (4)



$$92 + 0 = 36 + Z$$

$$\Rightarrow Z = 56$$

$$235 + 1 = 89 + 3 + A$$

$$\Rightarrow A = 144$$

So, ${}_{56}^{144}\text{Ba}$ is generated.

9. A spherical conductor of radius 10 cm has a charge of $3.2 \times 10^{-7} \text{ C}$ distributed uniformly. What is the magnitude of electric field at a point 15 cm from the centre of the sphere?

$$\left(\frac{1}{4\pi\epsilon_0} = 9 \times 10^9 \text{ Nm}^2/\text{C}^2 \right)$$

- (1) $1.28 \times 10^5 \text{ N/C}$ (2) $1.28 \times 10^6 \text{ N/C}$
(3) $1.28 \times 10^7 \text{ N/C}$ (4) $1.28 \times 10^4 \text{ N/C}$

Answer (1)

Sol. Electric field outside a conducting sphere

$$E = \frac{1}{4\pi\epsilon_0} \frac{Q}{r^2}$$

$$= \frac{9 \times 10^9 \times 3.2 \times 10^{-7}}{225 \times 10^{-4}}$$

$$= 0.128 \times 10^6$$

$$= 1.28 \times 10^5 \text{ N/C}$$

10. A ray is incident at an angle of incidence i on one surface of a small angle prism (with angle of prism A) and emerges normally from the opposite surface. If the refractive index of the material of the prism is μ , then the angle of incidence is nearly equal to :

(1) $\frac{2A}{\mu}$ (2) μA

(3) $\frac{\mu A}{2}$ (4) $\frac{A}{2\mu}$

Answer (2)

Sol. Light ray emerges normally from another surface, hence e (angle of emergence) = 0

$$r_2 = 0$$

$$r_1 + r_2 = A$$

$$\Rightarrow r_1 = A$$

Applying Snell's law on first surface

$$1 \cdot \sin i = \mu \sin r_1$$

$$\Rightarrow \sin i = \mu \sin A$$

For small angles ($\sin \theta \approx \theta$)

$$\text{hence } i = \mu A$$

11. Two cylinders A and B of equal capacity are connected to each other via a stop cock. A contains an ideal gas at standard temperature and pressure. B is completely evacuated. The entire system is thermally insulated. The stop cock is suddenly opened. The process is :

- (1) adiabatic (2) isochoric
(3) isobaric (4) isothermal

Answer (1)

Sol. Entire system is thermally insulated. So, no heat exchange will take place. Hence, process will be adiabatic.

12. An iron rod of susceptibility 599 is subjected to a magnetising field of 1200 A m^{-1} . The permeability of the material of the rod is :

$$(\mu_0 = 4\pi \times 10^{-7} \text{ T m A}^{-1})$$

- (1) $8.0 \times 10^{-5} \text{ T m A}^{-1}$
(2) $2.4\pi \times 10^{-5} \text{ T m A}^{-1}$
(3) $2.4\pi \times 10^{-7} \text{ T m A}^{-1}$
(4) $2.4\pi \times 10^{-4} \text{ T m A}^{-1}$

Answer (4)

Sol. $\chi_m = 599$

$$\mu_r = 1 + \chi_m = 600$$

$$\mu = \mu_r \mu_0$$

$$\mu = 600 \times 4\pi \times 10^{-7}$$

$$\mu = 2400\pi \times 10^{-7}$$

$$\mu = 2.4\pi \times 10^{-4} \text{ T m A}^{-1}$$

13. The energy equivalent of 0.5 g of a substance is :

- (1) $4.5 \times 10^{13} \text{ J}$ (2) $1.5 \times 10^{13} \text{ J}$
(3) $0.5 \times 10^{13} \text{ J}$ (4) $4.5 \times 10^{16} \text{ J}$

Answer (1)

Sol. From mass-energy equivalence.

$$E = mc^2$$

$$= 0.5 \times 10^{-3} \times (3 \times 10^8)^2$$

$$= 4.5 \times 10^{13} \text{ J}$$

14. A $40 \mu\text{F}$ capacitor is connected to a 200 V , 50 Hz ac supply. The rms value of the current in the circuit is, nearly :

- (1) 2.05 A (2) 2.5 A
(3) 25.1 A (4) 1.7 A

Answer (2)

Sol. $i_{\text{rms}} = c\omega \varepsilon_{\text{rms}}$

$$c = 40 \times 10^{-6} \text{ F}$$

$$\omega = 2\pi f = 100\pi$$

$$\varepsilon_{\text{rms}} = 200 \text{ V}$$

$$\therefore i_{\text{rms}} = 200 \times 40 \times 10^{-6} \times 2\pi \times 50 \\ = 2.5 \text{ A}$$

15. The ratio of contributions made by the electric field and magnetic field components to the intensity of an electromagnetic wave is : (c = speed of electromagnetic waves)

- (1) $1 : 1$ (2) $1 : c$
(3) $1 : c^2$ (4) $c : 1$

Answer (1)

Sol. In an electromagnetic wave, half of the intensity is provided by the electric field and half by the magnetic field

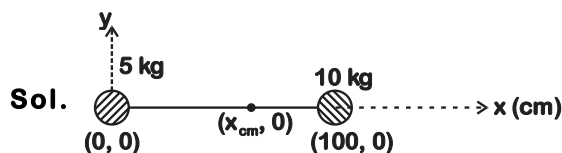
Hence required ratio should be $1 : 1$

16. Two particles of mass 5 kg and 10 kg respectively are attached to the two ends of a rigid rod of length 1 m with negligible mass.

The centre of mass of the system from the 5 kg particle is nearly at a distance of :

- (1) 50 cm (2) 67 cm
(3) 80 cm (4) 33 cm

Answer (2)



$$x_{\text{cm}} = \frac{m_1 x_1 + m_2 x_2}{m_1 + m_2}$$

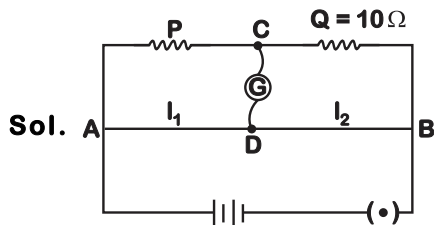
$$= \frac{5 \times 0 + 100 \times 10}{5 + 10} = \frac{200}{3} = 66.66 \text{ cm}$$

$$x_{\text{cm}} \approx 67 \text{ cm}$$

17. A resistance wire connected in the left gap of a metre bridge balances a 10Ω resistance in the right gap at a point which divides the bridge wire in the ratio $3 : 2$. If the length of the resistance wire is 1.5 m , then the length of 1Ω of the resistance wire is :

- (1) $1.0 \times 10^{-1} \text{ m}$ (2) $1.5 \times 10^{-1} \text{ m}$
(3) $1.5 \times 10^{-2} \text{ m}$ (4) $1.0 \times 10^{-2} \text{ m}$

Answer (1)



$$\text{Initially, } \frac{P}{10} = \frac{I_1}{I_2} = \frac{3}{2}$$

$$\Rightarrow P = \frac{30}{2} = 15 \Omega$$

$$\text{Now Resistance, } R = \frac{\rho l}{A}$$

$$\frac{R_1}{R_2} = \frac{l_1}{l_2}$$

$$\Rightarrow \frac{15}{1} = \frac{1.5}{l_2}$$

$$l_2 = 0.1 \text{ m} \\ = 1.0 \times 10^{-1} \text{ m}$$

18. In Young's double slit experiment, if the separation between coherent sources is halved and the distance of the screen from the coherent sources is doubled, then the fringe width becomes :

- (1) half
- (2) four times
- (3) one-fourth
- (4) double

Answer (2)

$$\text{Sol. Fringe width } \beta = \frac{\lambda D}{d}$$

$$\text{Now, } d' = \frac{d}{2} \text{ and } D' = 2D$$

$$\text{So, } \beta' = \frac{\lambda(2D)}{d/2} = \frac{4\lambda D}{d}$$

$$\beta' = 4\beta$$

19. A charged particle having drift velocity of $7.5 \times 10^{-4} \text{ m s}^{-1}$ in an electric field of $3 \times 10^{-10} \text{ Vm}^{-1}$, has a mobility in $\text{m}^2 \text{ V}^{-1} \text{ s}^{-1}$ of :

- (1) 2.5×10^6
- (2) 2.5×10^{-6}
- (3) 2.25×10^{-15}
- (4) 2.25×10^{15}

Answer (1)

$$\text{Sol. Mobility, } \mu = \frac{V_d}{E} \\ = \frac{7.5 \times 10^{-4}}{3 \times 10^{-10}} \\ = 2.5 \times 10^6 \text{ m}^2 \text{ V}^{-1} \text{ s}^{-1}$$

20. Dimensions of stress are :

- (1) $[\text{ML}^2\text{T}^{-2}]$
- (2) $[\text{ML}^0\text{T}^{-2}]$
- (3) $[\text{ML}^{-1} \text{T}^{-2}]$
- (4) $[\text{MLT}^{-2}]$

Answer (3)

$$\text{Sol. Stress} = \frac{\text{Force}}{\text{Area}} \\ = \frac{[\text{MLT}^{-2}]}{[\text{L}^2]} \\ = [\text{ML}^{-1}\text{T}^{-2}]$$

21. For which one of the following, Bohr model is **not** valid ?

- (1) Singly ionised helium atom (He^+)
- (2) Deuteron atom
- (3) Singly ionised neon atom (Ne^+)
- (4) Hydrogen atom

Answer (3)

Sol. Bohr model is only valid for single electron species.

Singly ionised neon atom has more than one electron in orbit. Hence, Bohr model is not valid.

22. A series LCR circuit is connected to an ac voltage source. When L is removed from the circuit, the phase difference between current and voltage is $\frac{\pi}{3}$. If instead C is removed from

the circuit, the phase difference is again $\frac{\pi}{3}$ between current and voltage. The power factor of the circuit is :

- (1) 0.5
- (2) 1.0
- (3) -1.0
- (4) zero

Answer (2)

Sol. When L is removed,

$$\tan \phi = \frac{|X_C|}{R} \Rightarrow \tan \frac{\pi}{3} = \frac{X_C}{R} \dots(i)$$

When C is removed,

$$\tan \phi = \frac{|X_L|}{R} \Rightarrow \tan \frac{\pi}{3} = \frac{X_L}{R} \dots(ii)$$

From (i) and (ii), $X_L = X_C$

Since, $X_L = X_C$, the circuit is in resonance.
 $Z = R$

$$\text{Power factor} = \cos \phi = \frac{R}{Z} = 1$$

23. A capillary tube of radius r is immersed in water and water rises in it to a height h . The mass of the water in the capillary is 5 g. Another capillary tube of radius $2r$ is immersed in water. The mass of water that will rise in this tube is :

- (1) 5.0 g
- (2) 10.0 g
- (3) 20.0 g
- (4) 2.5 g

Answer (2)

Sol. Force of surface tension balances the weight of water in capillary tube.

$$F_s = 2\pi r T \cos \theta = mg$$

Here, T and θ are constant

So, $m \propto r$

$$\text{Hence, } \frac{m_2}{5.0} = \frac{2r}{r}$$

$$\Rightarrow m_2 = 10.0 \text{ g}$$

24. Assume that light of wavelength 600 nm is coming from a star. The limit of resolution of telescope whose objective has a diameter of 2 m is :

- (1) 1.83×10^{-7} rad
- (2) 7.32×10^{-7} rad
- (3) 6.00×10^{-7} rad
- (4) 3.66×10^{-7} rad

Answer (4)

Sol. $\theta_R = 1.22 \frac{\lambda}{d}$; $\lambda = 600 \times 10^{-9} \text{ m}$ $d = 2 \text{ m}$

$$= \frac{1.22 \times 600 \times 10^{-9}}{2}$$

$$\theta = 3.66 \times 10^{-7} \text{ rad}$$

25. The solids which have the negative temperature coefficient of resistance are:

- (1) insulators only
- (2) semiconductors only
- (3) insulators and semiconductors
- (4) metals

Answer (3)

Sol. For metals temperature coefficient of resistance is positive while for insulators and semiconductors, temperature coefficient of resistance is negative.

26. The capacitance of a parallel plate capacitor with air as medium is $6 \mu\text{F}$. With the introduction of a dielectric medium, the capacitance becomes $30 \mu\text{F}$. The permittivity of the medium is :

$$(\epsilon_0 = 8.85 \times 10^{-12} \text{ C}^2 \text{ N}^{-1} \text{ m}^{-2})$$

- (1) $1.77 \times 10^{-12} \text{ C}^2 \text{ N}^{-1} \text{ m}^{-2}$
- (2) $0.44 \times 10^{-10} \text{ C}^2 \text{ N}^{-1} \text{ m}^{-2}$
- (3) $5.00 \text{ C}^2 \text{ N}^{-1} \text{ m}^{-2}$
- (4) $0.44 \times 10^{-13} \text{ C}^2 \text{ N}^{-1} \text{ m}^{-2}$

Answer (2)

Sol. $C = KC_0$

$$K = \frac{C}{C_0} = \frac{30}{6} = 5$$

$$K = \frac{\epsilon}{\epsilon_0}$$

$$\epsilon = K\epsilon_0$$

$$= 5 \times 8.85 \times 10^{-12}$$

$$= 0.44 \times 10^{-10} \text{ C}^2 \text{ N}^{-1} \text{ m}^{-2}$$

27. The energy required to break one bond in DNA is 10^{-20} J . This value in eV is nearly:

- (1) 0.6
- (2) 0.06
- (3) 0.006
- (4) 6

Answer (2)

Sol. $1 \text{ eV} = 1.6 \times 10^{-19} \text{ J}$

$$1 \text{ J} = \frac{1}{1.6 \times 10^{-19}} \text{ eV}$$

$$10^{-20} \text{ J} = \frac{10^{-20}}{1.6 \times 10^{-19}} \text{ eV}$$

$$= 0.06 \text{ eV}$$

28. The increase in the width of the depletion region in a p-n junction diode is due to :
- (1) reverse bias only
 - (2) both forward bias and reverse bias
 - (3) increase in forward current
 - (4) forward bias only

Answer (1)

Sol. Due to reverse biasing, the width of the depletion region increases.

29. The quantities of heat required to raise the temperature of two solid copper spheres of radii r_1 and r_2 ($r_1 = 1.5 r_2$) through 1 K are in the ratio :

- (1) $\frac{9}{4}$
- (2) $\frac{3}{2}$
- (3) $\frac{5}{3}$
- (4) $\frac{27}{8}$

Answer (4)

Sol. $\Delta Q = ms\Delta T$

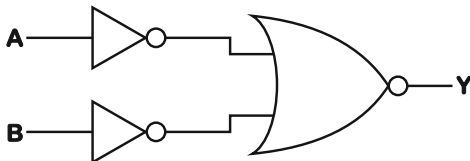
$$\Delta Q = \frac{4}{3}\pi r^3 \rho s \Delta T$$

$$\frac{\Delta Q_1}{\Delta Q_2} = \left(\frac{r_1}{r_2}\right)^3$$

$$= (1.5)^3$$

$$= \frac{27}{8}$$

30. For the logic circuit shown, the truth table is:



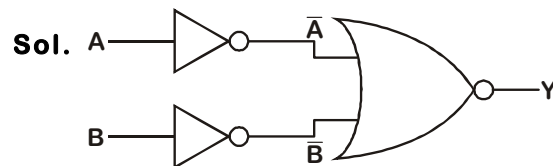
(1) A	B	Y
0	0	0
0	1	1
1	0	1
1	1	1

(2) A	B	Y
0	0	1
0	1	1
1	0	1
1	1	0

(3) A	B	Y
0	0	1
0	1	0
1	0	0
1	1	0

(4) A	B	Y
0	0	0
0	1	0
1	0	0
1	1	1

Answer (4)



$$Y = \overline{\overline{A+B}}$$

$$= \overline{\overline{A \cdot B}}$$

$$= A \cdot B \Rightarrow \text{AND Gate}$$

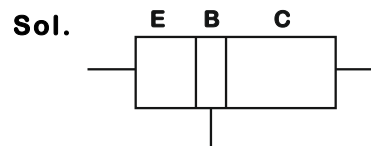
Truth Table

A	B	Y
0	0	0
0	1	0
1	0	0
1	1	1

31. For transistor action, which of the following statements is **correct**?

- (1) Base, emitter and collector regions should have same size.
- (2) Both emitter junction as well as the collector junction are forward biased.
- (3) The base region must be very thin and lightly doped.
- (4) Base, emitter and collector regions should have same doping concentrations.

Answer (3)



For Bi-polar junction transistor

Length Profile is $L_C > L_E > L_B$

and doping profile is $E > C > B$

For transistor action Base-emitter junction is forward biased and Base-collector junction is reversed biased.

32. In a guitar, two strings A and B made of same material are slightly out of tune and produce beats of frequency 6 Hz. When tension in B is slightly decreased, the beat frequency increases to 7 Hz. If the frequency of A is 530 Hz, the original frequency of B will be:

- (1) 524 Hz
- (2) 536 Hz
- (3) 537 Hz
- (4) 523 Hz

Answer (1)

Sol. Difference of f_A and f_B is 6 Hz

If tension decreases, f_B decreases and becomes f'_B .

Now, difference of f_A and $f'_B = 7$ Hz (increases)

So, $f_A > f_B$

$$f_A - f_B = 6 \text{ Hz}$$

$$f_A = 530 \text{ Hz}$$

$$f_B = 524 \text{ Hz (original)}$$

33. A short electric dipole has a dipole moment of $16 \times 10^{-9} \text{ C m}$. The electric potential due to the dipole at a point at a distance of 0.6 m from the centre of the dipole, situated on a line making an angle of 60° with the dipole axis is :

$$\left(\frac{1}{4\pi\epsilon_0} = 9 \times 10^9 \text{ N m}^2/\text{C}^2 \right)$$

- (1) 200 V
- (2) 400 V
- (3) zero
- (4) 50 V

Answer (1)

$$\text{Sol. } V = \frac{kpc \cos \theta}{r^2}$$

$$V = \frac{9 \times 10^9 \times 16 \times 10^{-9} \times \cos 60}{0.36}$$

$$V = 200 \text{ V}$$

34. A body weighs 72 N on the surface of the earth. What is the gravitational force on it, at a height equal to half the radius of the earth?

- (1) 32 N
- (2) 30 N
- (3) 24 N
- (4) 48 N

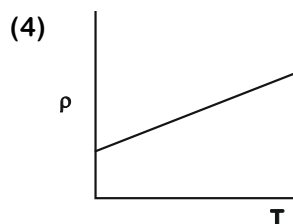
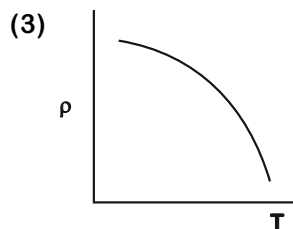
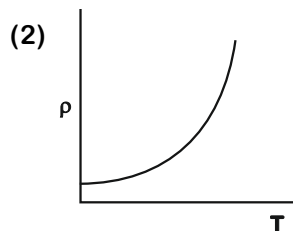
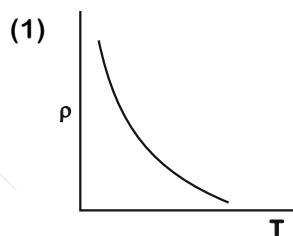
Answer (1)

$$\text{Sol. } mg_h = \frac{mg_0}{\left(1 + \frac{h}{R}\right)^2}$$

$$W = \frac{72}{\left(1 + \frac{R/2}{R}\right)^2}$$

$$W = \frac{72}{(3/2)^2} = \frac{4}{9} \times 72 = 32 \text{ N}$$

35. Which of the following graph represents the variation of resistivity (ρ) with temperature (T) for copper?



Answer (2)

Sol. At temperature much lower than 0°C , graph deviates considerably from a straight line.

Option (2) is correct

36. In a certain region of space with volume 0.2 m^3 , the electric potential is found to be 5 V throughout. The magnitude of electric field in this region is :

- (1) 0.5 N/C
- (2) 1 N/C
- (3) 5 N/C
- (4) zero

Answer (4)

Sol. Since, electric potential is found throughout constant, hence electric field, $E = -\frac{dV}{dr} = 0$

37. The average thermal energy for a mono-atomic gas is : (k_B is Boltzmann constant and T , absolute temperature)

- (1) $\frac{3}{2} k_B T$
- (2) $\frac{5}{2} k_B T$
- (3) $\frac{7}{2} k_B T$
- (4) $\frac{1}{2} k_B T$

Answer (1)

Sol. For monoatomic gases, degree of freedom is 3.

Hence average thermal energy per molecule is

$$KE_{\text{avg}} = \frac{3}{2} k_B T$$

38. Find the torque about the origin when a force of $3\hat{j} \text{ N}$ acts on a particle whose position vector is $2\hat{k} \text{ m}$.

- (1) $6\hat{j} \text{ Nm}$
- (2) $-6\hat{i} \text{ Nm}$
- (3) $6\hat{k} \text{ Nm}$
- (4) $6\hat{i} \text{ Nm}$

Answer (2)

Sol. $\vec{\tau} = \vec{r} \times \vec{F}$

$$\vec{\tau} = 2\hat{k} \times 3\hat{j}$$

$$\vec{\tau} = -6\hat{i} \text{ Nm}$$

39. Light of frequency 1.5 times the threshold frequency is incident on a photosensitive material. What will be the photoelectric current if the frequency is halved and intensity is doubled?

- (1) four times
- (2) one-fourth
- (3) zero
- (4) doubled

Answer (3)

Sol. $v = \frac{3}{2} v_0$

$$v' = \frac{v}{2} = \frac{3}{4} v_0$$

$$\therefore v' < v_0$$

\therefore No photoelectric emission will take place.

40. A long solenoid of 50 cm length having 100 turns carries a current of 2.5 A . The magnetic field at the centre of the solenoid is :

$$(\mu_0 = 4\pi \times 10^{-7} \text{ T m A}^{-1})$$

- (1) $3.14 \times 10^{-4} \text{ T}$
- (2) $6.28 \times 10^{-5} \text{ T}$
- (3) $3.14 \times 10^{-5} \text{ T}$
- (4) $6.28 \times 10^{-4} \text{ T}$

Answer (4)

Sol. Magnetic field at centre of solenoid $= \mu_0 n I$

$$n = \frac{N}{L} = \frac{100}{50 \times 10^{-2}} = 200 \text{ turns/m}$$

$$I = 2.5 \text{ A}$$

On putting the values

$$B = 4\pi \times 10^{-7} \times 200 \times 2.5$$

$$= 6.28 \times 10^{-4} \text{ T}$$

41. The Brewsters angle i_b for an interface should be

- (1) $30^\circ < i_b < 45^\circ$
- (2) $45^\circ < i_b < 90^\circ$
- (3) $i_b = 90^\circ$
- (4) $0^\circ < i_b < 30^\circ$

Answer (2)

Sol. $\mu = \tan i_b$

$$1 < \mu < \infty$$

$$1 < \tan i_b < \infty$$

$$\tan^{-1}(1) < i_b < \tan^{-1}(\infty)$$

$$45^\circ < i_b < 90^\circ$$

42. An electron is accelerated from rest through a potential difference of V volt. If the de Broglie wavelength of the electron is 1.227×10^{-2} nm, the potential difference is :

- (1) 10^2 V
- (2) 10^3 V
- (3) 10^4 V
- (4) 10 V

Answer (3)

Sol. $\lambda = \frac{12.27}{\sqrt{V}} \text{ \AA}$

$$\sqrt{V} = \frac{12.27 \times 10^{-10}}{1.227 \times 10^{-11}} = 10^2$$

$$\therefore V = 10^4 \text{ volts}$$

43. Taking into account of the significant figures, what is the value of $9.99 \text{ m} - 0.0099 \text{ m}$?

- (1) 9.98 m
- (2) 9.980 m
- (3) 9.9 m
- (4) 9.9801 m

Answer (1)

$$9.99$$

Sol. $\frac{-0.0099}{9.9801 \text{ m}}$

In subtraction, answer should be reported to least number of decimal places, so answer should be 9.98 m.

44. A screw gauge has least count of 0.01 mm and there are 50 divisions in its circular scale.

The pitch of the screw gauge is :

- (1) 0.25 mm
- (2) 0.5 mm
- (3) 1.0 mm
- (4) 0.01 mm

Answer (2)

Sol. Least count

$$= \frac{\text{Pitch}}{\text{Number of divisions on circular scale}}$$

$$0.01 \text{ mm} = \frac{\text{Pitch}}{50}$$

$$\text{Pitch} = 0.5 \text{ mm}$$

45. The phase difference between displacement and acceleration of a particle in a simple harmonic motion is :

- (1) $\frac{3\pi}{2}$ rad
- (2) $\frac{\pi}{2}$ rad
- (3) zero
- (4) π rad

Answer (4)

Sol. If $y = A \sin \omega t$

$$\text{then } v = \frac{dy}{dt}$$

$$v = A\omega \cos \omega t$$

$$a = \frac{dv}{dt}$$

$$a = -A\omega^2 \sin(\omega t)$$

$$a = A\omega^2 \sin(\omega t + \pi)$$

So phase difference between displacement and acceleration is π .

46. Match the organism with its use in biotechnology.

- | | |
|--------------------------------------|--|
| (a) <i>Bacillus thuringiensis</i> | (i) Cloning vector |
| (b) <i>Thermus aquaticus</i> | (ii) Construction of first rDNA molecule |
| (c) <i>Agrobacterium tumefaciens</i> | (iii) DNA polymerase |
| (d) <i>Salmonella typhimurium</i> | (iv) Cry proteins |

Select the correct option from the following:

- | | | | |
|-----------|-------|-------|------|
| (a) | (b) | (c) | (d) |
| (1) (iv) | (iii) | (i) | (ii) |
| (2) (iii) | (ii) | (iv) | (i) |
| (3) (iii) | (iv) | (i) | (ii) |
| (4) (ii) | (iv) | (iii) | (i) |

Answer (1)

Sol. (a) *Bacillus thuringiensis* is a source of Cry-proteins.

(b) *Thermus aquaticus* is a source of thermostable DNA polymerase (Taq polymerase) used in PCR.

(c) *Agrobacterium tumefaciens* is a cloning vector.

(d) The construction of 1st recombinant DNA molecule was performed using native plasmid of *Salmonella typhimurium*.

47. Match the following

- | | |
|-------------------------------------|---------------|
| (a) Inhibitor of catalytic activity | (i) Ricin |
| (b) Possess peptide bonds | (ii) Malonate |
| (c) Cell wall material in fungi | (iii) Chitin |
| (d) Secondary metabolite | (iv) Collagen |

Choose the correct option from the following

- | | | | |
|-----------|-------|-------|------|
| (a) | (b) | (c) | (d) |
| (1) (iii) | (i) | (iv) | (ii) |
| (2) (iii) | (iv) | (i) | (ii) |
| (3) (ii) | (iii) | (i) | (iv) |
| (4) (ii) | (iv) | (iii) | (i) |

Answer (4)

Sol. Option (4) is the correct answer because Malonate is the competitive inhibitor of catalytic activity of succinic dehydrogenase, so (a) matches with (ii) in column II.

Collagen is proteinaceous in nature and possesses peptide bonds, so (b) matches with (iv) in column II.

Chitin is a homopolymer present in the cell wall of fungi and exoskeleton of arthropods, so, (c) matches with (iii) in column II.

Abrin and Ricin are toxins, secondary metabolites, so (d) in column I matches with (i) in column II.

48. The plant parts which consist of two generations - one within the other

- (a) Pollen grains inside the anther
 (b) Germinated pollen grain with two male gametes
 (c) Seed inside the fruit
 (d) Embryo sac inside the ovule

- (1) (a), (b) and (c) (2) (c) and (d)
 (3) (a) and (d) (4) (a) only

Answer (3)

Sol. The plant parts which consist of two generations one within the other are pollen grains inside the anther and embryo sac inside the ovule.

Pollen grain is haploid inside the diploid anther.

Embryo sac is haploid inside the diploid ovule.

49. The oxygenation activity of RuBisCo enzyme in photorespiration leads to the formation of

- (1) 1 molecule of 3-C compound
 (2) 1 molecule of 6-C compound
 (3) 1 molecule of 4-C compound and 1 molecule of 2-C compound
 (4) 2 molecules of 3-C compound

Answer (1)

Sol. In photorespiration, O₂ binds to RubisCo. As a result RuBP instead to being converted to 2 molecules of PGA bind with O₂ to form one molecule each of phosphoglycerate (3 carbon compound) and phosphoglycolate (2 carbon compound).

50. In relation to Gross primary productivity and Net primary productivity of an ecosystem, which one of the following statements is correct?

- (1) Gross primary productivity is always more than net primary productivity
- (2) Gross primary productivity and Net primary productivity are one and same
- (3) There is no relationship between Gross primary productivity and Net primary productivity
- (4) Gross primary productivity is always less than net primary productivity

Answer (1)

Sol. Gross primary productivity of an ecosystem is the rate of production of organic matter during photosynthesis.

Net primary productivity is GPP-respiration

Hence gross primary productivity is always more than NPP

51. The product(s) of reaction catalyzed by nitrogenase in root nodules of leguminous plants is/are

- (1) Nitrate alone
- (2) Ammonia and oxygen
- (3) Ammonia and hydrogen
- (4) Ammonia alone

Answer (3)



52. Identify the incorrect statement.

- (1) Sapwood is involved in conduction of water and minerals from root to leaf
- (2) Sapwood is the innermost secondary xylem and is lighter in colour
- (3) Due to deposition of tannins, resins, oils etc., heart wood is dark in colour
- (4) Heart wood does not conduct water but gives mechanical support

Answer (2)

Sol. **Incorrect statement:** Sapwood is the innermost secondary xylem and is lighter in colour.

Correct statement: Sapwood is outermost secondary xylem.

53. Bt cotton variety that was developed by the introduction of toxin gene of *Bacillus thuringiensis* (Bt) is resistant to

- (1) Fungal diseases
- (2) Plant nematodes
- (3) Insect predators
- (4) Insect pests

Answer (4)

Sol. Bt cotton is resistant to cotton bollworm (Insect pest).

Cry I Ac and *Cry II Ab* genes have been introduced in cotton to protect it from cotton bollworm. This makes Bt cotton as biopesticide.

54. Which of the following pairs is of unicellular algae?

- (1) *Gelidium* and *Gracilaria*
- (2) *Anabaena* and *Volvox*
- (3) *Chlorella* and *Spirulina*
- (4) *Laminaria* and *Sargassum*

Answer (3)

Sol. *Chlorella* and *Spirulina* are unicellular algae.

Gelidium, *Gracilaria*, *Laminaria* and *Sargassum* are multicellular. *Volvox* is colonial.

55. Strobili or cones are found in

- (1) *Pteris*
- (2) *Marchantia*
- (3) *Equisetum*
- (4) *Salvinia*

Answer (3)

Sol. Strobili or cones are found in *Equisetum*.

56. Name the enzyme that facilitates opening of DNA helix during transcription.

- (1) DNA helicase
- (2) DNA polymerase
- (3) RNA polymerase
- (4) DNA ligase

Answer (3)

Sol. RNA polymerase facilitates opening of DNA helix during transcription.

57. Identify the wrong statement with reference to transport of oxygen
- (1) Partial pressure of CO_2 can interfere with O_2 binding with haemoglobin
 - (2) Higher H^+ conc. in alveoli favours the formation of oxyhaemoglobin
 - (3) Low pCO_2 in alveoli favours the formation of oxyhaemoglobin
 - (4) Binding of oxygen with haemoglobin is mainly related to partial pressure of O_2

Answer (2)

Sol. The correct option is (2) because higher H^+ concentration favours the dissociation of oxygen from oxyhaemoglobin in tissues.

In the alveoli, high pO_2 , low pCO_2 , lesser H^+ concentration and lower temperature favour formation of oxyhaemoglobin.

58. Identify the correct statement with regard to G_1 phase (Gap 1) of interphase.
- (1) Reorganisation of all cell components takes place.
 - (2) Cell is metabolically active, grows but does not replicate its DNA.
 - (3) Nuclear Division takes place.
 - (4) DNA synthesis or replication takes place.

Answer (2)

Sol. During G_1 phase the cell is metabolically active and continuously grows but does not replicate its DNA.

DNA synthesis takes place in S phase. Nuclear division occurs during Karyokinesis.

Reorganisation of all cell components takes place in M-Phase.

59. Which of the following statements about inclusion bodies is incorrect?
- (1) These are involved in ingestion of food particles
 - (2) They lie free in the cytoplasm
 - (3) These represent reserve material in cytoplasm
 - (4) They are not bound by any membrane

Answer (1)

Sol. These are not involved in ingestion of food particles

60. Match the following diseases with the causative organism and select the correct option.

Column-I		Column-II	
(a) Typhoid		(i) <i>Wuchereria</i>	
(b) Pneumonia		(ii) <i>Plasmodium</i>	
(c) Filariasis		(iii) <i>Salmonella</i>	
(d) Malaria		(iv) <i>Haemophilus</i>	
(a)	(b)	(c)	(d)
(1) (iii)	(iv)	(i)	(ii)
(2) (ii)	(i)	(iii)	(iv)
(3) (iv)	(i)	(ii)	(iii)
(4) (i)	(iii)	(ii)	(iv)

Answer (1)

Sol. Typhoid fever in humans is caused by pathogenic bacterium *Salmonella typhi*.

Pneumonia is caused by *Streptococcus Pneumoniae* and *Haemophilus influenzae*.

Filariasis or elephantiasis is caused by the filarial worm, *Wuchereria bancrofti* and *Wuchereria malayi*.

Malaria is caused by different species of *Plasmodium*.

61. Meiotic division of the secondary oocyte is completed
- (1) At the time of copulation
 - (2) After zygote formation
 - (3) At the time of fusion of a sperm with an ovum
 - (4) Prior to ovulation

Answer (3)

Sol. Meiotic division of secondary oocyte is completed after the entry of sperm in secondary oocyte which lead to the formation of a large ovum and a tiny IInd polar body.

62. By which method was a new breed 'Hisardale' of sheep formed by using Bikaneri ewes and Marino rams?
- (1) Mutational breeding
 - (2) Cross breeding
 - (3) Inbreeding
 - (4) Out crossing

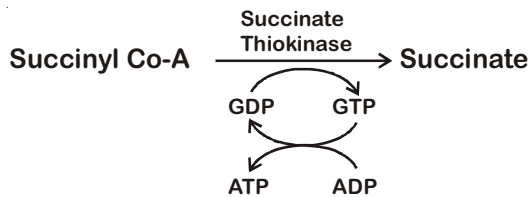
Answer (2)

Sol. Hisardale is a new breed of sheep developed in Punjab by crossing Bikaneri-ewe and Marino rams. In cross-breeding, superior male of one breed are mated with superior females of another breed.

63. The number of substrate level phosphorylations in one turn of citric acid cycle is
- (1) One
 - (2) Two
 - (3) Three
 - (4) Zero

Answer (1)

Sol. One substrate level phosphorylation in one turn of citric acid cycle as per following reaction:



64. Choose the correct pair from the following
- (1) Polymerases - Break the DNA into fragments
 - (2) Nucleases - Separate the two strands of DNA
 - (3) Exonucleases - Make cuts at specific positions within DNA
 - (4) Ligases - Join the two DNA molecules

Answer (4)

Sol. Ligases join the two DNA molecules.

65. The infectious stage of *Plasmodium* that enters the human body is
- (1) Sporozoites
 - (2) Female gametocytes
 - (3) Male gametocytes
 - (4) Trophozoites

Answer (1)

Sol. *Plasmodium* enters the human body as sporozoites (Infectious stage) through the bite of Infected Female *Anopheles* mosquito.

66. Which of the following is not an attribute of a population?
- (1) Natality
 - (2) Mortality
 - (3) Species interaction
 - (4) Sex ratio

Answer (3)

- Sol.** Natality – Population attribute
- Mortality – Population attribute
- Species interaction – Population interaction
- Sex ratio – Population attribute

67. Select the correct events that occur during inspiration.
- (a) Contraction of diaphragm
 - (b) Contraction of external inter-costal muscles
 - (c) Pulmonary volume decreases
 - (d) Intra pulmonary pressure increases
- (1) (c) and (d)
 - (2) (a), (b) and (d)
 - (3) Only (d)
 - (4) (a) and (b)

Answer (4)

Sol. Inspiration is initiated by the contraction of diaphragm, which increases the volume of thoracic chamber in the antero-posterior axis.

The contraction of external intercostal muscles increase the volume of the thoracic chamber in the dorsoventral axis.

68. According to Robert May, the global species diversity is about
- (1) 20 million
 - (2) 50 million
 - (3) 7 million
 - (4) 1.5 million

Answer (3)

Sol. • Robert May estimated global species diversity at about 7 million.

• Although some extreme estimates range from 20 to 50 million.

69. The QRS complex in a standard ECG represents
- (1) Depolarisation of auricles
 - (2) Depolarisation of ventricles
 - (3) Repolarisation of ventricles
 - (4) Repolarisation of auricles

Answer (2)

Sol. QRS complex represents the depolarisation of ventricles.

70. Which of the following statements is not correct?

- (1) The proinsulin has an extra peptide called C-peptide.
- (2) The functional insulin has A and B chains linked together by hydrogen bonds.
- (3) Genetically engineered insulin is produced in *E. Coli*.
- (4) In man insulin is synthesised as a proinsulin

Answer (2)

Sol. The correct option is (2) because functional insulin has A and B chains linked together by disulphide bridges.

71. The transverse section of a plant shows following anatomical features :

- (a) Large number of scattered vascular bundles surrounded by bundle sheath
- (b) Large conspicuous parenchymatous ground tissue
- (c) Vascular bundles conjoint and closed
- (d) Phloem parenchyma absent

Identify the category of plant and its part :

- (1) Monocotyledonous root
- (2) Dicotyledonous stem
- (3) Dicotyledonous root
- (4) Monocotyledonous stem

Answer (4)

Sol. All features are related to monocotyledonous stems

72. Select the correct statement.

- (1) Glucagon is associated with hypoglycemia.
- (2) Insulin acts on pancreatic cells and adipocytes.
- (3) Insulin is associated with hyperglycemia.
- (4) Glucocorticoids stimulate gluconeogenesis.

Answer (4)

Sol. Glucagon is associated with hyperglycemia. Insulin acts on hepatocytes and adipocytes and is associated with hypoglycemia. Glucocorticoids stimulate gluconeogenesis, so increase blood sugar level.

73. Montreal protocol was signed in 1987 for control of

- (1) Emission of ozone depleting substances
- (2) Release of Green House gases

(3) Disposal of e-wastes

(4) Transport of Genetically modified organisms from one country to another

Answer (1)

Sol. Montreal protocol – Signed in 16 Sep, 1987 (Ozone day)

Came into force – 1 Jan, 1989.

It was aimed at stopping the production and import of ODS and reduce their concentration in the atmosphere.

74. Match the following columns and select the correct option.

Column-I		Column-II	
(a) 6-15 pairs of gill slits		(i) <i>Trygon</i>	
(b) Heterocercal caudal fin		(ii) Cyclostomes	
(c) Air Bladder		(iii) Chondrichthyes	
(d) Poison sting		(iv) Osteichthyes	
(a)	(b)	(c)	(d)
(1) (iii)	(iv)	(i)	(ii)
(2) (iv)	(ii)	(iii)	(i)
(3) (i)	(iv)	(iii)	(ii)
(4) (ii)	(iii)	(iv)	(i)

Answer (4)

Sol. Cyclostomes have an elongated body bearing 6-15 pairs of gill slits for respiration, so (a) matches with (ii) in column-II.

Air bladder is present in bony fishes belonging to class Osteichthyes which regulates buoyancy, so (c) matches with (iv) in column-II.

Trygon, a cartilaginous fish, possesses poison sting, so, (d) matches with (i) in column-II.

Heterocercal caudal fin is present in members of class Chondrichthyes, so (b) in column-I matches with (iii) in column-II

75. Identify the wrong statement with regard to Restriction Enzymes.

- (1) They cut the strand of DNA at palindromic sites.
- (2) They are useful in genetic engineering.
- (3) Sticky ends can be joined by using DNA ligases.
- (4) Each restriction enzyme functions by inspecting the length of a DNA sequence.

Answer (3)

Sol. Restriction endonucleases make cuts at specific positions within the DNA.

They function by inspecting the length of a DNA sequence.

Restriction endonuclease bind to the DNA and cut the two strands of double helix at specific points in their sugar-phosphate backbones.

They are used in genetic engineering to form recombinant molecules of DNA.

DNA ligases join the DNA fragments.

76. Match the following with respect to meiosis

- | | |
|----------------|---------------------|
| (a) Zygotene | (i) Terminalization |
| (b) Pachytene | (ii) Chiasmata |
| (c) Diplotene | (iii) Crossing over |
| (d) Diakinesis | (iv) Synapsis |

Select the correct option from the following

- | (a) | (b) | (c) | (d) |
|-----------|-------|-------|-------|
| (1) (iv) | (iii) | (ii) | (i) |
| (2) (i) | (ii) | (iv) | (iii) |
| (3) (ii) | (iv) | (iii) | (i) |
| (4) (iii) | (iv) | (i) | (ii) |

Answer (1)

Sol. Zygotene → Synapsis

Pachytene → Crossing over

Diplotene → Chiasmata formation

Diakinesis → Terminalisation

77. Cuboidal epithelium with brush border of microvilli is found in

- (1) Ducts of salivary gland
- (2) Proximal convoluted tubule of nephron
- (3) Eustachian tube
- (4) Lining of intestine

Answer (2)

Sol. Cuboidal epithelium with brush border of microvilli is found in proximal convoluted tubule of nephron (PCT).

78. Name the plant growth regulator which upon spraying on sugarcane crop, increases the length of stem, thus increasing the yield of sugarcane crop.

- | | |
|-------------------|---------------|
| (1) Gibberellin | (2) Ethylene |
| (3) Abscisic acid | (4) Cytokinin |

Answer (1)

Sol. Spraying sugarcane crop with gibberellins increases the length of the stem, thus increasing the yield by as much as 20 tonnes per acre.

79. Match the following columns and select the correct option.

- | Column-I | Column-II |
|------------------------------------|------------------------------------|
| (a) Bt cotton | (i) Gene therapy |
| (b) Adenosine deaminase deficiency | (ii) Cellular defence |
| (c) RNAi | (iii) Detection of HIV infection |
| (d) PCR | (iv) <i>Bacillus thuringiensis</i> |
-
- | (a) | (b) | (c) | (d) |
|-----------|-------|-------|-------|
| (1) (iii) | (ii) | (i) | (iv) |
| (2) (ii) | (iii) | (iv) | (i) |
| (3) (i) | (ii) | (iii) | (iv) |
| (4) (iv) | (i) | (ii) | (iii) |

Answer (4)

Sol. The correct option is (4) because

- (a) In Bt cotton the specific Bt toxin gene was isolated from *Bacillus thuringiensis*.
- (b) The first clinical gene therapy was given in 1990 to a 4-year old girl with adenosine deaminase (ADA) deficiency.
- (c) RNAi (RNA interference) takes place in all eukaryotic organisms as a method of cellular defense.
- (d) PCR is now routinely used to detect HIV in suspected AIDS patients.

80. The ovary is half inferior in :

- (1) Mustard
- (2) Sunflower
- (3) Plum
- (4) Brinjal

Answer (3)

Sol. The ovary is half inferior in Plum.

81. Which one of the following is the most abundant protein in the animals?

- | | |
|--------------|-----------------|
| (1) Collagen | (2) Lectin |
| (3) Insulin | (4) Haemoglobin |

Answer (1)

Sol. Collagen is the most abundant protein in animal world and RuBisCO is the most abundant protein in the whole of the Biosphere.

82. If the distance between two consecutive base pairs is 0.34 nm and the total number of base pairs of a DNA double helix in a typical mammalian cell is 6.6×10^9 bp, then the length of the DNA is approximately
- (1) 2.5 meters (2) 2.2 meters
(3) 2.7 meters (4) 2.0 meters

Answer (2)

Sol. Length of DNA = $[0.34 \times 10^{-9}]m \times 6.6 \times 10^9$ bp
= 2.2 m

Distance between 2 base pair in DNA helix
= 0.34 nm = 0.34×10^{-9} m

Total number of base pair = 6.6×10^9 bp

83. The first phase of translation is
- (1) Recognition of DNA molecule
(2) Aminoacylation of tRNA
(3) Recognition of an anti-codon
(4) Binding of mRNA to ribosome

Answer (2)

Sol. The first phase of translation involves activation of amino acid in the presence of ATP and linked to their cognate tRNA - a process commonly called as charging of tRNA or aminoacylation of tRNA.

84. Which of the following hormone levels will cause release of ovum (ovulation) from the graffian follicle?
- (1) High concentration of Progesterone
(2) Low concentration of LH
(3) Low concentration of FSH
(4) High concentration of Estrogen

Answer (4)

- Sol.**
- High level of estrogen will send positive feedback to anterior pituitary for release of LH.
 - FSH, LH and estrogen are at peak level during mid of menstrual cycle (28 days cycle).
 - LH surge leads to ovulation.

85. Flippers of Penguins and Dolphins are examples of
- (1) Convergent evolution
(2) Industrial melanism
(3) Natural selection
(4) Adaptive radiation

Answer (1)

Sol. The correct option is (1) because flippers of Penguins and Dolphins are an example of analogous organs. Analogous structures are a result of convergent evolution.

86. Identify the wrong statement with reference to the gene 'I' that controls ABO blood groups.
- (1) A person will have only two of the three alleles.
(2) When I^A and I^B are present together, they express same type of sugar.
(3) Allele 'i' does not produce any sugar.
(4) The gene (I) has three alleles.

Answer (2)

Sol. ABO blood groups are controlled by the gene I. The gene I has three alleles I^A , I^B and i. The alleles I^A and I^B produce a slightly different form of the sugar while allele i does not produce any sugar. Because humans are diploid organisms, each person can possess at the most any two of the three I gene alleles.

87. Select the option including all sexually transmitted diseases.
- (1) Gonorrhoea, Malaria, Genital herpes
(2) AIDS, Malaria, Filaria
(3) Cancer, AIDS, Syphilis
(4) Gonorrhoea, Syphilis, Genital herpes

Answer (4)

Sol. Gonorrhoea, Syphilis, Genital herpes are sexually transmitted diseases.

Gonorrhoea is caused by a bacterium *Neisseria gonorrhoeae*.

Syphilis is caused by a bacterium *Treponema pallidum*.

Genital herpes is caused by a virus Type-II-Herpes simplex virus.

88. Match the following columns and select the correct option.

Column - I	Column - II
(a) Eosinophils	(i) Immune response
(b) Basophils	(ii) Phagocytosis
(c) Neutrophils	(iii) Release histaminase, destructive enzymes
(d) Lymphocytes	(iv) Release granules containing histamine

- | | (a) | (b) | (c) | (d) |
|-----|-------|------|-------|-------|
| (1) | (iv) | (i) | (ii) | (iii) |
| (2) | (i) | (ii) | (iv) | (iii) |
| (3) | (ii) | (i) | (iii) | (iv) |
| (4) | (iii) | (iv) | (ii) | (i) |

Answer (4)

Sol. Option (4) is the correct answer because Eosinophils are associated with allergic reactions and release histaminase, destructive enzymes, so (a) in column I matches with (iii) in column II.

Basophils secrete histamine, serotonin, heparin etc. and are involved in inflammatory reactions, so (b) matches with (iv).

Neutrophils are phagocytic cells; so (c) matches with (ii). Both B and T lymphocytes are responsible for immune responses of the body, so, (d) in column I matches with (i) in column II.

89. Match the trophic levels with their correct species examples in grassland ecosystem.

- | | |
|--------------------------|--------------|
| (a) Fourth trophic level | (i) Crow |
| (b) Second trophic level | (ii) Vulture |
| (c) First trophic level | (iii) Rabbit |
| (d) Third trophic level | (iv) Grass |

Select the correct option

- | | (a) | (b) | (c) | (d) |
|-----|-------|-------|-------|------|
| (1) | (iii) | (ii) | (i) | (iv) |
| (2) | (iv) | (iii) | (ii) | (i) |
| (3) | (i) | (ii) | (iii) | (iv) |
| (4) | (ii) | (iii) | (iv) | (i) |

Answer (4)

Sol. Grassland ecosystem is a terrestrial ecosystem. It includes various trophic levels

First trophic level (T_1) – Grass

Second trophic level (T_2) – Rabbit

Third trophic level (T_3) – Crow

Fourth trophic level (T_4) – Vulture

90. In light reaction, plastoquinone facilitates the transfer of electrons from

- (1) Cyt_b₆f complex to PS-I
- (2) PS-I to NADP⁺
- (3) PS-I to ATP synthase
- (4) PS-II to Cyt_b₆f complex

Answer (4)

Sol. After excitement, e⁻ is passed from PS-II (P₆₈₀) to primary electron acceptor (Pheophytin). From primary e⁻ acceptor, e⁻ is passed to plastoquinone. Plastoquinone (PQ) in turn transfer its e⁻ to Cyt b₆f complex. Therefore plastoquinone facilitates the transfer of electrons from PS-II to Cyt b₆f complex.

91. Embryological support for evolution was disapproved by

- (1) Alfred Wallace
- (2) Charles Darwin
- (3) Oparin
- (4) Karl Ernst von Baer

Answer (4)

Sol. Embryological support for evolution was disapproved by Karl Ernst von Baer, he noted that embryos never pass through the adult stages of other animals during embryonic development.

92. Bilaterally symmetrical and acoelomate animals are exemplified by

- (1) Platyhelminthes
- (2) Aschelminthes
- (3) Annelida
- (4) Ctenophora

Answer (1)

Sol. Platyhelminthes are bilaterally symmetrical, triploblastic and acoelomate animals with organ level of organisation.

93. Which of the following would help in prevention of diuresis?

- (1) Reabsorption of Na⁺ and water from renal tubules due to aldosterone
- (2) Atrial natriuretic factor causes vasoconstriction
- (3) Decrease in secretion of renin by JG cells
- (4) More water reabsorption due to undersecretion of ADH

Answer (1)

Sol. Adrenal cortex secretes mineralocorticoids like aldosterone which increase the reabsorption of Na⁺ and water from renal tubule that prevent diuresis.

94. Match the following columns and select the correct option.

Column-I		Column-II	
(a) <i>Clostridium butylicum</i>		(i) Cyclosporin-A	
(b) <i>Trichoderma polysporum</i>		(ii) Butyric Acid	
(c) <i>Monascus purpureus</i>		(iii) Citric Acid	
(d) <i>Aspergillus niger</i>		(iv) Blood cholesterol lowering agent	

(a)	(b)	(c)	(d)
(1) (ii)	(i)	(iv)	(iii)
(2) (i)	(ii)	(iv)	(iii)
(3) (iv)	(iii)	(ii)	(i)
(4) (iii)	(iv)	(ii)	(i)

Answer (1)

Sol.	Column-I	Column-II
	(a) <i>Clostridium butylicum</i>	(ii) Butyric acid
	(b) <i>Trichoderma polysporum</i>	(i) Cyclosporin-A
	(c) <i>Monascus purpureus</i>	(iv) Blood cholesterol lowering agent
	(d) <i>Aspergillus niger</i>	(iii) Citric acid

95. Some dividing cells exit the cell cycle and enter vegetative inactive stage. This is called quiescent stage (G_0). This process occurs at the end of

- | | |
|-----------------|-------------|
| (1) G_1 phase | (2) S phase |
| (3) G_2 phase | (4) M phase |

Answer (1)

Sol. Some dividing cells exit the cell cycle and enter vegetative inactive stage, called quiescent stage (G_0). This process occurs when cell is unable to proceed G_1 phase.

96. In which of the following techniques, the embryos are transferred to assist those females who cannot conceive?

- | | |
|-------------------|-------------------|
| (1) GIFT and ZIFT | (2) ICSI and ZIFT |
| (3) GIFT and ICSI | (4) ZIFT and IUT |

Answer (4)

Sol. Option (4) is the answer because ART in which embryos are transferred, include ZIFT and IUT i.e. Zygote Intrafallopian Transfer and Intra Uterine Transfer respectively, both are embryo transfer (ET) methods.

Option (1), (2) and (3) are incorrect because in GIFT (Gamete Intrafallopian Transfer), gamete is transferred into the fallopian tube of female who cannot produce ova. ICSI is Intra cytoplasmic sperm injection in which sperm is directly injected into the ovum.

97. Which of the following statements are true for the phylum-Chordata?

- In Urochordata notochord extends from head to tail and it is present throughout their life.
- In Vertebrata notochord is present during the embryonic period only.
- Central nervous system is dorsal and hollow.
- Chordata is divided into 3 subphyla : Hemichordata, Tunicata and Cephalochordata.

- (c) and (a)
- (a) and (b)
- (b) and (c)
- (d) and (c)

Answer (3)

Sol. In vertebrata, notochord is present during embryonic period only as it is replaced by vertebral column.

In chordates, central nervous system is dorsal and hollow.

98. Snow-blindness in Antarctic region is due to
- Inflammation of cornea due to high dose of UV-B radiation
 - High reflection of light from snow
 - Damage to retina caused by infra-red rays
 - Freezing of fluids in the eye by low temperature

Answer (1)

Sol. UV-B radiations damage DNA and mutations may occur.

In human eye, cornea absorbs UV-B radiations, and a high dose of UV-B causes inflammation of cornea called snow blindness, cataract, etc.

99. Match the following columns and select the correct option.

Column-I		Column-II	
(a) Pituitary gland	(i) Grave's disease		
(b) Thyroid gland	(ii) Diabetes mellitus		
(c) Adrenal gland	(iii) Diabetes insipidus		
(d) Pancreas	(iv) Addison's disease		
(a)	(b)	(c)	(d)
(1) (iii)	(ii)	(i)	(iv)
(2) (iii)	(i)	(iv)	(ii)
(3) (ii)	(i)	(iv)	(iii)
(4) (iv)	(iii)	(i)	(ii)

Answer (2)

Sol. Graves' disease is due to excess secretion of thyroid hormones (T_3 & T_4).

Diabetes mellitus is due to hyposecretion of insulin from β -cells of pancreas.

Diabetes insipidus is due to hyporelease of ADH from posterior pituitary.

Addison's disease is due to hyposecretion of hormone from adrenal cortex.

100. Which of the following statements is correct?

- (1) Adenine pairs with thymine through one H-bond
- (2) Adenine pairs with thymine through three H-bonds
- (3) Adenine does not pair with thymine
- (4) Adenine pairs with thymine through two H-bonds

Answer (4)

Sol. Adenine pairs with thymine through two H-bonds *i.e.*, A = T

101. Match the following concerning essential elements and their functions in plants

(a) Iron	(i) Photolysis of water
(b) Zinc	(ii) Pollen germination
(c) Boron	(iii) Required for chlorophyll biosynthesis
(d) Manganese	(iv) IAA biosynthesis

Select the correct option

(a)	(b)	(c)	(d)
(1) (iv)	(iii)	(ii)	(i)
(2) (iii)	(iv)	(ii)	(i)
(3) (iv)	(i)	(ii)	(iii)
(4) (ii)	(i)	(iv)	(iii)

Answer (2)

- Sol. (a) Iron – Essential for the formation of chlorophyll
- (b) Zinc – Needed for synthesis of auxin
- (c) Boron – Have a role in pollen grain germination
- (d) Manganese – Is involved in the splitting of water to liberate O_2 during photosynthesis

102. Which of the following is not an inhibitory substance governing seed dormancy?

- (1) Abscisic acid
- (2) Phenolic acid
- (3) Para-ascorbic acid
- (4) Gibberellic acid

Answer (4)

- Sol. • Gibberellic acid break seed dormancy.
- It activate synthesis of α -amylase which breakdown starch into simple sugar.

103. From his experiments, S.L. Miller produced amino acids by mixing the following in a closed flask

- (1) CH_3 , H_2 , NH_4 and water vapor at $800^\circ C$
- (2) CH_4 , H_2 , NH_3 and water vapor at $600^\circ C$
- (3) CH_3 , H_2 , NH_3 and water vapor at $600^\circ C$
- (4) CH_4 , H_2 , NH_3 and water vapor at $800^\circ C$

Answer (4)

Sol. In 1953, S.L. Miller, an American scientist created electric discharge in a closed flask containing CH_4 , H_2 , NH_3 and water vapor at $800^\circ C$.

104. Experimental verification of the chromosomal theory of inheritance was done by

- (1) Sutton
- (2) Boveri
- (3) Morgan
- (4) Mendel

Answer (3)

Sol. Experimental verification of the chromosomal theory of inheritance was done by Morgan.

Note:

Sutton and Boveri proposed chromosomal theory of inheritance but it was experimentally verified by T.H. Morgan.

105. The body of the ovule is fused within the funicle at

- (1) Micropyle (2) Nucellus
- (3) Chalaza (4) Hilum

Answer (4)

Sol. The attachment point of funicle and body of ovule is known as hilum.

106. Identify the correct statement with reference to human digestive system.

- (1) Serosa is the innermost layer of the alimentary canal
- (2) Ileum is a highly coiled part
- (3) Vermiform appendix arises from duodenum
- (4) Ileum opens into small intestine

Answer (2)

Sol. Option (2) is correct as ileum is a highly coiled tube. Serosa is the outermost layer of the alimentary canal, thus, option (1) is an incorrect statement.

A narrow finger-like tubular projection, the vermiform appendix arises from caecum part of large intestine thus, option (3) is incorrect statement. Ileum opens into the large intestine, thus option (4) is also an incorrect statement.

107. Dissolution of the synaptonemal complex occurs during

- (1) Zygotene (2) Diplotene
- (3) Leptotene (4) Pachytene

Answer (2)

Sol. Dissolution of the synaptonemal complex occurs During Diplotene stage of Prophase-I of Meiosis-I.

108. Floridean starch has structure similar to

- (1) Amylopectin and glycogen
- (2) Mannitol and algin
- (3) Laminarin and cellulose
- (4) Starch and cellulose

Answer (1)

Sol. Floridean starch is stored food material in red algae. Its structure is similar to Amylopectin and Glycogen.

109. The specific palindromic sequence which is recognized by EcoRI is

- (1) 5' - GGAACC - 3'
3' - CCTTGG - 5'
- (2) 5' - CTTAAG - 3'
3' - GAATTC - 5'
- (3) 5' - GGATCC - 3'
3' - CCTAGG - 5'
- (4) 5' - GAATTC - 3'
3' - CTTAAG - 5'

Answer (4)

Sol. The correct option is (4) because the specific palindromic sequence which is recognised by EcoRI is

- 5' - GAATTC - 3'
- 3' - CTTAAG - 5'

110. Select the correct match

- (1) Phenylketonuria - Autosomal dominant trait
- (2) Sickle cell anaemia - Autosomal recessive trait, chromosome-11
- (3) Thalassemia - X linked
- (4) Haemophilia - Y linked

Answer (2)

Sol. Phenylketonuria - Autosomal recessive disorder
Thalassemia - Autosomal recessive disorder
Haemophilia - X linked recessive disorder
Sickle cell anaemia - Autosomal recessive trait, caused due to mutation in gene present on chromosome no. 11

111. Identify the substances having glycosidic bond and peptide bond, respectively in their structure

- (1) Glycerol, trypsin (2) Cellulose, lecithin
- (3) Inulin, insulin (4) Chitin, cholesterol

Answer (3)

Sol. Inulin is a fructan (polysaccharide of fructose). Adjacent fructose units are linked through glycosidic bond.

Insulin is a protein composed of 51 aminoacids. Adjacent aminoacids are attached through peptide bond.

112. The process of growth is maximum during

- (1) Lag phase (2) Senescence
(3) Dormancy (4) Log phase

Answer (4)

Sol. In exponential growth, the initial growth is slow (lag phase) and it increases rapidly thereafter at an exponential rate in log or exponential phase.

113. Match the following columns and select the correct option.

Column-I		Column-II	
(a) Organ of Corti		(i) Connects middle ear and pharynx	
(b) Cochlea		(ii) Coiled part of the labyrinth	
(c) Eustachian tube		(iii) Attached to the oval window	
(d) Stapes		(iv) Located on the basilar membrane	
(a)	(b)	(c)	(d)
(1) (iii)	(i)	(iv)	(ii)
(2) (iv)	(ii)	(i)	(iii)
(3) (i)	(ii)	(iv)	(iii)
(4) (ii)	(iii)	(i)	(iv)

Answer (2)

Sol. • Option (2) is correct because organ of Corti is located on the Basilar membrane, thus (a) in column-I matches with (iv) in column-II.

- The coiled portion of the labyrinth is called cochlea, so (b) matches with (ii) in column II.
- The eustachian tube connects the middle ear cavity with the pharynx, thus (c) matches with (i) in column-II.
- The middle ear contains ossicle called Stapes that is attached to the oval window of the cochlea, so (d) matches with (iii) in column II.

114. The process responsible for facilitating loss of water in liquid form from the tip of grass blades at night and in early morning is

- (1) Root pressure (2) Imbibition
(3) Plasmolysis (4) Transpiration

Answer (1)

Sol. • Root pressure is positive hydrostatic pressure.

- It develops in tracheary element at night and in early morning.

115. Identify the wrong statement with reference to immunity.

- (1) When ready-made antibodies are directly given, it is called "Passive immunity".
(2) Active immunity is quick and gives full response.
(3) Foetus receives some antibodies from mother, it is an example for passive immunity.
(4) When exposed to antigen (living or dead) antibodies are produced in the host's body. It is called "Active immunity".

Answer (2)

Sol. The correct option is (2) because active immunity is slow and takes time to give its full effective response in comparison to passive immunity where pre-formed antibodies are administered.

116. In water hyacinth and water lily, pollination takes place by :

- (1) Water currents only
(2) Wind and water
(3) Insects and water
(4) Insects or wind

Answer (4)

Sol. In majority of aquatic plants, the flowers emerge above the level of water.

These may be pollinated by insects or wind
eg.: Water hyacinth and water lily

117. Which is the important site of formation of glycoproteins and glycolipids in eukaryotic cells?

- (1) Peroxisomes
(2) Golgi bodies
(3) Polysomes
(4) Endoplasmic reticulum

Answer (2)

Sol. Golgi bodies are site of formation of glycoproteins and glycolipids in eukaryotic cells.

118. Which of the following regions of the globe exhibits highest species diversity?

- (1) Madagascar
- (2) Himalayas
- (3) Amazon forests
- (4) Western Ghats of India

Answer (3)

Sol. The largely tropical Amazonian rain forest in South America has the greatest biodiversity on earth.

119. Goblet cells of alimentary canal are modified from

- (1) Columnar epithelial cells
- (2) Chondrocytes
- (3) Compound epithelial cells
- (4) Squamous epithelial cells

Answer (1)

Sol. Goblet cells of alimentary canal are modified from columnar epithelial cells which secrete mucus.

120. Which of the following is correct about viroids?

- (1) They have free RNA without protein coat
- (2) They have DNA with protein coat
- (3) They have free DNA without protein coat
- (4) They have RNA with protein coat

Answer (1)

Sol. Viroids have free RNA without protein coat.

121. Secondary metabolites such as nicotine, strychnine and caffeine are produced by plants for their

- (1) Growth response
- (2) Defence action
- (3) Effect on reproduction
- (4) Nutritive value

Answer (2)

Sol. A wide variety of chemical substances that we extract from plants on a commercial scale (nicotine, caffeine, quinine, strychnine, opium, etc) are produced by them (plants) as defences against grazers and browsers.

122. Match the following columns and select the correct option.

Column-I		Column-II	
(a) Placenta		(i) Androgens	
(b) Zona pellucida		(ii) Human Chorionic Gonadotropin (hCG)	
(c) Bulbo-urethral glands		(iii) Layer of the ovum	
(d) Leydig cells		(iv) Lubrication of the Penis	
(a)	(b)	(c)	(d)
(1) (i)	(iv)	(ii)	(iii)
(2) (iii)	(ii)	(iv)	(i)
(3) (ii)	(iii)	(iv)	(i)
(4) (iv)	(iii)	(i)	(ii)

Answer (3)

Sol. The correct option is (3) because

- (a) Placenta secretes human chorionic gonadotropin (hCG)
- (b) Zona pellucida is a primary egg membrane secreted by the secondary oocyte
- (c) The secretions of bulbourethral glands help in lubrication of the penis
- (d) Leydig cells synthesise and secrete testicular hormones called androgens

123. Ray florets have

- (1) Superior ovary
- (2) Hypogynous ovary
- (3) Half inferior ovary
- (4) Inferior ovary

Answer (4)

Sol. • Ray floret have inferior ovary.

- Epigynous flower are formed in family Asteraceae (e.g., Sunflower)

124. Which of the following is put into Anaerobic sludge digester for further sewage treatment?

- (1) Floating debris
- (2) Effluents of primary treatment
- (3) Activated sludge
- (4) Primary sludge

Answer (3)

Sol. The sediment in settlement tank is called activated sludge.

A small part of the activated sludge is pumped back into aeration tank

Remaining major part of the sludge is pumped into large tank called anaerobic sludge digesters.

125. The enzyme enterokinase helps in conversion of
- (1) trypsinogen into trypsin
 - (2) caseinogen into casein
 - (3) pepsinogen into pepsin
 - (4) protein into polypeptides

Answer (1)

Sol. The correct option is (1) because trypsinogen is activated by an enzyme, enterokinase, secreted by the intestinal mucosa into active trypsin. Trypsinogen is a zymogen from pancreas.

126. Match the following columns and select the correct option.

Column-I		Column-II	
(a) Gregarious, polyphagous pest		(i) <i>Asterias</i>	
(b) Adult with radial symmetry and larva with bilateral symmetry		(ii) Scorpion	
(c) Book lungs		(iii) <i>Ctenoplana</i>	
(d) Bioluminescence		(iv) <i>Locusta</i>	
(a)	(b)	(c)	(d)
(1) (iv)	(i)	(ii)	(iii)
(2) (iii)	(ii)	(i)	(iv)
(3) (ii)	(i)	(iii)	(iv)
(4) (i)	(iii)	(ii)	(iv)

Answer (1)

Sol. (a) *Locusta* is a gregarious pest.

- (b) In Echinoderms, adults are radially symmetrical but larvae are bilaterally symmetrical.
- (c) Scorpions respire through book lungs.
- (d) Bioluminescence is well marked in ctenophores.

127. Presence of which of the following conditions in urine are indicative of Diabetes Mellitus?

- (1) Uremia and Renal Calculi
- (2) Ketonuria and Glycosuria
- (3) Renal calculi and Hyperglycaemia
- (4) Uremia and Ketonuria

Answer (2)

Sol. Presence of Ketone bodies in urine (Ketonuria) and presence of glucose in urine (Glycosuria) are indicative of Diabetes mellitus.

128. Match the following columns and select the correct option.

Column-I		Column-II	
(a) Floating Ribs		(i) Located between second and seventh ribs	
(b) Acromion		(ii) Head of the Humerus	
(c) Scapula		(iii) Clavicle	
(d) Glenoid cavity		(iv) Do not connect with the sternum	
(a)	(b)	(c)	(d)
(1) (i)	(iii)	(ii)	(iv)
(2) (iii)	(ii)	(iv)	(i)
(3) (iv)	(iii)	(i)	(ii)
(4) (ii)	(iv)	(i)	(iii)

Answer (3)

Sol. (a) 11th and 12th pairs of ribs are not connected ventrally and are therefore, called floating ribs.

(b) Acromion is a flat expanded process of spine of scapula. The lateral end of clavicle articulates with acromion process.

(c) Scapula is a flat triangular bone in the dorsal part of the thorax between 2nd and the 7th rib.

(d) Glenoid cavity of scapula articulates with head of the humerus to form the shoulder joint.

129. How many true breeding pea plant varieties did Mendel select as pairs, which were similar except in one character with contrasting traits?

- (1) 2
- (2) 14
- (3) 8
- (4) 4

Answer (2)

Sol. Mendel selected 14 True breeding plant varieties.

130. If the head of cockroach is removed, it may live for few days because

- (1) the cockroach does not have nervous system.
- (2) the head holds a small proportion of a nervous system while the rest is situated along the ventral part of its body.
- (3) the head holds a $\frac{1}{3}$ rd of a nervous system while the rest is situated along the dorsal part of its body.
- (4) the supra-oesophageal ganglia of the cockroach are situated in ventral part of abdomen.

Answer (2)

Sol. The head holds a small proportion of a nervous system while the rest is situated along the ventral part of its body.

131. Which of the following refer to correct example(s) of organisms which have evolved due to changes in environment brought about by anthropogenic action?

- (a) Darwin's Finches of Galapagos islands.
 - (b) Herbicide resistant weeds.
 - (c) Drug resistant eukaryotes.
 - (d) Man-created breeds of domesticated animals like dogs.
- (1) (a) and (c)
 - (2) (b), (c) and (d)
 - (3) Only (d)
 - (4) Only (a)

Answer (2)

Sol. The correct option is (2) because :

- Herbicide resistant weeds, drug resistant eukaryotes and man-created breeds of domesticated animals like dogs are examples of evolution by anthropogenic action.
- Darwin's Finches of Galapagos islands are example of natural selection, adaptive radiation and founder's effect.

132. Identify the basic amino acid from the following.

- (1) Glutamic Acid
- (2) Lysine
- (3) Valine
- (4) Tyrosine

Answer (2)

Sol. Option (2) is the correct answer because lysine is a basic amino acid.

Valine is a neutral amino acid.

Glutamic acid is an acidic amino acid while Tyrosine is an aromatic amino acid.

133. In gel electrophoresis, separated DNA fragments can be visualized with the help of

- (1) Ethidium bromide in UV radiation
- (2) Acetocarmine in UV radiation
- (3) Ethidium bromide in infrared radiation
- (4) Acetocarmine in bright blue light

Answer (1)

Sol. The separated DNA fragments can be visualised only after staining the DNA with Ethidium bromide followed by exposure to UV radiation.

134. The sequence that controls the copy number of the linked DNA in the vector, is termed

- (1) Ori site
- (2) Palindromic sequence
- (3) Recognition site
- (4) Selectable marker

Answer (1)

Sol. The correct option is (1) because *Ori* sequence is responsible for controlling the copy number of the linked DNA in the vector. *Ori* i.e. origin of replication is responsible for initiation of replication.

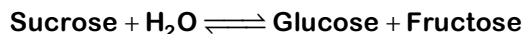
135. The roots that originate from the base of the stem are

- (1) Primary roots
- (2) Prop roots
- (3) Lateral roots
- (4) Fibrous roots

Answer (4)

Sol. The roots that originate from the base of the stem are fibrous roots.

141. Hydrolysis of sucrose is given by the following reaction.



If the equilibrium constant (K_C) is 2×10^{13} at 300 K, the value of $\Delta_r G^\ominus$ at the same temperature will be :

- (1) $8.314 \text{ J mol}^{-1}\text{K}^{-1} \times 300 \text{ K} \times \ln(2 \times 10^{13})$
- (2) $8.314 \text{ J mol}^{-1}\text{K}^{-1} \times 300 \text{ K} \times \ln(3 \times 10^{13})$
- (3) $-8.314 \text{ J mol}^{-1}\text{K}^{-1} \times 300 \text{ K} \times \ln(4 \times 10^{13})$
- (4) $-8.314 \text{ J mol}^{-1}\text{K}^{-1} \times 300 \text{ K} \times \ln(2 \times 10^{13})$

Answer (4)

Sol. $\Delta G = \Delta G^\ominus + RT \ln Q$

At equilibrium $\Delta G = 0$, $Q = K_{eq}$

So $\Delta_r G^\ominus = -RT \ln K_{eq}$

$$\Delta_r G^\ominus = -8.314 \text{ J mol}^{-1} \text{K}^{-1} \times 300 \text{ K} \times \ln(2 \times 10^{13})$$

142. Identify the incorrect match.

Name	IUPAC Official Name
(a) Unnilunium	(i) Mendeleevium
(b) Unniltrium	(ii) Lawrencium
(c) Unnilhexium	(iii) Seaborgium
(d) Unununium	(iv) Darmstadtium
(1) (b), (ii)	(2) (c), (iii)
(3) (d), (iv)	(4) (a), (i)

Answer (3)

Sol. Unununium

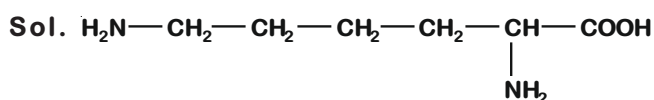
Atomic number = 111

IUPAC official name : Roentgenium

143. Which of the following is a basic amino acid ?

- (1) Alanine
- (2) Tyrosine
- (3) Lysine
- (4) Serine

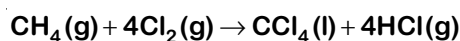
Answer (3)



(Structure of Lysine)

Lysine is a basic amino acid.

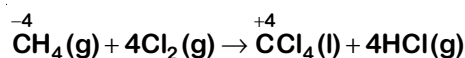
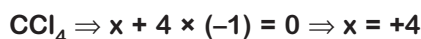
144. What is the change in oxidation number of carbon in the following reaction?



- (1) 0 to + 4
- (2) - 4 to + 4
- (3) 0 to - 4
- (4) + 4 to + 4

Answer (2)

Sol. $\text{CH}_4 \Rightarrow x + 4 \times 1 = 0 \Rightarrow x = -4$



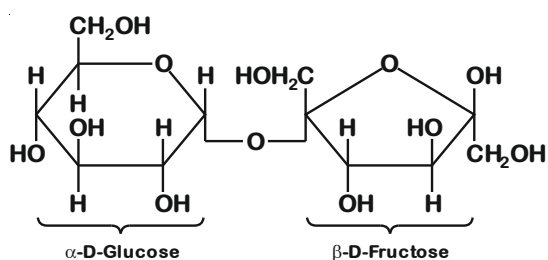
Change in oxidation state of carbon is from -4 to +4

145. Sucrose on hydrolysis gives

- (1) α -D-Glucose + β -D-Glucose
- (2) α -D-Glucose + β -D-Fructose
- (3) α -D-Fructose + β -D-Fructose
- (4) β -D-Glucose + α -D-Fructose

Answer (2)

Sol. Sucrose $\xrightarrow{\text{Hydrolysis}}$ α -D-Glucose + β -D-Fructose



146. The number of Faradays(F) required to produce 20 g of calcium from molten CaCl_2 (Atomic mass of Ca = 40 g mol^{-1}) is

- (1) 2
- (2) 3
- (3) 4
- (4) 1

Answer (4)

Sol. 1 equivalent of any substance is deposited by 1 F of charge.

We have, 20 g calcium

$$\begin{aligned}\text{Number of equivalents} &= \frac{\text{Given mass}}{\text{Equivalent mass}} \\ &= \frac{20}{20} = 1\end{aligned}$$

$$\text{Equivalent mass of Ca} = \frac{40}{2} = 20$$

So, 1 faraday of charge is required.

147. For the reaction, $2\text{Cl}(\text{g}) \longrightarrow \text{Cl}_2(\text{g})$, the correct option is :

- (1) $\Delta_r H > 0$ and $\Delta_r S < 0$
- (2) $\Delta_r H < 0$ and $\Delta_r S > 0$
- (3) $\Delta_r H < 0$ and $\Delta_r S < 0$
- (4) $\Delta_r H > 0$ and $\Delta_r S > 0$

Answer (3)

Sol. Given reaction, $2\text{Cl}(\text{g}) \longrightarrow \text{Cl}_2(\text{g})$

We know that,

$\text{Cl}_2(\text{g}) \longrightarrow 2\text{Cl}(\text{g})$ is endothermic reaction because it requires energy to break bond.

So reverse reaction is exothermic $\Delta_r H < 0$

Also, two gaseous atom combine together to form 1 gaseous molecule.

So, randomness $\Delta_r S < 0$

148. The following metal ion activates many enzymes, participates in the oxidation of glucose to produce ATP and with Na, is responsible for the transmission of nerve signals.

- (1) Copper
- (2) Calcium
- (3) Potassium
- (4) Iron

Answer (3)

Sol. Potassium (K) activates many enzymes participate in oxidation of glucose to produce ATP and helps in the transmission of nerve signal along with Na.

149. Identify the incorrect statement.

- (1) The transition metals and their compounds are known for their catalytic activity due to their ability to adopt multiple oxidation states and to form complexes.
- (2) Interstitial compounds are those that are formed when small atoms like H, C or N are trapped inside the crystal lattices of metals.
- (3) The oxidation states of chromium in CrO_4^{2-} and $\text{Cr}_2\text{O}_7^{2-}$ are not the same.
- (4) Cr^{2+} (d^4) is a stronger reducing agent than Fe^{2+} (d^6) in water.

Answer (3)

Sol. Oxidation state of Cr in CrO_4^{2-} and $\text{Cr}_2\text{O}_7^{2-}$ is +6

150. An increase in the concentration of the reactants of a reaction leads to change in

- (1) heat of reaction
- (2) threshold energy
- (3) collision frequency
- (4) activation energy

Answer (3)

Sol. The number of collisions per second per unit volume of the reaction mixture is known as collision frequency. Therefore with increase in the concentration of reactants collision frequency changes.

151. Reaction between benzaldehyde and acetophenone in presence of dilute NaOH is known as

- (1) Cannizzaro's reaction
- (2) Cross Cannizzaro's reaction
- (3) Cross Aldol condensation
- (4) Aldol condensation

Answer (3)

156. Measuring Zeta potential is useful in determining which property of colloidal solution?

- (1) Solubility
- (2) Stability of the colloidal particles
- (3) Size of the colloidal particles
- (4) Viscosity

Answer (2)

Sol. In colloidal solution, the potential difference between the fixed layer and the diffused layer of opposite charge is known as Zeta potential.

The presence of equal and similar charges on colloidal particles is largely responsible in providing stability to the colloidal solution.

157. The number of protons, neutrons and electrons in ${}_{71}^{175}\text{Lu}$, respectively, are

- (1) 104, 71 and 71
- (2) 71, 71 and 104
- (3) 175, 104 and 71
- (4) 71, 104 and 71

Answer (4)

Sol. ${}_{71}^{175}\text{Lu}$

No. of Protons = 71 = No. of Electrons

No. of Neutrons = Mass no. – No. of Protons
 = 175 – 71
 = 104

158. Identify the correct statements from the following :

- (a) $\text{CO}_2(\text{g})$ is used as refrigerant for ice-cream and frozen food.
- (b) The structure of C_{60} contains twelve six carbon rings and twenty five carbon rings.
- (c) ZSM-5, a type of zeolite, is used to convert alcohols into gasoline.
- (d) CO is colorless and odourless gas.

- (1) (a) and (c) only
- (2) (b) and (c) only
- (3) (c) and (d) only
- (4) (a), (b) and (c) only

Answer (3)

Sol. • Dry ice, $\text{CO}_2(\text{s})$, is used as refrigerant

- C_{60} contains 20 six membered rings, 12 five membered rings

159. An element has a body centered cubic (bcc) structure with a cell edge of 288 pm. The atomic radius is

- (1) $\frac{\sqrt{2}}{4} \times 288 \text{ pm}$
- (2) $\frac{4}{\sqrt{3}} \times 288 \text{ pm}$
- (3) $\frac{4}{\sqrt{2}} \times 288 \text{ pm}$
- (4) $\frac{\sqrt{3}}{4} \times 288 \text{ pm}$

Answer (4)

Sol. For BCC,

$$\sqrt{3}a = 4r \quad \begin{array}{l} a = \text{edge length} \\ r = \text{radius} \end{array}$$

$$r = \frac{\sqrt{3}a}{4}$$

Given, $a = 288 \text{ pm}$

$$r = \frac{\sqrt{3}}{4} \times 288$$

160. Paper chromatography is an example of

- (1) Partition chromatography
- (2) Thin layer chromatography
- (3) Column chromatography
- (4) Adsorption chromatography

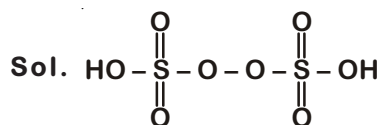
Answer (1)

Sol. Paper chromatography is a type of partition chromatography in which a special quality paper known as chromatography paper is used.

161. Which of the following oxoacid of sulphur has – O – O – linkage?

- (1) H_2SO_4 , sulphuric acid
- (2) $\text{H}_2\text{S}_2\text{O}_8$, peroxodisulphuric acid
- (3) $\text{H}_2\text{S}_2\text{O}_7$, pyrosulphuric acid
- (4) H_2SO_3 , sulphurous acid

Answer (2)



Peroxodisulphuric acid

162. The rate constant for a first order reaction is $4.606 \times 10^{-3} \text{ s}^{-1}$. The time required to reduce 2.0 g of the reactant to 0.2 g is :

- (1) 200 s (2) 500 s
(3) 1000 s (4) 100 s

Answer (2)

Sol. $k = \frac{2.303}{t} \log \frac{A_0}{A}$ (First order rate equation)

$$4.606 \times 10^{-3} = \frac{2.303}{t} \log \frac{2}{0.2}$$

$$t = \frac{2.303}{4.606 \times 10^{-3}} \times \log 10$$

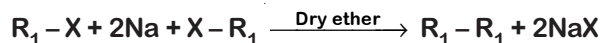
$$= \frac{10^3}{2} = 500 \text{ s}$$

163. Which of the following alkane cannot be made in good yield by Wurtz reaction?

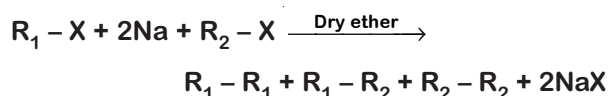
- (1) 2,3-Dimethylbutane
(2) n-Heptane
(3) n-Butane
(4) n-Hexane

Answer (2)

Sol. Wurtz reaction is used to prepare symmetrical alkanes like $R_1 - R_1$, as



If R_1 and R_2 are different, then mixture of alkanes may be obtained as



164. Match the following :

Oxide	Nature
(a) CO	(i) Basic
(b) BaO	(ii) Neutral
(c) Al_2O_3	(iii) Acidic
(d) Cl_2O_7	(iv) Amphoteric

Which of the following is correct option?

- (a) (b) (c) (d)
(1) (ii) (i) (iv) (iii)
(2) (iii) (iv) (i) (ii)
(3) (iv) (iii) (ii) (i)
(4) (i) (ii) (iii) (iv)

Answer (1)

Sol. CO : Neutral oxide

BaO : Basic oxide

Al_2O_3 : Amphoteric oxide

Cl_2O_7 : Acidic oxide

165. A mixture of N_2 and Ar gases in a cylinder contains 7 g of N_2 and 8 g of Ar. If the total pressure of the mixture of the gases in the cylinder is 27 bar, the partial pressure of N_2 is :

[Use atomic masses (in g mol^{-1}) : N = 14, Ar = 40]

- (1) 12 bar
(2) 15 bar
(3) 18 bar
(4) 9 bar

Answer (2)

$$\text{Sol. } n_{N_2} = \frac{7}{28} = \frac{1}{4} = 0.25$$

$$n_{Ar} = \frac{8}{40} = \frac{1}{5} = 0.20$$

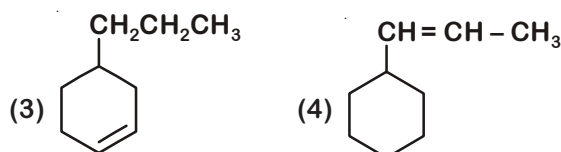
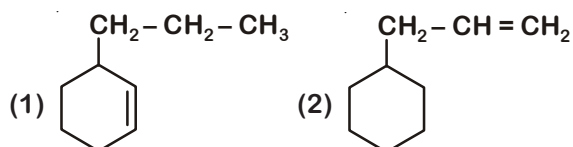
Now, Applying Dalton's law of partial

pressure, $p_{N_2} = (\chi_{N_2}) P_{\text{Total}}$

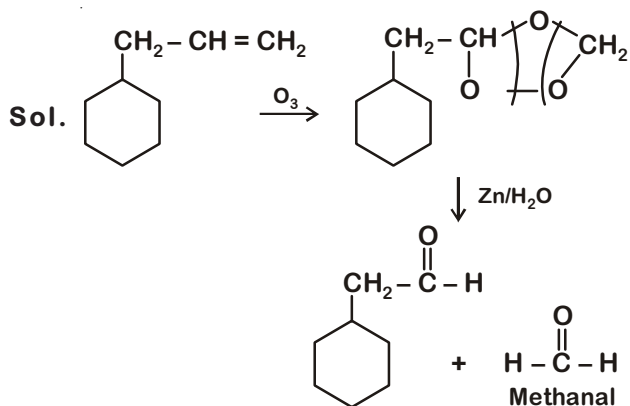
$$= \frac{0.25}{0.45} \times 27 \text{ bar}$$

$$= \frac{5}{9} \times 27 = 15 \text{ bar}$$

166. An alkene on ozonolysis gives methanal as one of the product. Its structure is



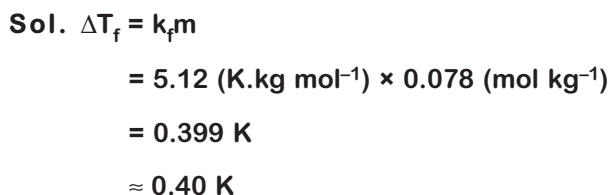
Answer (2)



167. The freezing point depression constant (K_f) of benzene is $5.12 \text{ K kg mol}^{-1}$. The freezing point depression for the solution of molality 0.078 m containing a non-electrolyte solute in benzene is (rounded off upto two decimal places) :

- (1) 0.80 K (2) 0.40 K
 (3) 0.60 K (4) 0.20 K

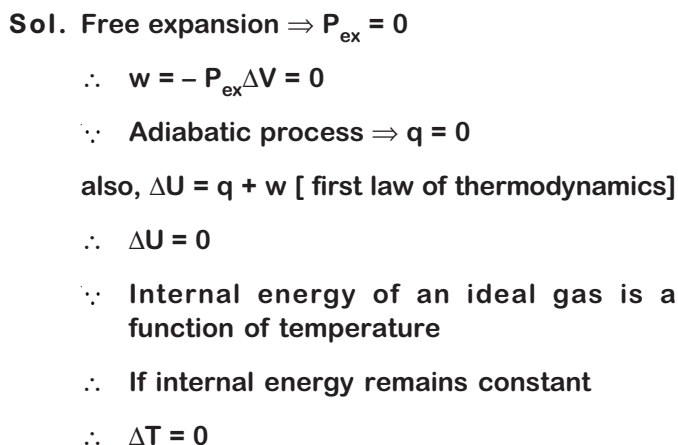
Answer (2)



168. The correct option for free expansion of an ideal gas under adiabatic condition is

- (1) $q = 0, \Delta T < 0$ and $w > 0$
 (2) $q < 0, \Delta T = 0$ and $w = 0$
 (3) $q > 0, \Delta T > 0$ and $w > 0$
 (4) $q = 0, \Delta T = 0$ and $w = 0$

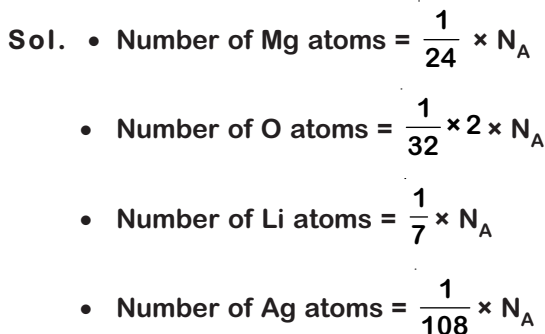
Answer (4)



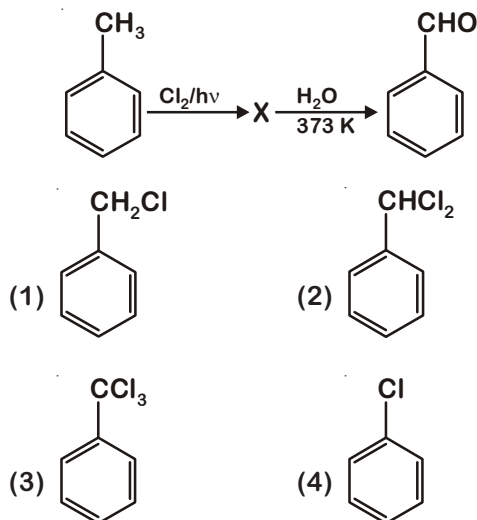
169. Which one of the followings has maximum number of atoms ?

- (1) 1 g of Mg(s) [Atomic mass of $\text{Mg} = 24$]
 (2) 1 g of $\text{O}_2(\text{g})$ [Atomic mass of $\text{O} = 16$]
 (3) 1 g of Li(s) [Atomic mass of $\text{Li} = 7$]
 (4) 1 g of Ag(s) [Atomic mass of $\text{Ag} = 108$]

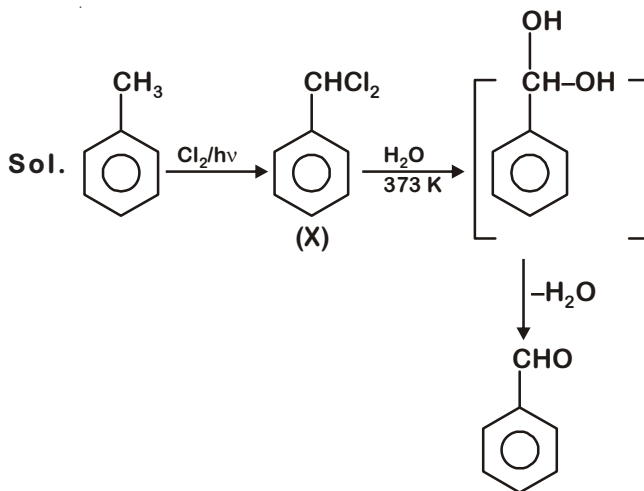
Answer (3)



170. Identify compound X in the following sequence of reactions



Answer (2)

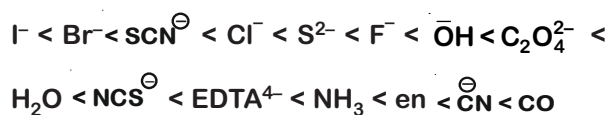


171. Which of the following is the correct order of increasing field strength of ligands to form coordination compounds?

- (1) $\text{SCN}^- < \text{F}^- < \text{CN}^- < \text{C}_2\text{O}_4^{2-}$
- (2) $\text{F}^- < \text{SCN}^- < \text{C}_2\text{O}_4^{2-} < \text{CN}^-$
- (3) $\text{CN}^- < \text{C}_2\text{O}_4^{2-} < \text{SCN}^- < \text{F}^-$
- (4) $\text{SCN}^- < \text{F}^- < \text{C}_2\text{O}_4^{2-} < \text{CN}^-$

Answer (4)

Sol. Spectrochemical series (as given in NCERT) :

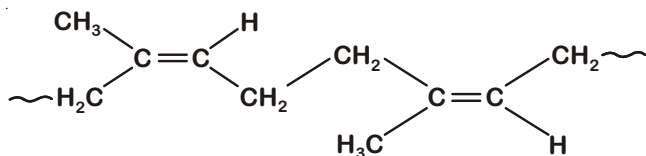


172. Which of the following is a natural polymer?

- (1) poly (Butadiene-styrene)
- (2) polybutadiene
- (3) poly (Butadiene-acrylonitrile)
- (4) cis-1, 4-polyisoprene

Answer (4)

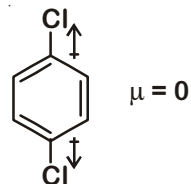
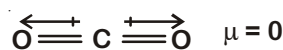
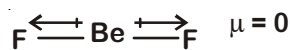
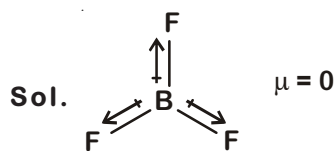
Sol. Naturally occurring polymer, natural rubber is cis-1, 4- polyisoprene



173. Which of the following set of molecules will have zero dipole moment?

- (1) Boron trifluoride, hydrogen fluoride, carbon dioxide, 1,3-dichlorobenzene
- (2) Nitrogen trifluoride, beryllium difluoride, water, 1,3-dichlorobenzene
- (3) Boron trifluoride, beryllium difluoride, carbon dioxide, 1,4-dichlorobenzene
- (4) Ammonia, beryllium difluoride, water, 1,4-dichlorobenzene

Answer (3)



174. HCl was passed through a solution of CaCl_2 , MgCl_2 and NaCl . Which of the following compound(s) crystallise(s)?

- (1) Only NaCl
- (2) Only MgCl_2
- (3) NaCl , MgCl_2 and CaCl_2
- (4) Both MgCl_2 and CaCl_2

Answer (1)

Sol. Since CaCl_2 and MgCl_2 are more soluble than NaCl , on passing $\text{HCl}(\text{g})$ through a solution containing CaCl_2 , MgCl_2 and NaCl then NaCl crystallizes out.

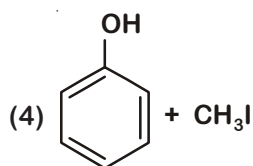
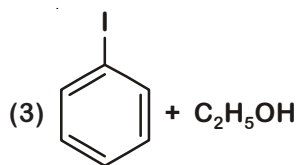
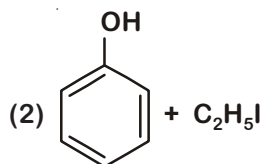
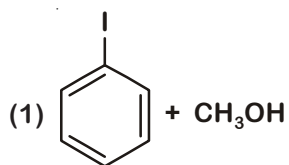
175. Which of the following is not correct about carbon monoxide ?

- (1) It reduces oxygen carrying ability of blood.
- (2) The carboxyhaemoglobin (haemoglobin bound to CO) is less stable than oxyhaemoglobin.
- (3) It is produced due to incomplete combustion.
- (4) It forms carboxyhaemoglobin

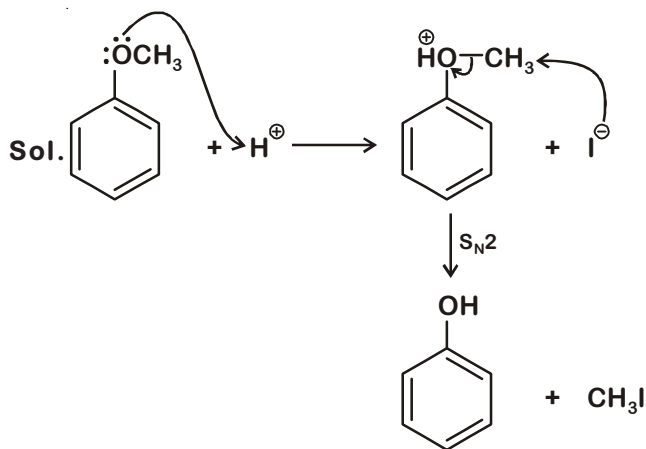
Answer (2)

Sol. The carboxyhaemoglobin is about 300 times more stable than oxyhaemoglobin.

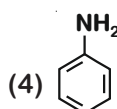
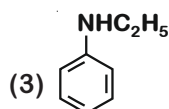
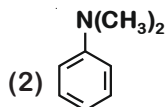
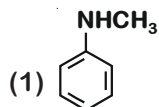
176. Anisole on cleavage with HI gives



Answer (4)



177. Which of the following amine will give the carbylamine test?



Answer (4)

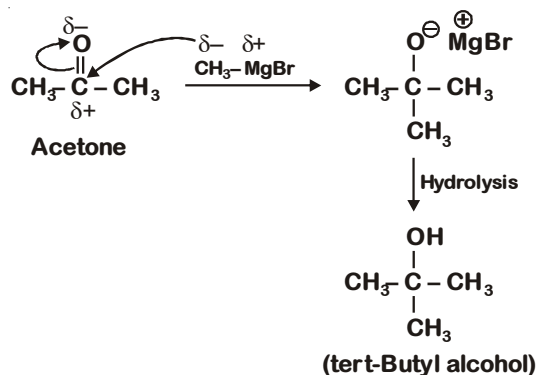
Sol. Aliphatic and aromatic primary amines give carbylamine reaction.

178. Reaction between acetone and methylmagnesium chloride followed by hydrolysis will give :

- (1) Sec. butyl alcohol (2) Tert. butyl alcohol
(3) Isobutyl alcohol (4) Isopropyl alcohol

Answer (2)

Sol.



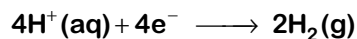
179. On electrolysis of dil. sulphuric acid using Platinum (Pt) electrode, the product obtained at anode will be

- (1) Oxygen gas (2) H₂S gas
(3) SO₂ gas (4) Hydrogen gas

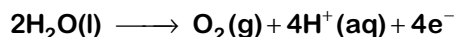
Answer (1)

Sol. During the electrolysis of dil. sulphuric acid using Pt electrodes following reaction will take place.

At cathode :



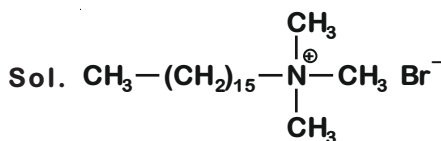
At anode :



180. Which of the following is a cationic detergent?

- (1) Sodium stearate
(2) Cetyltrimethyl ammonium bromide
(3) Sodium dodecylbenzene sulphonate
(4) Sodium lauryl sulphate

Answer (2)



Cetyltrimethyl ammonium bromide