

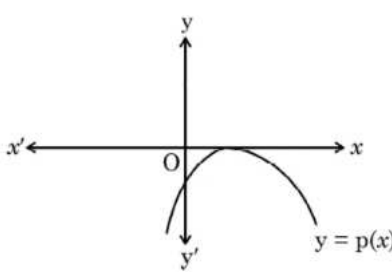
Marking Scheme
Strictly Confidential
(For Internal and Restricted use only)
Secondary School Examination, 2023
MATHEMATICS PAPER CODE 30/1/1

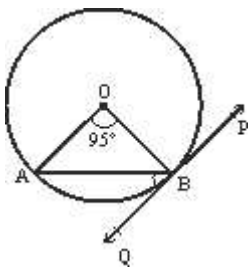
General Instructions: -

1	You are aware that evaluation is the most important process in the actual and correct assessment of the candidates. A small mistake in evaluation may lead to serious problems which may affect the future of the candidates, education system and teaching profession. To avoid mistakes, it is requested that before starting evaluation, you must read and understand the spot evaluation guidelines carefully.
2	“Evaluation policy is a confidential policy as it is related to the confidentiality of the examinations conducted, Evaluation done and several other aspects. Its’ leakage to public in any manner could lead to derailment of the examination system and affect the life and future of millions of candidates. Sharing this policy/document to anyone, publishing in any magazine and printing in News Paper/Website etc may invite action under various rules of the Board and IPC.”
3	Evaluation is to be done as per instructions provided in the Marking Scheme. It should not be done according to one’s own interpretation or any other consideration. Marking Scheme should be strictly adhered to and religiously followed. However, while evaluating, answers which are based on latest information or knowledge and/or are innovative, they may be assessed for their correctness otherwise and due marks be awarded to them.
4	The Marking scheme carries only suggested value points for the answers. These are in the nature of Guidelines only and do not constitute the complete answer. The students can have their own expression and if the expression is correct, the due marks should be awarded accordingly.
5	The Head-Examiner must go through the first five answer books evaluated by each evaluator on the first day, to ensure that evaluation has been carried out as per the instructions given in the Marking Scheme. If there is any variation, the same should be zero after deliberation and discussion. The remaining answer books meant for evaluation shall be given only after ensuring that there is no significant variation in the marking of individual evaluators.
6	Evaluators will mark (\surd) wherever answer is correct. For wrong answer CROSS ‘X’ be marked. Evaluators will not put right (\surd) while evaluating which gives an impression that answer is correct and no marks are awarded. This is most common mistake which evaluators are committing.
7	If a question has parts, please award marks on the right-hand side for each part. Marks awarded for different parts of the question should then be totaled up and written in the left-hand margin and encircled. This may be followed strictly.
8	If a question does not have any parts, marks must be awarded in the left-hand margin and encircled. This may also be followed strictly.
9	<u>In Q1-Q20, if a candidate attempts the question more than once (without canceling the previous attempt), marks shall be awarded for the first attempt only and the other answer scored out with a note “Extra Question”.</u>
10	<u>In Q21-Q38, if a student has attempted an extra question, answer of the question deserving more marks should be retained and the other answer scored out with a note “Extra Question”.</u>
11	No marks to be deducted for the cumulative effect of an error. It should be penalized only once.
12	A full scale of marks _____(example 0 to 80/70/60/50/40/30 marks as given in Question Paper) has to be used. Please do not hesitate to award full marks if the answer deserves it.

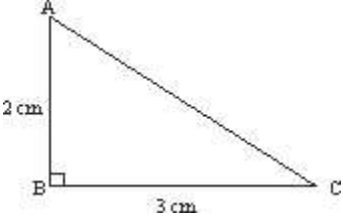
13	Every examiner has to necessarily do evaluation work for full working hours i.e., 8 hours every day and evaluate 20 answer books per day in main subjects and 25 answer books per day in other subjects (Details are given in Spot Guidelines). This is in view of the reduced syllabus and number of questions in question paper.
14	<p>Ensure that you do not make the following common types of errors committed by the Examiner in the past:-</p> <ul style="list-style-type: none"> ● Leaving answer or part thereof unassessed in an answer book. ● Giving more marks for an answer than assigned to it. ● Wrong totaling of marks awarded on an answer. ● Wrong transfer of marks from the inside pages of the answer book to the title page. ● Wrong question wise totaling on the title page. ● Wrong totaling of marks of the two columns on the title page. ● Wrong grand total. ● Marks in words and figures not tallying/not same. ● Wrong transfer of marks from the answer book to online award list. ● Answers marked as correct, but marks not awarded. (Ensure that the right tick mark is correctly and clearly indicated. It should merely be a line. Same is with the X for incorrect answer.) ● Half or a part of answer marked correct and the rest as wrong, but no marks awarded.
15	While evaluating the answer books if the answer is found to be totally incorrect, it should be marked as cross (X) and awarded zero (0)Marks.
16	Any un assessed portion, non-carrying over of marks to the title page, or totaling error detected by the candidate shall damage the prestige of all the personnel engaged in the evaluation work as also of the Board. Hence, in order to uphold the prestige of all concerned, it is again reiterated that the instructions be followed meticulously and judiciously.
17	The Examiners should acquaint themselves with the guidelines given in the “ Guidelines for spot Evaluation ” before starting the actual evaluation.
18	Every Examiner shall also ensure that all the answers are evaluated, marks carried over to the title page, correctly totaled and written in figures and words.
19	The candidates are entitled to obtain photocopy of the Answer Book on request on payment of the prescribed processing fee. All Examiners/Additional Head Examiners/Head Examiners are once again reminded that they must ensure that evaluation is carried out strictly as per value points for each answer as given in the Marking Scheme.

MARKING SCHEME
MATHEMATICS (Subject Code-041)
(PAPER CODE: 30/1/1)

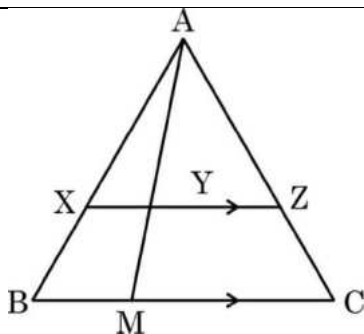
Q. No.	EXPECTED OUTCOMES/VALUE POINTS	Marks
	SECTION A Questions no. 1 to 18 are multiple choice questions (MCQs) and questions number 19 and 20 are Assertion-Reason based questions of 1 mark each	
1.	The graph of $y = p(x)$ is given, for a polynomial $p(x)$. The number of zeroes of $p(x)$ from the graph is (A) 3 (B) 1 (C) 2 (D) 0 <div style="text-align: center;">  </div>	
Sol.	(B) 1	1
2.	The value of k for which the pair of equations $kx = y + 2$ and $6x = 2y + 3$ has infinitely many solutions, (A) is $k = 3$ (B) does not exist (C) is $k = -3$ (D) is $k = 4$	
Sol.	(B) does not exist	1
3.	If $p - 1$, $p + 1$ and $2p + 3$ are in A.P., then the value of p is (A) -2 (B) 4 (C) 0 (D) 2	
Sol.	(C) 0	1
4.	In what ratio, does x -axis divide the line segment joining the points $A(3, 6)$ and $B(-12, -3)$? (A) $1 : 2$ (B) $1 : 4$ (C) $4 : 1$ (D) $2 : 1$	

Sol.	(D) 2 : 1	1
5.	<p>In the given figure, PQ is tangent to the circle centred at O. If $\angle AOB = 95^\circ$, then the measure of $\angle ABQ$ will be</p>  <p>(A) 47.5° (B) 42.5° (C) 85° (D) 95°</p>	
Sol.	(A) 47.5°	1
6.	<p>If $2 \tan A = 3$, then the value of $\frac{4 \sin A + 3 \cos A}{4 \sin A - 3 \cos A}$ is</p> <p>(A) $\frac{7}{\sqrt{13}}$ (B) $\frac{1}{\sqrt{13}}$ (C) 3 (D) does not exist</p>	
Sol.	(C) 3	1
7.	<p>If α, β are the zeroes of a polynomial $p(x) = x^2 + x - 1$, then $\frac{1}{\alpha} + \frac{1}{\beta}$ equals to</p> <p>(A) 1 (B) 2 (C) -1 (D) $-\frac{1}{2}$</p>	
Sol.	(A) 1	1
8.	<p>The least positive value of k, for which the quadratic equation $2x^2 + kx - 4 = 0$ has rational roots, is</p> <p>(A) $\pm 2\sqrt{2}$ (B) 2 (C) ± 2 (D) $\sqrt{2}$</p>	
Sol.	(B) 2	1
9.	<p>$\left[\frac{3}{4} \tan^2 30^\circ - \sec^2 45^\circ + \sin^2 60^\circ \right]$ is equal to</p> <p>(A) -1 (B) $\frac{5}{6}$ (C) $-\frac{3}{2}$ (D) $\frac{1}{6}$</p>	
Sol.	(A) -1	1

16.	Probability of happening of an event is denoted by p and probability of non-happening of the event is denoted by q . Relation between p and q is (A) $p + q = 1$ (B) $p = 1, q = 1$ (C) $p = q - 1$ (D) $p + q + 1 = 0$	
Sol.	(A) $p + q = 1$	1
17.	A girl calculates that the probability of her winning the first prize in a lottery is 0.08. If 6000 tickets are sold, how many tickets has she bought? (A) 40 (B) 240 (C) 480 (D) 750	
Sol.	(C) 480	1
18.	In a group of 20 people, 5 can't swim. If one person is selected at random, then the probability that he/she can swim, is (A) $\frac{3}{4}$ (B) $\frac{1}{3}$ (C) 1 (D) $\frac{1}{4}$	
Sol.	(A) $\frac{3}{4}$	1
Assertion-Reason Type Questions		
In Question 19 and 20, an Assertion (A) statement is followed by a statement of Reason (R) . Select the correct option out of the following : (A) Both Assertion (A) and Reason (R) are true and Reason (R) is the correct explanation of Assertion (A). (B) Both Assertion (A) and Reason (R) are true but Reason (R) is not the correct explanation of Assertion (A). (C) Assertion (A) is true but Reason (R) is false. (D) Assertion (A) is false but Reason (R) is true.		
19.	Assertion (A): Point $P (0, 2)$ is the point of intersection of y -axis with the line $3x + 2y = 4$. Reason (R): The distance of point $P (0, 2)$ from x -axis is 2 units.	
Sol.	(B) Both Assertion (A) and Reason (R) are correct but Reason (R) is not the correct explanation of Assertion (A)	1

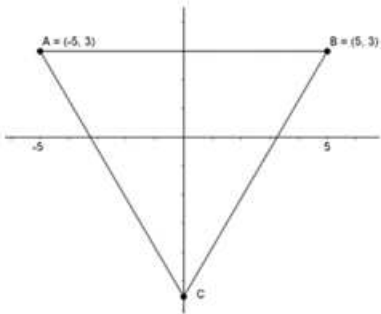
20.	<p>Assertion (A): The perimeter of $\triangle ABC$ is a rational number.</p> <p>Reason (R): The sum of the squares of two rational numbers is always rational.</p> 	
Sol.	(D) Assertion (A) is false but Reason (R) is true	1

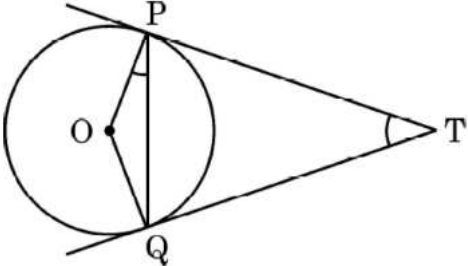
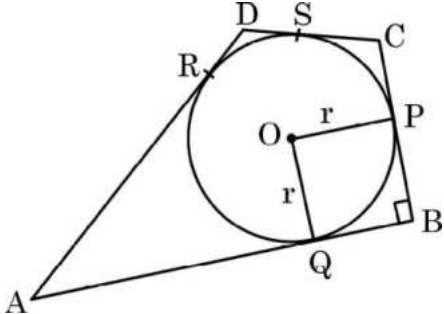
	<p>SECTION B</p> <p>This section comprises of Very Short Answer (VSA) type questions of 2 marks each.</p>	
21(a).	Solve the pair of equations $x = 3$ and $y = -4$ graphically.	
Sol.	<p>Correct graph of both the equations.</p> <p>Solution of equation is $x = 3, y = -4$</p>	<p>1</p> <p>1</p>
	OR	
21(b).	<p>Using graphical method, find whether following system of linear equations is consistent or not:</p> <p style="text-align: center;">$x = 0$ and $y = -7$</p>	
Sol.	<p>Correct graph of $y = -7$ and $x = 0$</p> <p>As $y = -7$ is intersecting $x = 0$ at $(0, -7)$</p> <p>So, system of equations is consistent</p>	<p>1</p> <p>1</p>
22.	In the given figure, XZ is parallel to BC. AZ = 3 cm, ZC = 2 cm, BM = 3 cm and MC = 5 cm. Find the length of XY.	

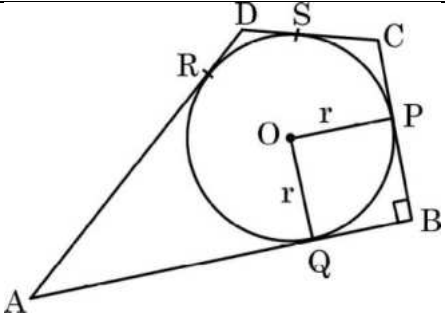


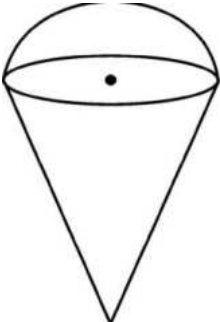
Sol.	<p>As $XZ \parallel BC$ Therefore $\frac{AX}{XB} = \frac{3}{2} = \frac{AZ}{ZC}$ - (i)</p> <p>$\Delta AXY \sim \Delta ABM$</p> <p>$\Rightarrow \frac{AX}{AB} = \frac{XY}{BM}$ or $\frac{3}{5} = \frac{XY}{3}$</p> <p>$\Rightarrow XY = \frac{9}{5}$ or 1.8 cm</p>	<p>$\frac{1}{2}$</p> <p>$\frac{1}{2}$</p> <p>$\frac{1}{2}$</p> <p>$\frac{1}{2}$</p>
23(a).	If $\sin\theta + \cos\theta = \sqrt{3}$, then find the value of $\sin\theta \cdot \cos\theta$.	
Sol.	<p>$\sin\theta + \cos\theta = \sqrt{3}$</p> <p>squaring both sides</p> <p>$\sin^2\theta + \cos^2\theta + 2\sin\theta\cos\theta = 3$</p> <p>$\Rightarrow 1 + 2\sin\theta\cos\theta = 3$</p> <p>$\Rightarrow \sin\theta\cos\theta = 1$</p>	<p>1</p> <p>$\frac{1}{2}$</p> <p>$\frac{1}{2}$</p>
OR		
23(b).	If $\sin\alpha = \frac{1}{\sqrt{2}}$ and $\cot\beta = \sqrt{3}$, then find the value of $\operatorname{cosec}\alpha + \operatorname{cosec}\beta$	

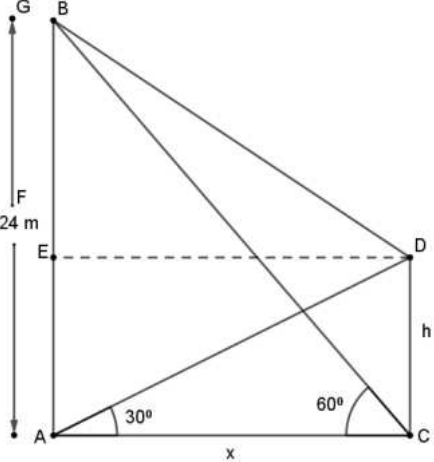
Sol.	$\operatorname{cosec} \alpha = \frac{1}{\sin \alpha} = \sqrt{2}$ $\operatorname{cosec} \beta = \sqrt{1 + \cot^2 \beta} = \sqrt{1 + 3} = 2$ $\therefore \operatorname{cosec} \alpha + \operatorname{cosec} \beta = \sqrt{2} + 2 \text{ or } \sqrt{2} (\sqrt{2} + 1)$	$\frac{1}{2}$ 1 $\frac{1}{2}$
24.	Find the greatest number which divides 85 and 72 leaving remainders 1 and 2 respectively.	
Sol.	<p>We have to find HCF of $85 - 1 = 84$ and $72 - 2 = 70$.</p> <p>HCF of 84 and 70 = 14</p>	1 1
25.	A bag contains 4 red, 3 blue and 2 yellow balls. One ball is drawn at random from the bag. Find the probability that drawn ball is (i) red (ii) yellow.	
Sol.	<p>Total No of Balls=9</p> <p>(i) $P(\text{drawn ball is red}) = \frac{4}{9}$</p> <p>(ii) $P(\text{drawn ball is yellow}) = \frac{2}{9}$</p>	1 1
<p>SECTION C</p> <p>This section comprises of Short Answer (SA) type questions of 3 marks each.</p>		
26.	Half of the difference between two numbers is 2. The sum of the greater number and twice the smaller number is 13. Find the numbers.	
Sol.	<p>Let the numbers be x and y, $x > y$</p> <p>Therefore $\frac{1}{2} (x - y) = 2$ — (i)</p> <p>and $2y + x = 13$ — (ii)</p> <p>Solving equations (i) and (ii)</p> <p>$x = 7, y = 3$</p>	1 1 1

27.	Prove that $\sqrt{5}$ is an irrational number.	
Sol.	<p>Let $\sqrt{5}$ be a rational number.</p> <p>$\therefore \sqrt{5} = \frac{p}{q}$, where $q \neq 0$ and let p & q be co-primes.</p> <p>$5q^2 = p^2 \Rightarrow p^2$ is divisible by 5 $\Rightarrow p$ is divisible by 5</p> <p>$\Rightarrow p = 5a$, where 'a' is some integer ----- (i)</p> <p>$25a^2 = 5q^2 \Rightarrow q^2 = 5a^2 \Rightarrow q^2$ is divisible by 5 $\Rightarrow q$ is divisible by 5</p> <p>$\Rightarrow q = 5b$, where 'b' is some integer ----- (ii)</p> <p>(i) and (ii) leads to contradiction as 'p' and 'q' are co-primes.</p> <p>$\therefore \sqrt{5}$ is an irrational number.</p>	<p>$\frac{1}{2}$</p> <p>1</p> <p>$\frac{1}{2}$</p> <p>1</p>
28.	If $(-5,3)$ and $(5,3)$ are two vertices of an equilateral triangle, then find coordinates of the third vertex, given that origin lies inside the triangle. (Take $\sqrt{3} = 1.7$)	
Sol.	 <p>Let the third vertex be (x,y)</p> <p>A $(-5,3)$ B $(5,3)$ C (x,y)</p> <p>$AB=10=AC$</p> <p>$AC^2=100$</p> <p>$(-5-x)^2+(3-y)^2 = (5-x)^2+(3-y)^2$</p> <p>$20x = 0$</p> <p>$x=0$</p> <p>$(3-y)^2=75$</p> <p>$3-y = \pm 5\sqrt{3}$</p> <p>$y=3-5\sqrt{3}$</p> <p>$y= -5.5$</p> <p>The coordinates of the third vertex are $(0,-5.5)$</p>	<p>1</p> <p>1</p> <p>$\frac{1}{2}$</p> <p>$\frac{1}{2}$</p>
29(a).	Two tangents TP and TQ are drawn to a circle with centre O from an external point T. Prove that $\angle PTQ = 2\angle OPQ$.	

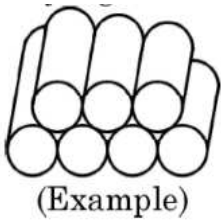
		
Sol.	<p>TP = TQ</p> <p>$\Rightarrow \angle TPQ = \angle TQP$</p> <p>Let $\angle PTQ$ be θ</p> <p>$\Rightarrow \angle TPQ = \angle TQP = \frac{180^\circ - \theta}{2} = 90^\circ - \frac{\theta}{2}$</p> <p>Now $\angle OPT = 90^\circ$</p> <p>$\Rightarrow \angle OPQ = 90^\circ - (90^\circ - \frac{\theta}{2}) = \frac{\theta}{2}$</p> <p>$\angle PTQ = 2 \angle OPQ$</p>	<p>1</p> <p>1</p> <p>1</p>
OR		
29(b).	<p>In the given figure, a circle is inscribed in a quadrilateral ABCD in which $\angle B = 90^\circ$. If AD=17 cm, AB = 20 cm and DS = 3 cm, then find the radius of the circle.</p> 	


Sol.	 <p>DR = DS = 3 cm</p> <p>$\therefore AR = AD - DR = 17 - 3 = 14$ cm</p> <p>$\Rightarrow AQ = AR = 14$ cm</p> <p>$\therefore QB = AB - AQ = 20 - 14 = 6$ cm</p> <p>Since $QB = OP = r \therefore$ radius = 6 cm</p>	<p>$\frac{1}{2}$</p> <p>1</p> <p>$\frac{1}{2}$</p> <p>$\frac{1}{2}$</p> <p>$\frac{1}{2}$</p>
30.	Prove that: $\frac{\tan \theta + \sec \theta - 1}{\tan \theta - \sec \theta + 1} = \frac{1 + \sin \theta}{\cos \theta}$	
Sol.	$\text{LHS} = \frac{(\tan \theta + \sec \theta) - (\sec^2 \theta - \tan^2 \theta)}{\tan \theta - \sec \theta + 1}$ $= \frac{(\tan \theta + \sec \theta)(1 - \sec \theta + \tan \theta)}{\tan \theta - \sec \theta + 1}$ $= \tan \theta + \sec \theta$ $= \frac{1 + \sin \theta}{\cos \theta} = \text{RHS}$	<p>1</p> <p>1</p> <p>$\frac{1}{2}$</p> <p>$\frac{1}{2}$</p>
31(a).	<p>A room is in the form of cylinder surmounted by a hemi-spherical dome. The base radius of hemisphere is one-half the height of cylindrical part. Find total height of the room if it contains $\left(\frac{1408}{21}\right)m^3$ of air. Take $\left(\pi = \frac{22}{7}\right)$</p>	

Sol.	<p>Let h be height of cylindrical part and r be radius of hemisphere</p> $\text{Volume of room} = 2\pi r^3 + \frac{2}{3}\pi r^3 = \frac{1408}{21}$ $\Rightarrow r = 2$ <p>Therefore, h=4</p> <p>Height of the room is = 6m</p>	<p>½</p> <p>1</p> <p>½</p> <p>½</p> <p>½</p>
OR		
31(b).	<p>An empty cone is of radius 3 cm and height 12 cm. Ice-cream is filled in it so that lower part of the cone which is $\left(\frac{1}{6}\right)^{th}$ of the volume of the cone is unfilled but hemisphere is formed on the top. Find volume of the ice-cream. (Take $\pi = 3.14$)</p> <div style="text-align: center;">  </div>	
Sol.	<p>Volume of the cone = $= \frac{1}{3} \times \pi \times 9 \times 12 = 36\pi cm^3$</p> <p>Volume of ice-cream in the cone = $= \frac{5}{6} \times 36 \times \pi = 30\pi cm^3$</p> <p>Volume of ice-cream on top = $= \frac{2}{3} \times 27 \times \pi = 18\pi cm^3$</p> <p>Total volume of the ice-cream = $(30\pi + 18\pi) = 48\pi cm^3$</p> <p>$= 48 \times 3.14 = 150.72 cm^3$</p>	<p>1</p> <p>½</p> <p>1</p> <p>½</p>
<p>SECTION D</p> <p>This section comprises of Long Answer (LA) type questions of 5 marks each.</p>		

32.	If a line is drawn parallel to one side of a triangle to intersect the other two sides at distinct points, prove that the other two sides are divided in the same ratio.	
Sol.	Correct Given, to prove, figure, construction Correct proof	2 3
33(a).	The angle of elevation of the top of a tower 24 m high from the foot of another tower in the same plane is 60° . The angle of elevation of the top of second tower from the foot of the first tower is 30° . Find the distance between two towers and the height of the other tower. Also, find the length of the wire attached to the tops of both the towers.	
Sol.	 <p>Let AB and CD be the given towers.</p> $\tan 30^\circ = \frac{1}{\sqrt{3}} = \frac{h}{x} \Rightarrow x = h\sqrt{3} \text{ --- (i)}$ $\tan 60^\circ = \sqrt{3} = \frac{24}{x} \Rightarrow x = \frac{24}{\sqrt{3}} \text{ or } 8\sqrt{3} \text{ --- (ii)}$ <p>using (i) and (ii)</p> $x = 8\sqrt{3} \text{ and } h = 8$ <p>length of wire = $\sqrt{BE^2 + x^2} = \sqrt{256 + 192} = \sqrt{448} \text{ m} = 8\sqrt{7} \text{ m}$</p>	1 mark for correct figure 1 1 $\frac{1}{2} + \frac{1}{2}$ 1

OR		
33(b).	A spherical balloon of radius r subtends an angle of 60° at the eye of an observer. If the angle of elevation of its centre is 45° from the same point, then prove that height of the centre of the balloon is $\sqrt{2}$ times its radius.	
Sol.	<p>Let Point B represents observer. $\therefore \angle QBP = 60^\circ; \angle ABO = 45^\circ$ Using geometry $\angle PBO = \frac{1}{2} \times 60^\circ = 30^\circ$ Now, $\frac{r}{OB} = \sin 30^\circ = \frac{1}{2} \Rightarrow OB = 2r$ — (i) Also $\frac{OA}{OB} = \sin 45^\circ = \frac{1}{\sqrt{2}} \Rightarrow OB = OA \sqrt{2}$ (ii) Using (i) and (ii) $OA = \sqrt{2} r$ or height of center of balloon = $\sqrt{2} r$ units</p>	1 mark for correct figure
34.	A chord of a circle of radius 14 cm subtends an angle of 60° at the centre. Find the area of the corresponding minor segment of the circle. Also find the area of the major segment of the circle.	
Sol.	$\text{Area of minor segment} = \frac{22}{7} \times 14 \times 14 \times \frac{60}{360} - \frac{1}{2} \times 14 \times 14 \times \frac{\sqrt{3}}{2}$ $= \left(\frac{308}{3} - 49\sqrt{3} \right) \text{cm}^2 \text{ or } 17.9\text{cm}^2$	1+1 1

	$\begin{aligned} \text{Area of major segment} &= \frac{22}{7} \times 14 \times 14 - \left(\frac{308}{3} - 49\sqrt{3} \right) \\ &= 616 - \frac{308}{3} + 49\sqrt{3} \\ &= \left(\frac{1540}{3} + 49\sqrt{3} \right) \text{cm}^2 \text{ or } 598.1 \text{cm}^2 \end{aligned}$	1 1
35(a).	The ratio of the 11 th term to 17 th term of an A.P. is 3:4. Find the ratio of 5 th term to 21 st term of the same A.P. Also, find the ratio of the sum of first 5 terms to that of first 21 terms.	
Sol.	<p>Given $\frac{a + 10d}{a + 16d} = \frac{3}{4}$</p> <p>$\Rightarrow 4a + 40d = 3a + 48d$</p> <p>$\Rightarrow a = 8d$ (i)</p> <p>therefore $\frac{a_5}{a_{21}} = \frac{a + 4d}{a + 20d} = \frac{3}{7}$ using (i)</p> <p>$a_5 : a_{21} = 3 : 7$</p> $\frac{s_5}{s_{21}} = \frac{\frac{5}{2}(2a + 4d)}{\frac{21}{2}(2a + 20d)} = \frac{5 \times 20d}{21 \times 36d} = \frac{25}{189}$ <p>Therefore, $S_5 : S_{21} = 25 : 189$</p>	1 1 1 2
	OR	
35(b).	<p>250 logs are stacked in the following manner: 22 logs in the bottom row, 21 in the next row, 20 in the row next to it and so on (as shown by an example). In how many rows, are the 250 logs placed and how many logs are there in the top row?</p> <div style="text-align: center;">  <p>(Example)</p> </div>	
Sol.	<p>Let the number of rows be n. A.P. formed is 22, 21, 20, 19,</p>	

	<p>Here $a = 22$, $d = -1$ $S_n = 250$</p> $\therefore 250 = \frac{n}{2} [44 + (n-1)(-1)]$ $\Rightarrow n^2 - 45n + 500 = 0$ $\Rightarrow (n-25)(n-20) = 0$ <p>$n \neq 25 \therefore n = 20$</p> <p>logs in top row = $a_{20} = 22 + 19(-1) = 3$</p>	<p>1</p> <p>1</p> <p>1</p> <p>1</p> <p>1</p>
	<p>SECTION E</p> <p>This section comprises of 3 case-study based questions of 4 marks each.</p>	
36.	<p>While designing the school year book, a teacher asked the student that the length and width of a particular photo is increased by x units each to double the area of the photo. The original photo is 18 cm long and 12 cm wide. Based on the above information, answer the following questions:</p> <p>(I) Write an algebraic equation depicting the above information.</p> <p>(II) Write the corresponding quadratic equation in standard form.</p> <p>(III) What should be the new dimensions of the enlarged photo?</p> <div style="text-align: center;">  </div> <p style="text-align: center;">OR</p> <p>Can any rational value of x make the new area equal to 220cm^2</p>	
Sol.	<p>(i) $(18 + x)(12 + x) = 2(18 \times 12)$</p> <p>(ii) $x^2 + 30x - 216 = 0$</p> <p>(iii) Solving : $x^2 + 30x - 216 = 0$</p> $\Rightarrow (x + 36)(x - 6) = 0$ $x \neq -36 \therefore \Rightarrow x = 6.$ <p>new dimensions are $24 \text{ cm} \times 18 \text{ cm}$</p>	<p>1</p> <p>1</p> <p>1</p> <p>1</p>

OR

(iii) If $(18 + x)(12 + x) = 220$

then $x^2 + 30x - 4 = 0$

Here $D = 900 + 16 = 916$ which is not a perfect square.

Thus we can't have any such rational value of x .

1
1

37.

India meteorological department observes seasonal and annual rainfall every year in different sub-divisions of our country.



It helps them to compare and analyse the results. The table given below shows sub-division wise seasonal (monsoon) rainfall (mm) in 2018:

Rainfall (mm)	Number of Sub-divisions
200-400	2
400-600	4
600-800	7
800-1000	4
1000-1200	2
1200-1400	3
1400 -1600	1
1600-1800	1

Based on the above information, answer the following questions:

(I) Write the modal class.

(II) Find the median of the given data.

OR

(II) Find the mean rainfall in this season.

(III) If sub-division having at least 1000 mm rainfall during monsoon season, is considered good rainfall sub-division, then how many sub-divisions had good rainfall?

Sol.

(i) Modal Class is 600-800

(ii) $\frac{N}{2} = 12$, median class is 600 – 800

Rainfall	x_i	f_i	cf.
200 – 400	300	2	2
400 – 600	500	4	6
600 – 800	700	7	13
800 – 1000	900	4	17
1000 – 1200	1100	2	19
1200 – 1400	1300	3	22
1400 – 1600	1500	1	23
1600 – 1800	1700	1	24
		24	

$$\begin{aligned}\text{Median} &= 600 + \frac{200}{7} (12 - 6) \\ &= \frac{5400}{7} \text{ or } 771.4\end{aligned}$$

OR

(ii)

Rainfall	x_i	f_i	$f_i x_i$
200 – 400	300	2	600
400 – 600	500	4	2000

1

$\frac{1}{2}$

$\frac{1}{2}$ for correct table

1

600 – 800	700	7	4900	1 for correct table
800 – 1000	900	4	3600	
1000 – 1200	1100	2	2200	
1200 – 1400	1300	3	3900	
1400 – 1600	1500	1	1500	
1600 – 1800	1700	1	1700	
		24	20400	

Mean = $\frac{20400}{24} = 850$

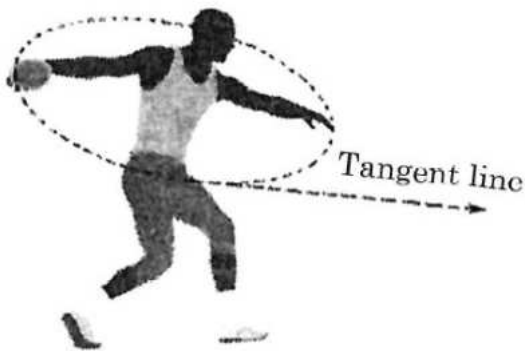
(iii) Sub-divisions having good rainfall = $2 + 3 + 1 + 1 = 7$.

1

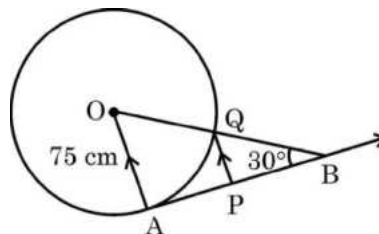
1

38.

The discus throw is an event in which an athlete attempts to throw a discus. The athlete spins anti-clockwise around one and a half times through a circle, then releases the throw. When released, the discus travels along tangent to the circular spin orbit.



In the given figure, AB is one such tangent to a circle of radius 75 cm. Point O is centre of the circle and $\angle ABO = 30^\circ$. PQ is parallel to OA.



	<p>Based on above information:</p> <p>(a) find the length of AB. (b) find the length of OB. (c) find the length of AP.</p> <p style="text-align: center;">OR</p> <p style="text-align: center;">Find the length of PQ</p>	
<p>Sol.</p>	<p>(i) $\tan 30^\circ = \frac{1}{\sqrt{3}} = \frac{75}{AB}$</p> <p>$\Rightarrow AB = 75\sqrt{3}$ cm</p> <p>(ii) $\sin 30^\circ = \frac{1}{2} = \frac{75}{OB}$</p> <p>$\Rightarrow OB = 150$ cm</p> <p>(iii) $QB = 150 - 75 = 75$ cm $\Rightarrow Q$ is mid point. of OB</p> <p>Since $PQ \parallel AO$ therefore P is mid point of AB</p> <p>Hence $AP = \frac{75\sqrt{3}}{2}$ cm.</p> <p style="text-align: center;">OR</p> <p>(iii) $QB = 150 - 75 = 75$ cm Now, $\triangle BQP \sim \triangle BOA$</p> <p>$\Rightarrow \frac{QB}{OB} = \frac{PQ}{OA}$</p> <p>$\Rightarrow \frac{1}{2} = \frac{PQ}{75}$</p> <p>$\Rightarrow PQ = \frac{75}{2}$ cm</p>	<p>$\frac{1}{2}$</p> <p>$\frac{1}{2}$</p> <p>$\frac{1}{2}$</p> <p>$\frac{1}{2}$</p> <p>1</p> <p>1</p> <p>$\frac{1}{2}$</p> <p>1</p> <p>$\frac{1}{2}$</p>

